

DIRECTORATE OF GOVERNMENT EXAMINATIONS, CHENNAI- 6
HSE SECOND YEAR EXAMINATION – MARCH/APRIL – 2023

PHYSICS KEY ANSWER

NOTE:

1. Answers written with Blue or Black ink only to be evaluated.
2. Choose the most suitable answer in Part A from the given alternatives and write the option code and their corresponding answer.
3. For answers in Part – II , Part – III , Part – IV like reasoning , explanation, narration description and listing of points, students may write in their own words but without changing the concepts and without skipping any point.
4. In numerical problems if formula is not written , marks should be given for the remaining correct steps.
5. In graphical representation, physical variables for X-axis and Y-axis should be marked.

TOTAL MARKS : 70

PART-I

Answer all the Questions :

15x1=15

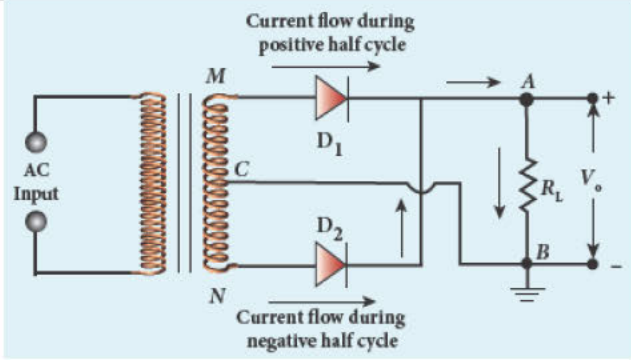
Q.NO	OPTION	TYPE-A	Q.NO	OPTION	TYPE-B
1	c	$\lambda_p \propto \lambda_e^2$	1	b	Shape memory alloys
2	c	$\frac{3}{8} I$	2	c	900 Vm^{-1}
3	c	900 Vm^{-1}	3	c	4.5Ω
4	c	4.5Ω	4	b	Water
5	d	Yellow–Violet–Orange–Silver	5	a	-40 V
6	d	$\frac{h}{\pi}$	6	a	+Z direction
7	b	2 D	7	c	Energy density
8	c	Energy density	8	b	2 D
9	a	+Z direction	9	d	1.1eV
10	b	30^0	10	c	$\frac{3}{8} I$
11	c	Voltage regulator	11	b	30^0
12	a	-40 V	12	d	Yellow–Violet–Orange–Silver
13	b	Water	13	d	$\frac{h}{\pi}$
14	d	1.1eV	14	c	Voltage regulator
15	b	Shape memory alloys	15	c	$\lambda_p \propto \lambda_e^2$

PART-II

Answer any **Six** Questions : **Q.No. 24 is Compulsory**

6x2=12

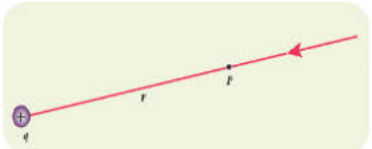
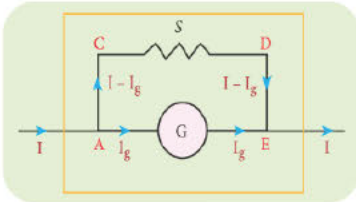
16	<p>The electric field at a point P at a distance r from the point charge q is defined as the force experienced by a unit charge placed at that point.</p> <p align="center">(or)</p> <p>The force experienced by unit positive charge (or)</p> $\vec{E} = \frac{\vec{F}}{q_0} \quad (\text{or}) \quad \vec{E} = K \frac{q}{r^2} \hat{r} \quad (\text{or}) \quad \vec{E} = \frac{1}{4\pi\epsilon_0} \frac{q}{r^2} \hat{r}$	2 2 1	2
17	<p>Q factor is defined as the ratio of voltage across L or C at resonance to Applied voltage.</p> <p align="center">(or)</p> $Q - \text{factor} = \frac{\text{Voltage across L (or) C at resonance}}{\text{Applied Voltage}}$ <p align="center">(or)</p> $Q = \frac{I_m X_L}{I_m R} \quad (\text{or}) \quad Q = \frac{X_L}{R} \quad (\text{or}) \quad Q = \frac{\omega r L}{R} \quad (\text{or}) \quad Q = \frac{1}{R} \sqrt{\frac{L}{C}}$	2 2 1	2
18	<p>The line integral of magnetic field over a closed loop is μ_0 times net current enclosed by the loop.</p> <p align="center">(or)</p> $\oint \vec{B} \cdot d\vec{\ell} = \mu_0 I_{\text{enclosed}}$	2 1	2
19	<p>The total internal reflection of light that happens inside the diamond.</p> <p>$n=2.417$ (or) $i_c = 24.4^\circ$</p>	1 1	2
20	$I \propto a^2 \quad (\text{or}) \quad I_1 \propto a_1^2 \quad \text{and} \quad I_2 \propto a_2^2$ $\frac{I_1}{I_2} = \frac{a_1^2}{a_2^2} \quad (\text{or}) \quad \frac{a_1}{a_2} = \sqrt{\frac{I_1}{I_2}} = \sqrt{\frac{36}{1}}$ $\frac{a_1}{a_2} = \frac{6}{1}$ <p align="center">(or)</p> $I \propto a^2 \quad (\text{or}) \quad I_{\text{max}} \propto (a_1 + a_2)^2 \quad \text{and} \quad I_{\text{min}} \propto (a_1 - a_2)^2$ $\frac{I_{\text{max}}}{I_{\text{min}}} = \frac{(a_1 + a_2)^2}{(a_1 - a_2)^2} \quad (\text{or}) \quad \frac{(a_1 + a_2)}{(a_1 - a_2)} = \sqrt{\frac{I_{\text{max}}}{I_{\text{min}}}} = \sqrt{\frac{36}{1}}$ $\frac{(a_1 + a_2)}{(a_1 - a_2)} = \frac{6}{1} \quad \text{and} \quad \frac{a_1}{a_2} = \frac{7}{5}$	1 1/2 1/2 1 1/2 1/2	2
21	<p>The minimum energy needed for an electron to escape from the metal surface is called work function</p> <p>Unit - eV or Joule</p> <p align="center">(or)</p> $\phi_0 = h \nu_0$	1 1/2 1/2 1	2

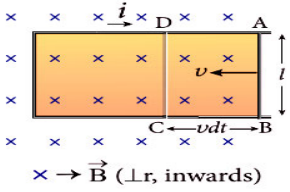
22	Activity or decay rate Unit : Becquerel (or) curie (or) $R = \left \frac{dN}{dt} \right $ (or) $R = \lambda N_0 e^{-\lambda t}$ (or) $R = R_0 e^{-\lambda t}$ (or) $R = \lambda N$	cl e r seco d.	1½ ½ 1	2
23			2	2
24	$R_T = R_0 (1 + \alpha (T - T_0))$ Substitution Answer 3.96 Ω		1 ½ ½	2

PART-III

Answer Any Six ue to : Q.No. 33 is Compulsory

6×3=18

25	Diagram Upto $V = -\frac{1}{4\pi\epsilon_0} \int_{\infty}^r \frac{q}{r^2} \cdot r \cdot dr$ $V = \frac{1}{4\pi\epsilon_0} \frac{q}{r}$		1 1 1	3
26	Kirchhoff's current law : The algebraic sum of the currents entering a junction in a circuit is zero. Kirchhoff's voltage law : It states that in a closed circuit, the algebraic sum of the products of the current and resistance of each part of the circuit is equal to the total emf included in the circuit.		1½ 1½	3
27	Diagram Upto $S = \frac{I_g}{I - I_g} R_g$ (or) $I_g = \frac{S}{S + R_g} I$ $\frac{1}{R_{eff}} = \frac{1}{R_g} + \frac{1}{S}$ (or) $R_{eff} = \frac{R_g S}{R_g + S}$ (or) $\theta = \frac{1}{G} I_g$ (or) $\theta \propto I_g$ (or) $\theta \propto I$		1 ½ 1 ½	3

28	Diagram & Explanation upto $\frac{d\phi_B}{dt} = Blv$ $\mathcal{E} = Blv$		1 1 1	3
29	Line emission spectrum are known as Fraunhofer lines. Fraunhofer lines are various lines in the solar spectrum which helps in identifying elements in the sun's atmosphere		2 1	3
30	$R_{\text{net}} = 2 + 2 = 4\Omega$ $I = \frac{V}{R} = \frac{10}{4}$ $I = 2.5 \text{ A}$		1 1 1	3
31	Optical path difference is defined as the distance light travels in vacuum when it travels a distance d in the medium Optical path $d' = n d$ Where, d' --- distance travelled by the light in vacuum n --- Refractive index of the medium d --- distance travelled by the light in medium		1½ ½ 1	3
32	Assertion - any Three		3×1	3
33	Number of atoms in 1 kg of ${}^{235}_{92}\text{U}$ $N = \frac{6.02 \times 10^{23}}{235} \times 1000$ Total energy, $Q = \frac{6.02 \times 10^{26}}{235} \times 200 \text{ MeV} = 5.123 \times 10^{26} \text{ MeV}$ In terms of joule, $Q = 8.197 \times 10^{13} \text{ J}$		1 1 1	3

PART-IV

Answer all the Questions :

5×5=25

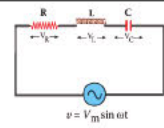
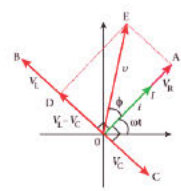
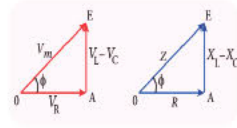
34 (a)	(i) Coulomb's law – Statement (or) Formula	2 1	5
	(ii) Differences between gravitational force (Any Three)	3	
(OR)			

34 (b)	Diagram		1	5
	Explanation		1	
	upto $\theta = \frac{\pi}{N}$		1	
	upto $t = \frac{\pi}{N\omega}$		1	
	$V = \frac{2dN\omega}{\pi}$		1	

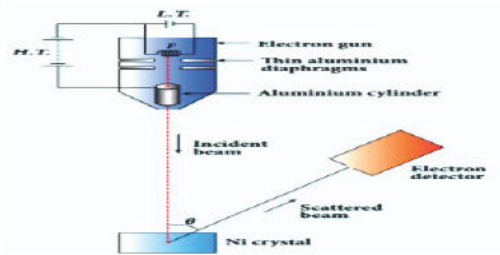
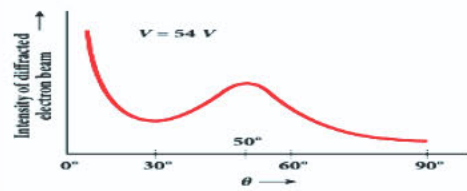
35 (a)	Principle		1	5
	Diagram		1	
	C n r u o a d o r k i g		1	
	Upto $r = \frac{mv}{Bq}$		1	
	$f = \frac{Bq}{2\pi m}$ (or) $T = \frac{2\pi m}{Bq}$ (or) $KE = \frac{q^2 B^2 r^2}{2m}$		1	

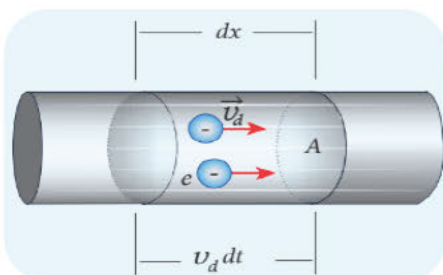
(OR)

35 (b)	Diagram		1	5
	Explanation		1	
	Path difference $\delta = \frac{a}{2} \sin\theta$		1	
	Condition for first minimum $a \sin\theta = \lambda$		1	
	Condition for n th minimum $a \sin\theta = n\lambda$		1	

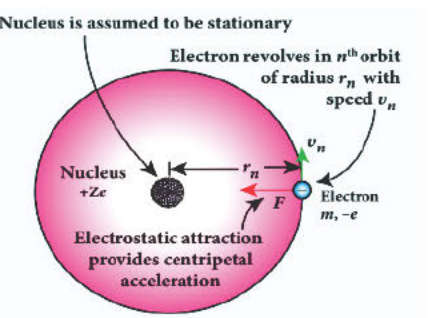
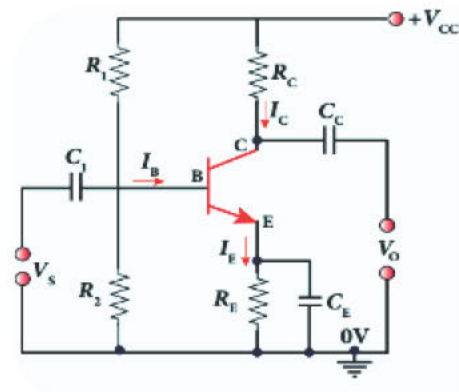
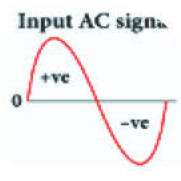
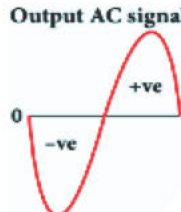
36 (a)	<p>Series RLC circuit Diagram & Explanation</p>  <p>Phasor diagram</p>  <p>OR</p>  <p>Upto $V_m^2 = V_R^2 + (V_L - V_C)^2$</p> <p>Upto $Z = \sqrt{R^2 + (X_L - X_C)^2}$</p> <p>$\tan \phi = \frac{V_L - V_C}{V_R}$ (or) $\tan \phi = \frac{X_L - X_C}{R}$</p>	1 1 1 1	5
--------	--	------------------	---

(OR)

36 (b)	<p>Diagram</p>  <p>Explanation</p> <p>Graph</p>  <p>$\lambda = \frac{12.27}{\sqrt{V}} \text{Å} = \frac{12.27}{\sqrt{54}} \text{Å} = 1.67 \text{Å}$</p>	1 2 1 1	5
--------	---	------------------	---

37 (a)	<p>Diagram</p>  <p>Explanation</p> <p>Up to $I = \frac{dQ}{dt}$</p> <p>$I = n e A v_d$</p> <p>$\vec{j} = -\sigma \vec{E}$ (or) $\vec{j} = \sigma \vec{E}$</p>	1 1 1 1	5
--------	---	------------------	---

(OR)

<p>37</p> <p>(b)</p>	<p>Diagram</p> <p>Upto $\vec{F}_{coulomb} = \vec{F}_{entripetal}$</p> $r_n = \frac{4\pi\epsilon_0(mv_n r_n)^2}{Zme^2}$ <p>Upto $r_n = a_0 \frac{n^2}{Z}$</p> $v_n = \frac{h}{2\pi m a_0} \frac{Z}{n} \quad (\text{or}) \quad v_n \propto \frac{1}{n}$		<p>1</p> <p>1</p> <p>1</p> <p>1</p> <p>1</p>	<p>5</p>
<p>38 (a)</p>	<p>Any Four r p r i s of M waves</p> $n = \sqrt{\epsilon_r \mu_r}$ $n = \sqrt{2.5 \times 2.25} = 2.37 \quad (\text{no unit})$	<p>4x1</p> <p>1/2</p> <p>1/2</p>	<p>5</p>	
<p>(OR)</p>				
<p>38 (b)</p>	<p>Circuit diagram</p>  <p>Explanation</p> $I_C = \beta I_B \quad (\text{or}) \quad \beta = \frac{I_C}{I_B} \quad (\text{or}) \quad V_{CE} = V_{CC} - I_C R_C$ <p>an o d n p s t v e half cycle</p> <p>an o d n N g a t i v e half cycle</p>	 	<p>1</p> <p>1</p> <p>1</p> <p>1</p>	<p>5</p>