

## RRB NTPC Previous Year Paper 20

**Q1.** Leukemia is a type of human disease which is

- (a) a cancer of the white blood cells
- (b) caused by deficiency of vitamins
- (c) a cancer in the brain
- (d) caused by an overdose of proteins

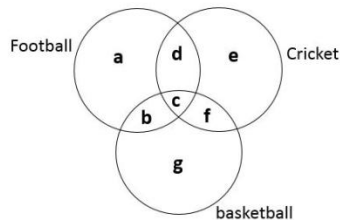
**Q2.** If  $\sqrt{625} = 25$ ; then  $\sqrt{.000000625/25}$  is:

- (a) 0.0025
- (b) 0.001
- (c) 0.0001
- (d) 0.0005

**Q3.** 30 pens and 75 pencils were purchased for Rs. 390. If the average price of a pencil is Rs. 2.00, then calculate the average price (in Rs.) of a pen.

- (a) 6
- (b) 4
- (c) 8
- (d) 12

**Directions (4-6):** The figure given below consists of three intersecting circles which represent sets of students who play Football, Cricket and Basket Ball. Each region in the figure is represented by a small letter.



**Q4.** Which region represents the set of persons who play Football and Basket Ball but not Cricket?

- (a) Region g
- (b) Region e
- (c) Region c
- (d) Region b

**Q5.** Which region represents the set of persons who play Football but neither Cricket nor Basket Ball?

- (a) Region a
- (b) Region b
- (c) Region c
- (d) Region d

**BILINGUAL**

**LIVE**



**MISSION**  
**RRB NTPC 2020**  
Complete Preparation Pack

Live Class | Test Series | Ebooks

**Q6.** Which region represents the set of persons who play all the three games?

- (a) Region b
- (b) Region c
- (c) Region f
- (d) Region g

**Q7.** Hemant said to Naitik, "That boy playing with the football is the younger of the two brothers of the daughter of my father's wife." How is the boy playing football related to Hemant?

- (a) Son
- (b) Brother
- (c) Cousin
- (d) Nephew

**Q8.** Which of the following is not an output device?

- (a) Plotter
- (b) Speaker
- (c) Printer
- (d) Scanner

**Q9.** \_\_\_\_\_ was the first satellite launched by U.S in 1958.

- (a) Sputnik 1
- (b) Apollo 11
- (c) GSAT
- (d) Explorer 1

**Q10.** Two pipe, A & B can fill a tank in 12 & 16 minutes respectively. Both pipes are opened together, but 4 minute before the tank is full, pipe A is closed. In how many minutes will the tank be full?

- (a) 9 minutes 8 seconds
- (b) 10 minutes 9 seconds
- (c) 11 minutes 19 seconds
- (d) 11 minutes 29 seconds

**Q11.** Name the monument which signifies the "seat of the holy Buddha" where it is believed that Lord Buddha delivered his first sermon.

- (a) Dhamekh Stupa, Sarnath
- (b) Sanchi Stupa, Sanchi
- (c) Shingardar Stupa, Swat valey
- (d) Dro-dul Chorten, Gangtok

**Q12.** Complete the Figure X from the given alternatives 1, 2, 3, 4



- (a) 1
- (b) 2
- (c) 3
- (d) 4

**Directions (13-15):** Based on the below given information, answer the questions:

In an Exhibition, seven air conditioners of different companies – LG, Carrier, Samsung, Godrej, Whirlpool, Hitachi and Videocon are kept facing east in the following order :

LG is next to right of Videocon.

Videocon is fourth to the right of Samsung.

Godrej air conditioner is between air conditioner Carrier and Hitachi.

Samsung, which is third to the left of air conditioner Carrier, is at one end.

**Q13.** Which one of the following statements is correct?

- (a) Videocon air conditioner is in between air conditioner Carrier and Samsung.
- (b) LG is next left to Whirlpool air conditioner.
- (c) Videocon is next right of L.G.
- (d) Godrej is fourth right of Whirlpool.

**Q14.** Which of the following groups of air conditioners is to the right of air conditioner Carrier?

- (a) L.G, Videocon and Godrej
- (b) Whirlpool, L.G and Videocon
- (c) Godrej, Hitachi and Samsung
- (d) Hitachi, L.G and Videocon

**Q15.** Which of the following statements is correct?

- (a) Godrej is next left of air conditioner Carrier.
- (b) Hitachi is next left of Samsung.
- (c) Hitachi is at one end.
- (d) Samsung is next second to the right of Godrej.

**Q16.** Abdur Rahman and British Raj representative Mr. Mortimer signed an agreement establishing \_\_\_\_\_.

- (a) Radcliffe Line
- (b) Durand Line
- (c) Mortimer Line
- (d) Macmohan Line

**Q17.** Four words are given below out of which three are alike in some manner and one is different. Which one is different from the rest?

- (a) Tower
- (b) Sea
- (c) Valley
- (d) Mountain

**Q18.** Name the committee, appointed to identify the creamy layer among the OBCs, which submitted its report in 1993 and was accepted?

- (a) Dr. K M Munshi Committee
- (b) G V Mavalankar Committee
- (c) Ram Nandan Committee
- (d) Swaran Singh Committee

**Bilingual**

**Special Offer**

**RRB NTPC  
CBT I**

**65 TOTAL TESTS**

**Q19.** What is the cause of bio-magnification (or bio-accumulation)?

- (a) Ozone
- (b) Organochlorines
- (c) Lichens
- (d) Proteins

**Q20.** Which of the following power houses is/are associated with Damodar Valley Project?

- I. Durgapur II. Chandrapura
- III. Maithon IV Hampi

**Choose the right option.**

- (a) Only I and II
- (b) Only II and III
- (c) I, II and III
- (d) I, II, III and IV

**Q21.** Construction of the Qutub Minar, the world's tallest brick minaret commenced in 1193, under the orders of \_\_\_\_\_, the founder of the Delhi Sultanate.

- (a) Firoz Shah Tughlaq
- (b) Qutub-ud-din Aibak
- (c) Iltumish
- (d) Quali Qutub Shah

**Q22.** Krishnanattam is a famous dance of which of the following states?

- (a) Andhra Pradesh
- (b) Karnataka
- (c) Kerala
- (d) Tamilnadu

**Q23.** The Chief Election Commissioner of India holds the office for \_\_\_\_.

- (a) 60 years of age or for six years, whichever early
- (b) 65 years of age or for six years, whichever early
- (c) 70 year of age or for six years, whichever early
- (d) 55 year of age or for five years, whichever early

**Q24.** Who among the following musicians who lived between 1253 and 1325 AD, was traditionally considered as the inventor of tabla and sitar?

- (a) Tansen
- (b) Amir Khusro
- (c) Swami Shastri
- (d) Baiju Bawra

**Q25.** A thief is 400 m ahead of a policeman. The thief started running and the policeman started chasing simultaneously. Assuming the speed of thief be 10km/h & policeman be 15 km/h, calculate the distance (in metres) covered by thief before the policeman caught the thief?

- (a) 750 m
- (b) 800 m
- (c) 850 m
- (d) 900 m

**Q26.** Oil zapper technology to remove oil spills in ocean, is developed by?

- (a) IIT
- (b) TERI
- (c) CSE
- (d) ISRO

**Q27.** The Union Government has released a commemorative postage stamp to mark the Centenary year of \_\_\_\_\_, which is the apex institution on fauna taxonomy in India.

- (a) Zoological Survey of India.
- (b) Archaeological Survey of India
- (c) National Animal Species Survey of India
- (d) National Sample Survey Organization

**Q28.** Which Bank launched India's first contactless mobile payment solution?

- (a) AXIS
- (b) SBI
- (c) ICICI
- (d) HDFC

**Q29.** The presence of ozone in the \_\_\_\_\_ prevents sun's harmful ultraviolet (UV) radiations from reaching the earth's surface.

- (a) Troposphere
- (b) Mesosphere
- (c) Stratosphere
- (d) Thermosphere

**Q30.** If  $\sqrt{5} = 2.236$ ; then  $\sqrt{5} / \sqrt{2}$  is:

- (a) 1.581
- (b) 1.851
- (c) 2.236
- (d) 1.782

**Q31.** The HCF of two numbers is 16 and their difference is 16. Find the numbers.

- (a) 64, 80
- (b) 72, 88
- (c) 80, 100
- (d) 96, 120


**Q32.** In 2001, the production of sugar is 1584 million kgs which is 20% more than that in 1991. Find the production (in million kgs) of sugar in 1991.

- (a) 1980
- (b) 1280
- (c) 1300
- (d) 1320

**Q33.** Who has been selected to the board of governors of the World



TEST SERIES  
Bilingual



**RRB NTPC  
PREMIUM**

- ◆ CBT-I and CBT-II
- ◆ 30 Previous Year Papers

**120 TOTAL TESTS**

Water Council (WWC) for 2016-18 in the 7<sup>th</sup> general assembly of WWC held at Marseille, France?

- (a) Chaudhary Birender Singh
- (b) Ram Kripal Yadav
- (c) Sanwar Lal Jat
- (d) Prithivi Raj Singh

**Q34.** There are over \_\_\_\_ capillaries in our lungs.

- (a) 100 million
- (b) 200 million
- (c) 400 million
- (d) 300 million

**Q35.** In a certain code language, if MOBILE is coded as 713694 and TBLET is coded as 253942, then BALLET will be coded as?

- (a) 329954
- (b) 359942
- (c) 395942
- (d) 359429

**Q36.** A & B can finish a work in 12 days, B & C in 15 days and A & C in 20 days. In how many days would A alone finish the work?

- (a) 20
- (b) 30
- (c) 40
- (d) 60

**Q37.** \_\_\_\_\_ is the first indigenous aircraft of India designed and built by HAL.

- (a) HF 25 MKI
- (b) HF 24
- (c) HT 3 MKI
- (d) HF 28

**Q38.** A tennis player, won 18 games out of 27 games played. Calculate the games won in terms of decimal.

- (a) 0.667
- (b) 0.067
- (c) 0.50
- (d) 0.333

**Q39.** The value of  $\tan 45^\circ$  is:

- (a)  $\sqrt{3}$
- (b)  $\sqrt{3/2}$
- (c)  $1/\sqrt{3}$
- (d) 1

**Q40.** The expenses of a person increases by Rs. 5000 for every month in February and March. If his expenses in January was Rs. 5000, Calculate his average expenditure (in Rs.) from January to March.

- (a) 10000
- (b) 15000
- (c) 7500
- (d) 5000

**Q41.** If Rahul walks at 4 km/h, he reaches office late by 10 minutes of the scheduled time. If he walks at 5 km/h he reaches office 5 minutes ahead of scheduled time. Calculate the distance of his office from his home.

- (a) 4 km
- (b) 6 km
- (c) 5 km
- (d) 8 km

**Q42.** Why it is remarked that “the pocket of the Indian President is bigger than that of the American President” in reference to Pocket Veto Power of the President?

- (a) The power of the Indian President not to take any action (either positive or negative) on the bill for an indefinite period.
- (b) The President of USA has to return the bill for reconsideration within 10 days, as against 30 days for the Indian President.
- (c) The President of USA has to return the bill for reconsideration within 10 days, as against 20 days for the Indian President.
- (d) The President of USA can't return the bill for reconsideration, if he kept it for more than 10 days, while that is not the case with the Indian President.

**Q43.** A straight angle is equal to?

- (a)  $90^\circ$
- (b)  $180^\circ$
- (c)  $270^\circ$
- (d)  $360^\circ$

**Q44.** Pointing to the lady in the metro, Twinkle said, “She is the sister of the father of my mother’s son.” Who is the lady to Twinkle?

- (a) Mother
- (b) Sister
- (c) Aunt
- (d) Niece

**Q45.** Read the statements and select a conclusion from the given alternatives:

**Statements:** Some doors are shelves.

All the shelves are windows.

**Conclusions:** 1. Some doors are windows.

2. No shelf is door

- (a) Only (1) conclusion follows
- (b) Only (2) conclusion follows
- (c) Either (1) or (2) follows
- (d) Neither (1) nor (2) follows

**Q46.** If the average age of 40 students in Class I is 10 years and the average age of 30 students in Class II is 12 years, find the average age (in years) for all students.

- (a) 11
- (b) 10.54
- (c) 10.58
- (d) 10.85

**TEST SERIES**  
**Bilingual**



AAI

Junior Executive  
(ATC)

10 Full-Length Mocks

**Q47.** Pointing to a person, Arnav said to Preeti, "His mother is the only daughter of your father". How was Preeti related to that person?

- (a) Aunt
- (b) Mother
- (c) Wife
- (d) Daughter

**Q48.** Fill in the blanks with suitable option:

A /An \_\_\_\_\_ turns blue litmus red and a/an \_\_\_\_\_ turns \_\_\_\_\_ litmus blue.

- (a) Base, acid, red
- (b) Acid, base, green
- (c) Base, acid, pink
- (d) Acid, base, red

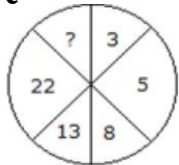
**Q49.** Which city hosted the first 'Indian International Science Festival, 2015'?

- (a) Kolkata
- (b) Bangalore
- (c) New Delhi
- (d) Chennai

**Q50.** In a fruit basket, the ratio of number of apples to bananas is A and the ratio of bananas to apples is B; then A+B is:

- (a) exactly 1
- (b) less than one
- (c) more than one
- (d) zero

**Q51.** Insert the missing character in?

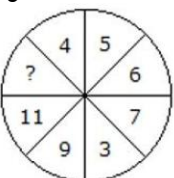


- (a) 45
- (b) 29
- (c) 39
- (d) 37

**Q52.** When was the GSLV used in India for the first time?

- (a) 1980
- (b) 1987
- (c) 1994
- (d) 2001

**Q53.** Insert the missing character in?



- (a) 13



- (b) 14
- (c) 12
- (d) 15

**Q54.** What fraction of 2 hours in 18 seconds?

- (a)  $1/200$
- (b)  $1/300$
- (c)  $1/400$
- (d)  $1/600$

**Q55.** Gitesh took a loan for 6 years at 5% Simple Interest. If the total interest paid was Rs. 615, calculate the principal.

- (a) Rs. 2000
- (b) Rs. 2050
- (c) Rs. 2100
- (d) Rs. 2150

**Q56.** Read the statements and select a conclusion from the given alternatives:

Statements: The national norm is 100 classrooms per thousand population, but in this state, 150 classrooms per thousand are available in the schools.

**Conclusions:** 1. Our national norm is appropriate.

2. This state's education system is taking adequate care in this regard.

**Choose the right option.**

- (a) Only conclusion I follows
- (b) Only conclusion II follows
- (c) Either I or II follows
- (d) Neither I nor II follows

**Q57.** If  $40x^2 = 734^2 - 234^2$ , then find the value of x.

- (a) 110
- (b) 121
- (c) 11
- (d) 144

**Q58.** Which of the following may cause the breakdown of pyruvate into lactic acid in our muscles?

- (a) Lack of water
- (b) Lack of Oxygen
- (c) Lack of carbon dioxide
- (d) Lack of nitrogen

**Q59.** A blue, violet, or red flavonoid pigment found in plants is due to the presence of

- (a) Carotene
- (b) Anthocyanin
- (c) Xanthophylls
- (d) Chlorophyll

**NRA-CET Ready**

**ALL EXAM**

BANK | SSC | TEACHING & OTHERS

**TEST PACK**

**12 Months Validity\***

**Q60.** Which of the following chemical reactions is always endothermic in nature?

- (a) Combustion reaction
- (b) Decomposition reaction
- (c) Displacement reaction
- (d) Combination reaction

**Q61.** Who is the author of famous autobiography "Dreaming Big: My Journey to Connect India"?

- (a) Abdul Kalam
- (b) Sam Pitroda
- (c) Nandan Nilekani
- (d) Azim Premji

**Q62.** If  $4\sin\theta - 3\cos\theta = 0$ , then  $\sec\theta \cdot \operatorname{cosec}\theta$  is:

- (a)  $5/12$
- (b)  $25/12$
- (c)  $13/12$
- (d)  $12/5$

**Q63.** If in a certain language, STAR is coded as TSRA, how is MOON coded in that code?

- (a) OMNO
- (b) OOMN
- (c) NMOO
- (d) OMON

**Q64.** "Yakshagana" folk dance is associated to which Indian state?

- (a) Kerala
- (b) Karnataka
- (c) Tamil Nadu
- (d) Andhra Pradesh

**Q65. Invention/Discovery Inventor/Scientist**

- P) Dynamite a. J.J. Thomson
  - Q) Dynamo b. Michael Faraday
  - R) Electron c. Alfred Nobel
  - S) Proton d. Rutherford
- (a) P-b, Q-c, R-a, S-d
  - (b) P-c, Q-b, R-d, S-a
  - (c) P-c, Q-b, R-a, S-d
  - (d) P-d, Q-c, R-b, S-a

**Q66.** Increase in carbon dioxide in atmosphere is caused by which of the following reasons?

1. Excessive use of fossil fuels
  2. Deforestation
  3. Increased number of vehicles
  4. Excessive use of solar heaters
- (a) 1 and 2
  - (b) 1, 2 and 4
  - (c) 1, 2 and 3
  - (d) 1, 2, 3 and 4

**Q67.** Calculate the amount if Rs. 400 is invested on compound interest at the rate of 5% per annum for 2 years.

- (a) 440
- (b) 441
- (c) 445
- (d) 480

**Q68.** Complete the Figure X from the 4 alternatives 1, 2, 3, 4



- (a) 1
- (b) 2
- (c) 3
- (d) 4

**Q69.** Which among the following network topologies has the highest transmission speed?

- (a) LAN
- (b) WAN
- (c) MAN
- (d) Both LAN and WAN have equal transmission speeds.

**Q70.** On dividing  $15y^3 - 30y^2 + 12y - 12$  by  $3y - 6$ , the remainder is:

- (a) 6
- (b) 36
- (c) 30
- (d) 12

**Q71.** Read the statements and select a conclusion from the given alternatives:

**Statements:**

- Some benches are autos.
- All the boxes are autos.
- All the pens are benches.

**Conclusions:**

- (1) Some benches are boxes.
  - (2) No pen is auto.
  - (3) Some boxes are benches.
- (a) None of three
  - (b) Only (1) and (2)
  - (c) Only (1) and (3)
  - (d) Only (2) and (3)

**Q72.** Indian has the largest area under \_\_\_\_\_ crop in the World.

- (a) Oil Seeds
- (b) Sugarcane
- (c) Wheat
- (d) Apple

The advertisement features a dark blue background with a yellow banner at the top right that says "BILINGUAL". In the top left corner, there is a red circle with the word "LIVE". Below this, there are four portraits of men, likely the instructors, with "adda247" written below them. The main text in large, bold, yellow letters reads "MISSION RRB NTPC 2020". Below this, in white text, it says "Complete Preparation Pack". At the bottom, in white text, it lists "Live Class | Test Series | Ebooks".

**Q73.** The longest chord in a circle is:

- (a) Radius
- (b) Diameter
- (c) Segment
- (d) Sector

**Q74.** Read the statements and select a conclusion from the given alternatives:

**Statement:** Good health is a luxury in country 'X' where rate of mortality due to hunger, malnutrition and unhygienic conditions is very high as compared to other nations of that region.

**Conclusions:** I. People in country 'X' can't afford to have many luxuries life.

II. Good health is a gift of nature.

**Choose the right option**

- (a) only conclusion I follows.
- (b) only conclusion II follows.
- (c) either I or II follows.
- (d) neither I nor II follows.

**Q75.** Which mirror is preferred as a rear-view (wing) mirrors in vehicles because of its wider field of view?

- (a) Convex
- (b) Plane
- (c) Concave
- (d) Concavo convex

**Q76.** The main objectives of Indian space programme are:

1. Mass Communication and education via satellite.
2. Survey and management of natural resources through remote sensing technology, environmental monitoring and meteorological forecasting.
3. Development of indigenous satellites and satellite launch vehicles.

- (a) Only 1
- (b) Only 2
- (c) 1 & 3 both
- (d) 1, 2 and 3

**Q77.** Four pair of words are given below out of which three are alike in some manner and one pair is different. Which is different from the rest?

- (a) Hard : Soft
- (b) Long : High
- (c) Sweet : Sour
- (d) Pointed : Blunt

**Q78.** Read the statements and select a conclusion from the given alternatives:

**Statements:**

All the wires are books.

All the plates are books.

Some wallets are plates.

**Conclusions:**

- (1) Some wires are plates.
- (2) Some books are wires.
- (3) Some books are wallets.
- (a) Only (1)
- (b) Only (2) and (3)
- (c) Only (1) and (2)
- (d) Only (1) and (3)

**Q79.** Four pair of words are given below out of which three are alike in some manner and one pair is different. Which is different from the rest?

- (a) Student
- (b) Paddy
- (c) Soldier
- (d) Politician

**Q80.** If Selling Price is Rs. 84 & Gain Percentage = 20%, Calculate the Cost Price.

- (a) Rs. 70
- (b) Rs. 68
- (c) Rs. 71
- (d) Rs. 69

**Direction (81-83):** Based on the table below answer the following questions:

The table given below shows the percentage distribution of the total expenditures of a company Zeta Interactive Services under various expense heads during 2003.

Infrastructure	20
Transport	12.5
Advertisement	15
Taxes	10
R&D	5
Salaries	20
Interest on Loans	17.5

**Q81.** If the interest on loans amounted to Rs. 2.45 crores, then the total amount of expenditure on advertisement, taxes and research and development of Zeta Interactive Services is

- (a) Rs. 7 crores
- (b) Rs. 5.4 crores
- (c) Rs. 4.2 crores
- (d) Rs. 3 crores

**Q82.** What is the ratio of the total expenditure on infrastructure and transport to the total expenditure on taxes and interest on loans of Zeta Interactive Services?

- (a) 5:4
- (b) 8:7
- (c) 9:7
- (d) 13:11

**Bilingual**  

**Special Offer**

  
**RRB NTPC**  
**CBT I**  

**65 TOTAL TESTS**

**Q83.** If the expenditure of Zeta Interactive Services on advertisement is 2.10 crores then the difference between the expenditure on transport and taxes is?

- (a) Rs. 1.25 crores
- (b) Rs. 95 lakhs
- (c) Rs. 65 lakhs
- (d) Rs. 35 lakhs

**Q84.** A shopkeeper purchased a stereo system of marked price Rs. 2000, at successive discounts of 10% & 15% respectively. He then spent Rs. 70 on packaging and sold it at Rs. 2000. Calculate his gain percentage.

- (a) No Gain
- (b) 25%
- (c) 30%
- (d) 35%

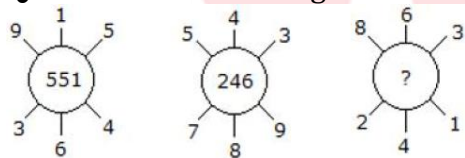
**Q85.** Who among the following is/was not associated with Cricket?

- (a) Farhaan Behardien
- (b) Aaron Phangiso
- (c) Vernon Philander
- (d) Stanislas Wawrinka

**Q86.** Which of the following is the outermost part of human skin?

- (a) Epidermis
- (b) Dermis
- (c) Hypodermis
- (d) Nerve Fiber

**Q87.** Insert the missing character in?



- (a) 262
- (b) 622
- (c) 631
- (d) 824

**Q88.** Indian National Army was formed by:

- (a) Mohan Singh
- (b) Subhas Chandra Bose
- (c) Chandrashekhar Azad
- (d) Bal Gangadhar Tilak

**Q89.** Factors of  $x^2 - 6x + 8$  are:

- (a)  $(x-4)(x-2)$
- (b)  $(x+4)(x+2)$
- (c)  $(x+8)(x-2)$
- (d)  $(x-4)(x+2)$

**Q90.** Find the least number that must be subtracted from 87375, to get a number exactly divisible by 698.

- (a) 120
- (b) 125
- (c) 250
- (d) 375

**Q91.** Which company developed the Android OS, a mobile operating system Software in 2007?

- (a) Microsoft Corp.
- (b) Google Corp.
- (c) Intel
- (d) Apple Corp.

**Q92.** In a certain code language, if HISTORY is coded as 7326845 and CIVICS is coded as 135312, then VISITOR will be coded as?

- (a) 5323684
- (b) 6843532
- (c) 8463352
- (d) 5323648

**Q93.** A man buys 20 pencils for Rs. 6 and sells 16 pencils for Rs. 6. Calculate his gain or loss percentage.

- (a) 20
- (b) 25
- (c) 27
- (d) 30

**Q94.** Three clocks are designed to alarm once every hour, every two hours and every three hours respectively. If they all alarmed together now, after how many hours they will together alarm next?

- (a) 3 hours
- (b) 6 hours
- (c) 4 hours
- (d) 12 hours

**Q95.** If  $a/b = 1/3$ ;  $b/c = 1/2$  and  $a = 2$  then the value of  $c$  is:

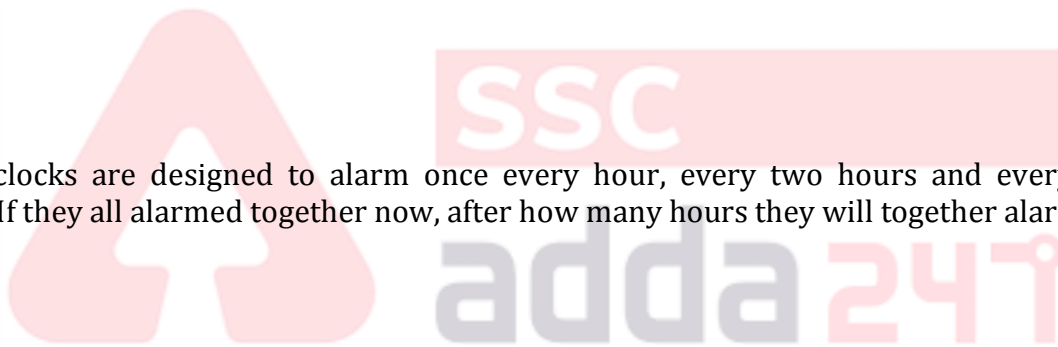
- (a) 8
- (b) 10
- (c) 12
- (d) 16

**Q96.** If in a certain language, SINK is coded as ISKN, how is MINT coded in that code?

- (a) TMNI
- (b) IMTN
- (c) INMT
- (d) TINM

**Q97.** To take the revenge for the Jallianwala Bagh Massacre, who killed General O'Dwyer in London?

- (a) Sadar Bhagat Singh
- (b) Sardar Udham Singh
- (c) Sardar Ajit Singh
- (d) Raj Guru



TEST SERIES  
Bilingual



**RRB NTPC  
PREMIUM**

- ◆ CBT-I and CBT-II
- ◆ 30 Previous Year Papers

**120 TOTAL TESTS**

**Q98.** Read the statements and select a conclusion from the given alternatives:

**Statements:**

Our equity investments carry market risk. Consult your investment advisor or agent before investing.

**Conclusions:**

**I.** One should not invest in equity.

**II.** The investment advisor calculates the market risk with certainty.

- (a) Only conclusion I follows
- (b) Only conclusion II follows
- (c) Either I or II follows
- (d) Neither I nor II follows

**Q99.** In a right-angled triangle, the hypotenuse is 2cm longer than the perpendicular which is 2cm longer than the base. Calculate the length of the base.

- (a) 6 cm
- (b) 9 cm
- (c) 10 cm
- (d) 8 cm

**Q100.** Who among the following is famously known as “The Haryana Hurricane”?

- (a) Mansoor Ali Khan Pataudi
- (b) Kapil Dev
- (c) Saina Nehwal
- (d) Vijender Singh

