

## Multi Tasking Non Technical Staff and Havaladar CBIC and CBN Examination 2023

Roll Number	
Candidate Name	
Venue Name	iON Digital Zone iDZ Sonai Road
Exam Date	04/09/2023
Exam Time	4:00 PM - 6:00 PM
Subject	MTS Non Tech Havaladar CBIC and CBN Examination 2023

Section : Numerical and Mathematical Ability

Q.1 Simplify the given expression.

$$71 - (-3)\{-2 - (\overline{8 - 3})\} + 3\{5 + (-2)(-1)\}$$

- Ans
- 1. 30
  - 2. 119
  - 3. 50
  - 4. 71

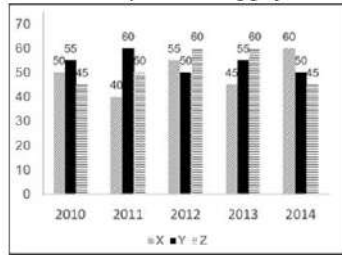
Question ID : 264330157321  
Option 1 ID : 264330616650  
Option 2 ID : 264330616648  
Option 3 ID : 264330616647  
Option 4 ID : 264330616649  
Status : Answered  
Chosen Option : 4

Q.2 Find the mean proportional between 0.08 and 0.32.

- Ans
- 1. 16
  - 2. 0.016
  - 3. 0.16
  - 4. 1.6

Question ID : 264330153845  
Option 1 ID : 264330602844  
Option 2 ID : 264330602846  
Option 3 ID : 264330602843  
Option 4 ID : 264330602845  
Status : Answered  
Chosen Option : 3

**Q.3** The graph shows the production of tyres (in Lakhs) by three different companies X, Y, and Z over the years.  
Directions: Study the following graph carefully to answer the question given below it.



The total production of company Z in 2012 and 2013 is what percentage of the total production of company X in 2010 and 2011?

- Ans**
- 1. 126.3%
  - 2. 133.3%
  - 3. 75%
  - 4. 111.1%

Question ID : 264330153890  
Option 1 ID : 264330603025  
Option 2 ID : 264330603023  
Option 3 ID : 264330603024  
Option 4 ID : 264330603026  
Status : Answered  
Chosen Option : 2

**Q.4** What is the largest number that divides 627, 15630 and 3128 and leaves remainders of 2, 5 and 3, respectively?

- Ans**
- 1. 775
  - 2. 650
  - 3. 625
  - 4. 1225

Question ID : 264330156089  
Option 1 ID : 264330611757  
Option 2 ID : 264330611758  
Option 3 ID : 264330611755  
Option 4 ID : 264330611756  
Status : Answered  
Chosen Option : 3

**Q.5** If P can finish a job in 3 hours and Q can finish the same job in 6 hours independently, then they together will finish the job in  $x$  minutes. Find the value of  $x$ .

- Ans**
- 1. 160
  - 2. 100
  - 3. 150
  - 4. 120

Question ID : 264330155972  
Option 1 ID : 264330611289  
Option 2 ID : 264330611290  
Option 3 ID : 264330611287  
Option 4 ID : 264330611288  
Status : Answered  
Chosen Option : 4

**Q.6** The ratio of principal and amount is 5 : 6 for one year. Find the rate of simple interest per annum?

- Ans
- 1. 10%
  - 2. 11%
  - 3. 15%
  - 4. 20%

Question ID : 264330158842  
Option 1 ID : 264330622727  
Option 2 ID : 264330622729  
Option 3 ID : 264330622728  
Option 4 ID : 264330622730  
Status : Answered  
Chosen Option : 4

**Q.7** A boatman goes 6 km against the current of the stream in 2 hours and goes 1.5 km along the current in 7.5 minutes. How long will (in hours) it take to go 30 km in still water?

- Ans
- 1. 2.5
  - 2. 3.5
  - 3. 3.0
  - 4. 4.0

Question ID : 264330153776  
Option 1 ID : 264330602569  
Option 2 ID : 264330602570  
Option 3 ID : 264330602568  
Option 4 ID : 264330602567  
Status : Answered  
Chosen Option : 4

**Q.8** The average height of 25 boys was calculated to be 150 cm. It was detected later that one value of 160 cm was wrongly copied as 135 cm for the computation of the mean. Find the correct mean height (in cm).

- Ans
- 1. 152
  - 2. 158
  - 3. 154
  - 4. 151

Question ID : 264330156097  
Option 1 ID : 264330611790  
Option 2 ID : 264330611789  
Option 3 ID : 264330611787  
Option 4 ID : 264330611788  
Status : Answered  
Chosen Option : 4

**Q.9** The marked price of mustard oil is 10% more than its cost price. At what percentage less than the marked price should it be sold to have no profit and no loss?

- Ans**
- 1.  $9\frac{3}{11}\%$
  - 2.  $9\frac{2}{11}\%$
  - 3.  $9\frac{1}{11}\%$
  - 4.  $9\frac{4}{11}\%$

Question ID : 264330156219

Option 1 ID : 264330612277

Option 2 ID : 264330612276

Option 3 ID : 264330612275

Option 4 ID : 264330612278

Status : Answered

Chosen Option : 3

**Q.10** A woman jogged every month in 2022 as per the given table. Study the table and answer the question that follows.

Month	Jan	Feb	March	April	May	June	July	Aug	Sept	Oct	Nov	Dec
Distance jogged (in km)	90	60	30	30	30	60	60	90	30	60	90	30

What is the mean distance jogged by the woman in the year 2022?

- Ans**
- 1. 52.5 km
  - 2. 55 km
  - 3. 50 km
  - 4. 60 km

Question ID : 264330156290

Option 1 ID : 264330612562

Option 2 ID : 264330612559

Option 3 ID : 264330612561

Option 4 ID : 264330612560

Status : Answered

Chosen Option : 2

**Q.11** The area of a trapezium is  $180\text{ cm}^2$  and two parallel sides are 28 cm and 12 cm. The distance between these parallel sides is:

- Ans**
- 1. 9 cm
  - 2. 12 cm
  - 3. 18 cm
  - 4. 15 cm

Question ID : 264330154138

Option 1 ID : 264330604016

Option 2 ID : 264330604015

Option 3 ID : 264330604017

Option 4 ID : 264330604018

Status : Answered

Chosen Option : 1

**Q.12** Water is pouring into a cuboidal reservoir at the rate of 50 litres per minute. The volume of the reservoir is  $120 \text{ m}^3$ . How many hours will it take to fill the reservoir?

- Ans
- 1. 35
  - 2. 45
  - 3. 40
  - 4. 30

Question ID : 264330153864  
Option 1 ID : 264330602922  
Option 2 ID : 264330602919  
Option 3 ID : 264330602920  
Option 4 ID : 264330602921  
Status : Answered  
Chosen Option : 3

**Q.13** The difference between the compound interest (Compounded annually) and simple interest for an amount of ₹85,000 in 2 years is ₹850. Find the rate of interest per annum.

- Ans
- 1. 5%
  - 2. 10%
  - 3. 8%
  - 4. 12%

Question ID : 264330156229  
Option 1 ID : 264330612315  
Option 2 ID : 264330612317  
Option 3 ID : 264330612316  
Option 4 ID : 264330612318  
Status : Answered  
Chosen Option : 2

**Q.14** ₹3,600 is divided such that half of the first part, one-third of the second part and one-fifth of the third part are the same. The value of the third part is:

- Ans
- 1. 1080
  - 2. 1000
  - 3. 2400
  - 4. 1800

Question ID : 264330154050  
Option 1 ID : 264330603665  
Option 2 ID : 264330603666  
Option 3 ID : 264330603663  
Option 4 ID : 264330603664  
Status : Answered  
Chosen Option : 4

**Q.15** A store sells an item for ₹500, making a profit of 25%. Later, the store reduces the price of the item by 20% to clear out old inventory. What is the new percentage profit or loss for the store?

- Ans**
- 1. 2% profit
  - 2. 5% profit
  - 3. 5% loss
  - 4. No profit, no loss

Question ID : **264330156264**  
Option 1 ID : **264330612457**  
Option 2 ID : **264330612455**  
Option 3 ID : **264330612456**  
Option 4 ID : **264330612458**  
Status : **Answered**  
Chosen Option : **4**

**Q.16** Two trains 120 metres and 150 metres long, respectively, are running in the same direction with speeds of 70 km/h and 52 km/h, respectively. In how much time will the first train cross the second? (in seconds)

- Ans**
- 1. 52
  - 2. 60
  - 3. 48
  - 4. 54

Question ID : **264330156008**  
Option 1 ID : **264330611431**  
Option 2 ID : **264330611434**  
Option 3 ID : **264330611432**  
Option 4 ID : **264330611433**  
Status : **Answered**  
Chosen Option : **4**

**Q.17** A cyclist travels 15 km at a speed of 10 km/h and then travels another 15 km at a speed of 20 km/h. What is the average speed of the cyclist for the entire journey? ( round to two places of decimals)

- Ans**
- 1. 12.32km/h
  - 2. 13.74 km/h
  - 3. 12.72 km/h
  - 4. 13.33 km/h

Question ID : **264330156257**  
Option 1 ID : **264330612427**  
Option 2 ID : **264330612430**  
Option 3 ID : **264330612428**  
Option 4 ID : **264330612429**  
Status : **Answered**  
Chosen Option : **4**

**Q.18** Susanth purchased 3 packs of oil at the rate of ₹20 each, 4 packs of oil at ₹21 each and 3 packs of oil at the rate of ₹22 each. What is the average cost of one pack of oil?

- Ans**
- 1. ₹21.5
  - 2. ₹20
  - 3. ₹20.5
  - 4. ₹21

Question ID : 264330153870  
Option 1 ID : 264330602946  
Option 2 ID : 264330602943  
Option 3 ID : 264330602944  
Option 4 ID : 264330602945  
Status : Answered  
Chosen Option : 4

**Q.19** A man can finish a work in 12 days and a woman can finish the same in 10 days. 2 men and 3 women work on alternate days and men start the first day. The work will be finished in \_\_\_\_\_ days.

- Ans**
- 1.  $\frac{22}{3}$
  - 2.  $\frac{24}{5}$
  - 3.  $\frac{22}{5}$
  - 4.  $\frac{21}{5}$

Question ID : 264330153815  
Option 1 ID : 264330602725  
Option 2 ID : 264330602723  
Option 3 ID : 264330602726  
Option 4 ID : 264330602724  
Status : Answered  
Chosen Option : 3

**Q.20** During the first year, the population of a town increased by 10% and during the next year, the population decreased by 10%. If the total population of the town was 19,800 at the end of the second year, find the population size at the beginning of the first year.

- Ans**
- 1. 20,800
  - 2. 21,000
  - 3. 20,000
  - 4. 21,800

Question ID : 264330155994  
Option 1 ID : 264330611377  
Option 2 ID : 264330611376  
Option 3 ID : 264330611378  
Option 4 ID : 264330611375  
Status : Answered  
Chosen Option : 3

**Q.1** In a certain code language, 'GLOAT' is coded as 'EJMYR' and 'INCUR' is coded as 'GLASP'. What is the code for 'PANDA' in the given code language?

- Ans**
- 1. MZMCZ
  - 2. MYMCX
  - 3. NXNBY
  - 4. NYLBY

Question ID : 264330155816

Option 1 ID : 264330610667

Option 2 ID : 264330610669

Option 3 ID : 264330610670

Option 4 ID : 264330610668

Status : Answered

Chosen Option : 4

**Q.2** Q, R, S, T, U, V, W and X are sitting around a square table facing the center of the table. Some of them are sitting at the corners while some are sitting at the exact center of the sides. X sits second to the left of W. W sits in one of the corners. V is the immediate neighbour of T and U. R sits third to the left of T. U does not sit in one of the corners. U is neither the neighbour of X nor W. Q is not the neighbour of X.

How many people sit between S and V, when counted from the left of S?

- Ans**
- 1. One
  - 2. Three
  - 3. Four
  - 4. Two

Question ID : 264330155535

Option 1 ID : 264330609546

Option 2 ID : 264330609544

Option 3 ID : 264330609543

Option 4 ID : 264330609545

Status : Answered

Chosen Option : 4

**Q.3** What will come in place of '?' in the following equation, if '+' and '×' are interchanged and '-' and '÷' are interchanged?

$$1 \times 1 - 1 + 1 + 1 = ?$$

- Ans**
- 1. 11
  - 2. 1
  - 3. 10
  - 4. 21

Question ID : 264330154656

Option 1 ID : 264330606089

Option 2 ID : 264330606088

Option 3 ID : 264330606087

Option 4 ID : 264330606090

Status : Answered

Chosen Option : 2



**Q.4** Find out the correct alternative that when filled in the blanks in the same sequence will make the series logically complete.

EFS\_ JK\_M OPRS\_ US\_ YZ\_B

- Ans**
- 1. HSTWS
  - 2. HTBSW
  - 3. JSTBW
  - 4. JTBWS

Question ID : 264330154727  
Option 1 ID : 264330606372  
Option 2 ID : 264330606371  
Option 3 ID : 264330606373  
Option 4 ID : 264330606374  
Status : Answered  
Chosen Option : 1

**Q.5** If 7th May 2000 is Sunday, then what will be the day of the week on 15th July 2010?

- Ans**
- 1. Sunday
  - 2. Monday
  - 3. Friday
  - 4. Thursday

Question ID : 264330154331  
Option 1 ID : 264330604788  
Option 2 ID : 264330604787  
Option 3 ID : 264330604789  
Option 4 ID : 264330604790  
Status : Answered  
Chosen Option : 4

**Q.6** Read the given statements and conclusions carefully. You have to take the given statements to be true even if they seem to be at variance from commonly known facts. You have to decide which conclusion/s logically follow/s from the given statements.

Statements: Some doughnuts are rocks. All rocks are papers. Some papers are oil.

Conclusion I: Some doughnuts are papers.

Conclusion II: Some rocks are oil.

- Ans**
- 1. Neither conclusion (I) nor (II) is follow.
  - 2. Both conclusions (I) and (II) are follow.
  - 3. Only conclusion (II) is follow.
  - 4. Only conclusion (I) is follow.

Question ID : 264330155926  
Option 1 ID : 264330611109  
Option 2 ID : 264330611110  
Option 3 ID : 264330611108  
Option 4 ID : 264330611107  
Status : Answered  
Chosen Option : 4

Q.7 What will come in the place of '?' in the following equation, if '+' and '-' are interchanged and 'x' and '+' are interchanged?

$$147 \times 7 + 8 + 32 - 6 = ?$$

- Ans
- 1. 132
  - 2. 152
  - 3. 122
  - 4. 142

Question ID : 264330155676

Option 1 ID : 264330610109

Option 2 ID : 264330610107

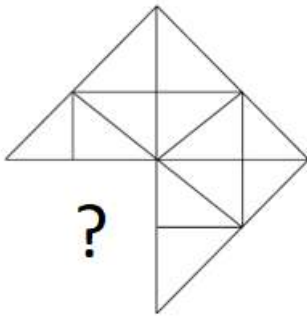
Option 3 ID : 264330610108

Option 4 ID : 264330610110

Status : Answered

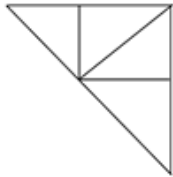
Chosen Option : 4

Q.8 Identify the figure that completes the pattern (rotation is NOT allowed).



Ans

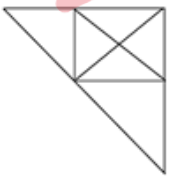
1.



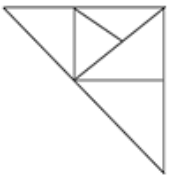
2.



3.



4.



Question ID : 264330154520

Option 1 ID : 264330605545

Option 2 ID : 264330605543

Option 3 ID : 264330605544

Option 4 ID : 264330605546

Status : Answered

Chosen Option : 1

**Q.9** Select the set in which the numbers are related in the same way as are the numbers of the following sets.  
(NOTE: Operations should be performed on the whole numbers, without breaking down the numbers into its constituent digits. E.g. 13 – Operations on 13 such as adding / subtracting / multiplying etc. to 13 can be performed. Breaking down 13 into 1 and 3 and then performing mathematical operations on 1 and 3 is not allowed)  
(4, 55, 7)  
(2, 35, 5)

- Ans**
- 1. 41, 156, 7
  - 2. 12, 346, 9
  - 3. 32, 175, 3
  - 4. 19, 122, 8

Question ID : 264330151617  
Option 1 ID : 264330594098  
Option 2 ID : 264330594095  
Option 3 ID : 264330594097  
Option 4 ID : 264330594096  
Status : Answered  
Chosen Option : 3

**Q.10** What should come in place of '?' in the given series?

10 52 262 1312 6562 ?

- Ans**
- 1. 32954
  - 2. 31726
  - 3. 32812
  - 4. 31458

Question ID : 264330151472  
Option 1 ID : 264330593518  
Option 2 ID : 264330593516  
Option 3 ID : 264330593517  
Option 4 ID : 264330593515  
Status : Answered  
Chosen Option : 3

**Q.11** What should come in place of '?' in the given series?

37 325 2917 ? 236197 2125765 19131877

- Ans**
- 1. 27894
  - 2. 28953
  - 3. 28741
  - 4. 26245

Question ID : 264330151447  
Option 1 ID : 264330593416  
Option 2 ID : 264330593418  
Option 3 ID : 264330593417  
Option 4 ID : 264330593415  
Status : Answered  
Chosen Option : 4

**Q.12** DK 18 is related to EM 22 in a certain way. In the same way, ME 25 is related to NG 29. To which of the following is UL 14 related to following the same logic?

- Ans**
- 1. VM 19
  - 2. WN 18
  - 3. XO 17
  - 4. VN 18

Question ID : 264330151667  
Option 1 ID : 264330594297  
Option 2 ID : 264330594298  
Option 3 ID : 264330594296  
Option 4 ID : 264330594295  
Status : Answered  
Chosen Option : 4

**Q.13** In a certain code language, 'MINT' is coded as '4735' and 'TIME' is coded as '5483'. What is the code for 'E' in the given code language?

- Ans**
- 1. 8
  - 2. 5
  - 3. 4
  - 4. 3

Question ID : 264330151703  
Option 1 ID : 264330594439  
Option 2 ID : 264330594440  
Option 3 ID : 264330594442  
Option 4 ID : 264330594441  
Status : Answered  
Chosen Option : 1

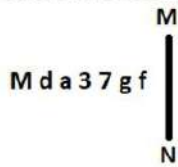
**Q.14** Find out the correct alternative that when filled in the blanks in the same sequence will make the series logically complete.

A \_BY CZ\_Y \_ZFY GZH\_IZ\_Y

- Ans**
- 1. HCJNR
  - 2. ZJDBV
  - 3. BHDKU
  - 4. ZDEYJ

Question ID : 264330154721  
Option 1 ID : 264330606350  
Option 2 ID : 264330606347  
Option 3 ID : 264330606348  
Option 4 ID : 264330606349  
Status : Answered  
Chosen Option : 4

Q.15 Select the correct mirror image of the given figure when the mirror is placed at MN as shown below.



- Ans
- 1. f g L E a b M
  - 2. g f 7 3 6 P M
  - 3. f g 7 E 6 b W
  - 4. f g 7 E 6 b M

Question ID : 264330151530

Option 1 ID : 264330593748

Option 2 ID : 264330593750

Option 3 ID : 264330593747

Option 4 ID : 264330593749

Status : Answered

Chosen Option : 4

Q.16 What should come in place of '?' in the given series?

2 24 ? 948 5700 34212 205284

- Ans
- 1. 156
  - 2. 184
  - 3. 119
  - 4. 136

Question ID : 264330151482

Option 1 ID : 264330593557

Option 2 ID : 264330593558

Option 3 ID : 264330593555

Option 4 ID : 264330593556

Status : Answered

Chosen Option : 1

**Q.17** Which figure should replace the question mark (?) if the following figure series were to be continued?

v	=	3	△	v	3	o	△	
o		=		c		3		?
△	3	o	v	△	o	c	v	

**Ans**

✗ 1.

	v	c
	o	
△	3	

✗ 2.

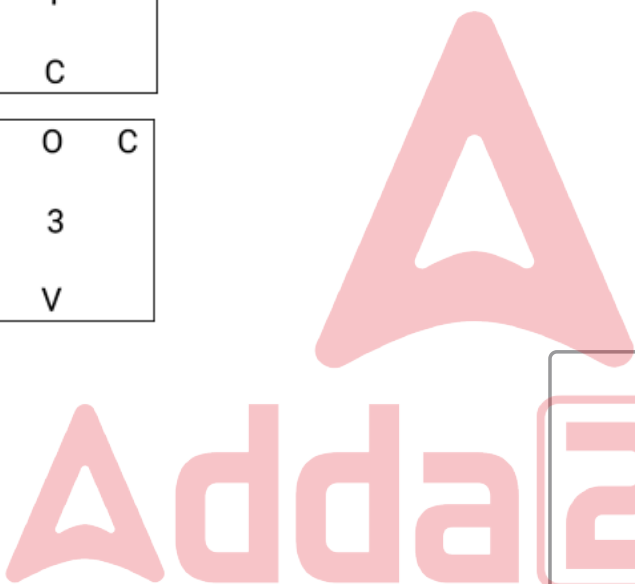
	c	o
	i	
v	△	

✓ 3.

	v	o
	i	
△	c	

✗ 4.

	o	c
	3	
△	v	



Question ID : 264330154743  
 Option 1 ID : 264330606436  
 Option 2 ID : 264330606435  
 Option 3 ID : 264330606437  
 Option 4 ID : 264330606438  
 Status : Answered  
 Chosen Option : 3

**Q.18** 13 is related to 174 following a certain logic. Following the same logic, 15 is related to 230. To which of the following is 17 related to, following the same logic?

- Ans**
- ✗ 1. 291
  - ✗ 2. 292
  - ✗ 3. 293
  - ✓ 4. 294

Question ID : 264330151596  
 Option 1 ID : 264330594011  
 Option 2 ID : 264330594012  
 Option 3 ID : 264330594013  
 Option 4 ID : 264330594014  
 Status : Answered  
 Chosen Option : 4

Q.19 What should come in place of ? in the given series based on the English alphabetical order?

DQK, CPJ, BOI, ANH, ?

- Ans
- 1. XMF
  - 2. YLF
  - 3. YNF
  - 4. ZMG

Question ID : 264330155768  
Option 1 ID : 264330610475  
Option 2 ID : 264330610476  
Option 3 ID : 264330610478  
Option 4 ID : 264330610477  
Status : Answered  
Chosen Option : 4

Q.20 Read the given statements and conclusions carefully. You have to take the given statements to be true even if they seem to be at variance from commonly known facts. You have to decide which conclusion/s logically follow/s from the given statements.

Statements: Some glass are pink. All pink are bags. Some bags are flowers.

Conclusion I: Some pink are glass.

Conclusion II: Some flowers are bags.

- Ans
- 1. Only conclusion (II) is follow.
  - 2. Neither conclusion (I) nor (II) is follow.
  - 3. Only conclusion (I) is follow.
  - 4. Both conclusions (I) and (II) are follow.

Question ID : 264330155896  
Option 1 ID : 264330610988  
Option 2 ID : 264330610989  
Option 3 ID : 264330610987  
Option 4 ID : 264330610990  
Status : Answered  
Chosen Option : 4

Section : General Awareness

Q.1 What is the most powerful weapon that enables the Parliament to ensure executive accountability?

- Ans
- 1. Approval or refusal of laws
  - 2. The no-confidence motion
  - 3. Confirmation of treaties
  - 4. Deliberation and discussion

Question ID : 264330161293  
Option 1 ID : 264330632500  
Option 2 ID : 264330632502  
Option 3 ID : 264330632501  
Option 4 ID : 264330632499  
Status : Not Attempted and Marked For Review  
Chosen Option : --

Q.2 Where is the Mahabodhi temple situated?

- Ans  1. Varanasi  
 2. Bodh Gaya  
 3. Patna  
 4. Agra

Question ID : 264330160762  
Option 1 ID : 264330630379  
Option 2 ID : 264330630382  
Option 3 ID : 264330630381  
Option 4 ID : 264330630380  
Status : Answered  
Chosen Option : 2

Q.3 Which African leader wrote the autobiography ' Long Walk to Freedom'?

- Ans  1. Robert Mugabe  
 2. Nelson Mandela  
 3. Muammar Gaddafi  
 4. Desmond Tutu

Question ID : 264330160959  
Option 1 ID : 264330631169  
Option 2 ID : 264330631167  
Option 3 ID : 264330631170  
Option 4 ID : 264330631168  
Status : Answered  
Chosen Option : 2

Q.4 In which year was the Training of Rural Youth for Self Employment (TRYSEM) scheme launched by Government of India?

- Ans  1. 1991  
 2. 2000  
 3. 1979  
 4. 1965

Question ID : 264330161575  
Option 1 ID : 264330633628  
Option 2 ID : 264330633630  
Option 3 ID : 264330633627  
Option 4 ID : 264330633629  
Status : Not Attempted and Marked For Review  
Chosen Option : --

Q.5 Under the Chief Minister Learn and Earn Scheme of Madhya Pradesh, the government will NOT provide which of the following?

- Ans  1. Financial assistance  
 2. Training  
 3. Laptops  
 4. Employable skills

Question ID : 264330158331  
Option 1 ID : 264330620684  
Option 2 ID : 264330620686  
Option 3 ID : 264330620685  
Option 4 ID : 264330620683  
Status : Answered  
Chosen Option : 1



**Q.6** Noted dance historian Dr. Sunil Kothari was awarded Madhabdev Award in 2019 by the Government of Assam for popularising which dance form of the state?

- Ans**
- 1. Bihu
  - 2. Bagurumba
  - 3. Sattriya
  - 4. Ojapali

Question ID : 264330155488

Option 1 ID : 264330609355

Option 2 ID : 264330609358

Option 3 ID : 264330609356

Option 4 ID : 264330609357

Status : **Not Attempted and Marked For Review**

Chosen Option : --

**Q.7** What is the usual term used to describe the climate of India?

- Ans**
- 1. Polar climate
  - 2. Tropical monsoon
  - 3. Desert climate
  - 4. Arid climate

Question ID : 264330157825

Option 1 ID : 264330618660

Option 2 ID : 264330618662

Option 3 ID : 264330618659

Option 4 ID : 264330618661

Status : **Answered**

Chosen Option : 2

**Q.8** Dandari (Dancing) troupes perform \_\_\_\_\_ during the festival of Diwali for a fortnight with participation from Kolam and Raj Gond tribes.

- Ans**
- 1. Chhau
  - 2. Baiga Pardhoni
  - 3. Ghusadi
  - 4. Rout Nacha

Question ID : 264330160853

Option 1 ID : 264330630745

Option 2 ID : 264330630746

Option 3 ID : 264330630744

Option 4 ID : 264330630743

Status : **Answered**

Chosen Option : 4

Q.9 How many gold medals did India win at the ISSF Junior World Cup 2023?

- Ans
- 1. 7
  - 2. 8
  - 3. 5
  - 4. 6

Question ID : 264330161130

Option 1 ID : 264330631852

Option 2 ID : 264330631854

Option 3 ID : 264330631853

Option 4 ID : 264330631851

Status : **Not Attempted and Marked For Review**

Chosen Option : --

Q.10 \_\_\_\_\_ is the first Indian woman to have won a Grammy.

- Ans
- 1. Tanvi Shah
  - 2. Shalmali Kholgade
  - 3. Palak Muchhal
  - 4. Shilpa Rao

Question ID : 264330155472

Option 1 ID : 264330609293

Option 2 ID : 264330609291

Option 3 ID : 264330609292

Option 4 ID : 264330609294

Status : **Answered**

Chosen Option : 1

Q.11 Which Indian musician personality's native place is West Bengal?

- Ans
- 1. Naushad
  - 2. OP Nayyar
  - 3. Ilayaraja
  - 4. Bappi Lahiri

Question ID : 264330162236

Option 1 ID : 264330636273

Option 2 ID : 264330636274

Option 3 ID : 264330636272

Option 4 ID : 264330636271

Status : **Answered**

Chosen Option : 4

Q.12 According to the Census of India 2011, which State/Union Territory has the lowest sex ratio?

- Ans
- 1. Punjab
  - 2. Lakshadweep
  - 3. Daman and Diu
  - 4. Haryana

Question ID : 264330160154  
Option 1 ID : 264330627955  
Option 2 ID : 264330627956  
Option 3 ID : 264330627957  
Option 4 ID : 264330627958  
Status : Answered  
Chosen Option : 4

Q.13 Which of the following is an autobiography of the famous cricketer Sourav Ganguly?

- Ans
- 1. A Shot at History
  - 2. The Dream of Revolution
  - 3. A Century is not enough
  - 4. Memories of My Life and Times

Question ID : 264330162283  
Option 1 ID : 264330636459  
Option 2 ID : 264330636460  
Option 3 ID : 264330636461  
Option 4 ID : 264330636462  
Status : Answered  
Chosen Option : 3

Q.14 Consider the following statement about the Government of India Act, 1935.

1. This act was enacted by the British Parliament.
2. This Act was divided into two separate acts for India and Burma Government.
3. This act was commenced from the 1 April 1935.

Select the correct statement(s) using the code given below.

- Ans
- 1. Both 1 and 2
  - 2. 1, 2 and 3
  - 3. Both 2 and 3
  - 4. Both 1 and 3

Question ID : 264330160879  
Option 1 ID : 264330630847  
Option 2 ID : 264330630850  
Option 3 ID : 264330630849  
Option 4 ID : 264330630848  
Status : Not Attempted and Marked For Review  
Chosen Option : --

Q.15 Who among the following established a unit of horsepower that is equal to one horse doing 33,000 foot - pounds of work in one minute?

- Ans
- 1. James Black
  - 2. James Croll
  - 3. James Watt
  - 4. James Dwight Dana

Question ID : 264330161401  
Option 1 ID : 264330632932  
Option 2 ID : 264330632933  
Option 3 ID : 264330632931  
Option 4 ID : 264330632934  
Status : Answered  
Chosen Option : 3

Q.16 In which year was the 42nd Constitutional Amendment Act passed?

- Ans
- 1. 1978
  - 2. 1976
  - 3. 1998
  - 4. 1986

Question ID : 264330159898  
Option 1 ID : 264330626940  
Option 2 ID : 264330626939  
Option 3 ID : 264330626942  
Option 4 ID : 264330626941  
Status : Answered  
Chosen Option : 2

Q.17 Who among the following leaders led the Revolt of 1857 in Bihar?

- Ans
- 1. Rajendra Prasad
  - 2. Devi Singh
  - 3. Rajkumar Shukla
  - 4. Kunwar Singh

Question ID : 264330162325  
Option 1 ID : 264330636629  
Option 2 ID : 264330636627  
Option 3 ID : 264330636630  
Option 4 ID : 264330636628  
Status : Answered  
Chosen Option : 4

Q.18 Shri Jagannathji Mela is held at \_\_\_\_\_.

- Ans
- 1. Cuttack
  - 2. Sambalpur
  - 3. Jaipur
  - 4. Alwar

Question ID : 264330159087  
Option 1 ID : 264330623708  
Option 2 ID : 264330623710  
Option 3 ID : 264330623709  
Option 4 ID : 264330623707  
Status : Answered  
Chosen Option : 1

Q.19 \_\_\_\_\_ literally means 'dance of the enchantress'. It is one of the most striking in the Indian classical dance repertoire.

- Ans
- 1. Kuchipudi
  - 2. Mohiniyattam
  - 3. Kathakali
  - 4. Bharatanatyam

Question ID : 264330160789  
Option 1 ID : 264330630490  
Option 2 ID : 264330630488  
Option 3 ID : 264330630487  
Option 4 ID : 264330630489  
Status : Answered  
Chosen Option : 3

Q.20 The important milestones of the SHG Bank linkage movement was spearheaded by \_\_\_\_\_ with support from RBI.

- Ans
- 1. SEBI
  - 2. Indian Bank
  - 3. NABARD
  - 4. Cooperative Bank

Question ID : 264330161454  
Option 1 ID : 264330633144  
Option 2 ID : 264330633143  
Option 3 ID : 264330633145  
Option 4 ID : 264330633146  
Status : Not Attempted and Marked For Review  
Chosen Option : --

Q.21 Narendra Modi Cricket Stadium is one of the premier stadiums in India located at \_\_\_\_\_.

- Ans
- 1. Ahmedabad
  - 2. New Delhi
  - 3. Baroda
  - 4. Surat

Question ID : 264330158241  
Option 1 ID : 264330620323  
Option 2 ID : 264330620324  
Option 3 ID : 264330620325  
Option 4 ID : 264330620326  
Status : Answered  
Chosen Option : 1

Q.22 The pre-monsoon showers are known as \_\_\_\_\_ in Kerala and Karnataka.

- Ans
- 1. tea showers
  - 2. grapes showers
  - 3. banana showers
  - 4. mango showers

Question ID : 264330161515

Option 1 ID : 264330633387

Option 2 ID : 264330633390

Option 3 ID : 264330633389

Option 4 ID : 264330633388

Status : **Not Attempted and Marked For Review**

Chosen Option : --

Q.23 Insufficient levels of parathyroid hormone and low amount of calcium in the blood causes which of the following conditions?

- Ans
- 1. Malaria
  - 2. Anaemia
  - 3. Diabetes
  - 4. Hypocalcemia

Question ID : 264330156612

Option 1 ID : 264330613838

Option 2 ID : 264330613836

Option 3 ID : 264330613837

Option 4 ID : 264330613835

Status : **Not Attempted and Marked For Review**

Chosen Option : --

Q.24 Team Rest of India won Irani Cup in 2023. Irani Cup was hosted in which state?

- Ans
- 1. Madhya Pradesh
  - 2. West Bengal
  - 3. Bihar
  - 4. Uttar Pradesh

Question ID : 264330158353

Option 1 ID : 264330620772

Option 2 ID : 264330620774

Option 3 ID : 264330620771

Option 4 ID : 264330620773

Status : **Answered**

Chosen Option : 1

**Q.25 What is a dimension related to the sustainability of microfinance institutions in India?**

- Ans**  1. Dependency on donor funding  
 2. Limited social impact  
 3. High-profit margins  
 4. Excessive interest rates

Question ID : 264330157294  
Option 1 ID : 264330616540  
Option 2 ID : 264330616542  
Option 3 ID : 264330616539  
Option 4 ID : 264330616541  
Status : Answered  
Chosen Option : 1

Section : English Language and Comprehension

**Q.1 The sentence given below contains some spelling errors. Select the option that has the correct spellings.**

**Members of the asocciation have succesfully climbed several paeks of the Himalayan range.**

- Ans**  1. Members of the associattion have succesfully climbed several paeks of the Himalayan range.  
 2. Meembers of the associatiion have successfully climbed several peaks of the Himalayan range.  
 3. Members of the associasion have succesfully climbed several paiks of the Himalayan range.  
 4. Members of the association have successfully climbed several peaks of the Himalayan range.

Question ID : 264330153541  
Option 1 ID : 264330601667  
Option 2 ID : 264330601669  
Option 3 ID : 264330601670  
Option 4 ID : 264330601668  
Status : Answered  
Chosen Option : 4

**Q.2 Choose the sentence that contains an error.**

- Ans**  1. The Mona Lisa is a famous painting by Leonardo da Vinci.  
 2. She is the only person who can speak five languages fluently.  
 3. He is a doctor who specialises in the treating rare diseases.  
 4. I saw the movie that won the Academy Award for Best Picture.

Question ID : 264330155180  
Option 1 ID : 264330608179  
Option 2 ID : 264330608181  
Option 3 ID : 264330608182  
Option 4 ID : 264330608180  
Status : Answered  
Chosen Option : 3

**Q.3** The following sentence has been split into four segments. Identify the segment that contains a spelling error.

The conference / attempts to / trace the processes and / consequences of climate change.

Ans  1. consequences of climate change

2. The conference

3. attempts to

4. trace the processes and

Question ID : 264330155314

Option 1 ID : 264330608698

Option 2 ID : 264330608695

Option 3 ID : 264330608696

Option 4 ID : 264330608697

Status : Answered

Chosen Option : 2

**Q.4** Select the word segment which substitutes the bracketed word correctly and completes the sentence meaningfully.

Mathematics (are not) easy to learn.

Ans  1. were not

2. was not

3. has not

4. is not

Question ID : 264330152567

Option 1 ID : 264330597873

Option 2 ID : 264330597872

Option 3 ID : 264330597874

Option 4 ID : 264330597871

Status : Answered

Chosen Option : 4

**Q.5** Select the option that can be used as a one-word substitute for the given group of words.

The action of formally accusing a public official of a serious offence

Ans  1. Impeachment

2. Condemnation

3. Summon

4. Allegation

Question ID : 264330151870

Option 1 ID : 264330595099

Option 2 ID : 264330595101

Option 3 ID : 264330595100

Option 4 ID : 264330595102

Status : Answered

Chosen Option : 1



**Q.6** Select the option that can be used as a one-word substitute for the given group of words.

A number which is used to divide another number

- Ans
- 1. Divisible
  - 2. Quotient
  - 3. Remainder
  - 4. Divisor

Question ID : 264330153456

Option 1 ID : 264330601341

Option 2 ID : 264330601340

Option 3 ID : 264330601342

Option 4 ID : 264330601339

Status : Answered

Chosen Option : 4

**Q.7** Select the most appropriate meaning of the given idiom.

To cut someone some slack

- Ans
- 1. Avoid talking about problems till the very end
  - 2. To get the conversation going
  - 3. To criticise someone very strictly
  - 4. To not manage someone very strictly or critically

Question ID : 264330153009

Option 1 ID : 264330599608

Option 2 ID : 264330599609

Option 3 ID : 264330599607

Option 4 ID : 264330599610

Status : Answered

Chosen Option : 3

**Q.8** Select the most appropriate idiom to fill in the blank.

Our trainer asked for \_\_\_\_\_ on her for the next informative session.

- Ans
- 1. chasing rainbows
  - 2. being around the bend
  - 3. all eyes and ears
  - 4. going bananas

Question ID : 264330153561

Option 1 ID : 264330601745

Option 2 ID : 264330601744

Option 3 ID : 264330601743

Option 4 ID : 264330601746

Status : Answered

Chosen Option : 3

**Q.9** Select the **INCORRECTLY** spelt word in the given sentence.  
Children below the age of 14 were not allowed to partisipate in the cooking competition.

- Ans
- 1. Competition
  - 2. Partisipate
  - 3. Children
  - 4. Allowed

Question ID : 264330153301  
Option 1 ID : 264330600762  
Option 2 ID : 264330600761  
Option 3 ID : 264330600759  
Option 4 ID : 264330600760  
Status : Answered  
Chosen Option : 2

**Q.10** The following sentence has been split into four segments. Identify the segment that contains a grammatical error.  
After I complete my training program / I will have been joining a team of astronauts / and preparing to / embark on a mission to Mars.

- Ans
- 1. I will have been joining a team of astronauts
  - 2. embark on a mission to Mars
  - 3. and preparing to
  - 4. After I complete my training program

Question ID : 264330144176  
Option 1 ID : 264330564968  
Option 2 ID : 264330564970  
Option 3 ID : 264330564969  
Option 4 ID : 264330564967  
Status : Answered  
Chosen Option : 3

**Q.11** The given sentence contains an error. Select the option that correctly rectifies the error.  
Earlier, he was feeling better, but things took a turn for the bad.

- Ans
- 1. Earlier, he was feeling better, but things took a turn for the worst.
  - 2. Earlier, he was feeling good, but things took a turn for the bad.
  - 3. Earlier, he was feeling well, but things took a turn for the ill.
  - 4. Earlier, he was feeling better, but things took a turn for the ill.

Question ID : 264330152609  
Option 1 ID : 264330598040  
Option 2 ID : 264330598041  
Option 3 ID : 264330598039  
Option 4 ID : 264330598042  
Status : Answered  
Chosen Option : 1

Q.12 Select the most appropriate meaning of the given idiom.

**Blessing in disguise**

- Ans  1. Something that seems good but is harmful for you  
 2. Something that seems bad but provides some benefit  
 3. Something that cannot be hidden from anyone  
 4. Something that remains hidden from everyone

Question ID : 264330153010  
Option 1 ID : 264330599611  
Option 2 ID : 264330599612  
Option 3 ID : 264330599613  
Option 4 ID : 264330599614  
Status : Answered  
Chosen Option : 2

Q.13 Select the most appropriate ANTONYM of the given word.  
**Break**

- Ans  1. Divide  
 2. Mend  
 3. Split  
 4. Breach

Question ID : 264330153556  
Option 1 ID : 264330601725  
Option 2 ID : 264330601724  
Option 3 ID : 264330601726  
Option 4 ID : 264330601723  
Status : Answered  
Chosen Option : 2

Q.14 Select the option that can be used as a one-word substitute for the given group of words.

**A place of burial**

- Ans  1. Building  
 2. Laboratory  
 3. Cemetery  
 4. Observatory

Question ID : 264330153360  
Option 1 ID : 264330600994  
Option 2 ID : 264330600992  
Option 3 ID : 264330600991  
Option 4 ID : 264330600993  
Status : Answered  
Chosen Option : 3

**Q.15** Select the most appropriate **ANTONYM** of the given word.  
**Forthcoming**

- Ans**
- 1. Large
  - 2. Extensive
  - 3. Adventurous
  - 4. Past

Question ID : 264330151912  
Option 1 ID : 264330595265  
Option 2 ID : 264330595264  
Option 3 ID : 264330595266  
Option 4 ID : 264330595263  
Status : Answered  
Chosen Option : 4

**Q.16** Parts of the following sentence have been given as options. Select the option that contains an error.

I will celebrating New Year at my old residence as usual.

- Ans**
- 1. I
  - 2. will celebrating
  - 3. New Year
  - 4. at my old residence as usual.

Question ID : 264330155229  
Option 1 ID : 264330608371  
Option 2 ID : 264330608372  
Option 3 ID : 264330608373  
Option 4 ID : 264330608374  
Status : Answered  
Chosen Option : 2

**Q.17** The following sentence has been divided into parts. One of them may contain an error. Select the part that contains the error from the given options. If you don't find any error, mark 'No error' as your answer.  
Why don't / you throw this / paper on the dust bin?

- Ans**
- 1. paper on the dust bin
  - 2. No error
  - 3. you throw this
  - 4. Why don't

Question ID : 264330150527  
Option 1 ID : 264330589753  
Option 2 ID : 264330589754  
Option 3 ID : 264330589752  
Option 4 ID : 264330589751  
Status : Answered  
Chosen Option : 1

**Q.18** Select the most appropriate meaning of the given idiom.  
**Beat around the bush**

- Ans
- 1. To be persistent in pursuing a goal
  - 2. To be impatient and short-tempered
  - 3. To be direct and formal
  - 4. To avoid addressing a topic correctly

Question ID : 264330143943  
Option 1 ID : 264330564037  
Option 2 ID : 264330564038  
Option 3 ID : 264330564035  
Option 4 ID : 264330564036  
Status : Answered  
Chosen Option : 4

**Q.19** Select the most appropriate option to fill in the blank.  
Her stories paid \_\_\_\_\_ to her mother, whom she regarded as the goddess of bravery.

- Ans
- 1. frustration
  - 2. sainthood
  - 3. absoluteness
  - 4. homage

Question ID : 264330153552  
Option 1 ID : 264330601707  
Option 2 ID : 264330601710  
Option 3 ID : 264330601708  
Option 4 ID : 264330601709  
Status : Answered  
Chosen Option : 4

**Q.20** Select the most appropriate synonym of the given word.  
**Amicable**

- Ans
- 1. Friendly
  - 2. Proud
  - 3. Generous
  - 4. Harsh

Question ID : 264330152749  
Option 1 ID : 264330598596  
Option 2 ID : 264330598597  
Option 3 ID : 264330598598  
Option 4 ID : 264330598595  
Status : Answered  
Chosen Option : 1

**Comprehension:**

In the following passage, some words have been deleted. Read the passage carefully and select the most appropriate option to fill in each blank.

Once, there was a boy who became bored when he watched over the village sheep (1)\_\_\_\_\_ on the hillside. To entertain himself, he sang out, "Wolf! Wolf! The wolf is chasing the sheep!" When the villagers heard the cry, they came (2)\_\_\_\_\_ the hill to drive the wolf away. But, when they arrived, they saw no wolf. The boy was amused when seeing their angry faces. "Don't scream wolf, boy," warned the villagers, "when there is no wolf!" They angrily went back down the hill. Later, the shepherd boy cried out once again, "Wolf! Wolf! The wolf is chasing the sheep!" When the villagers came, they saw there was no wolf, they said strictly, "Save your (3)\_\_\_\_\_ cry for when there is really a wolf! Don't cry 'wolf' when there is no wolf!" Later, the boy saw a real wolf sneaking around his flock. Alarmed, he jumped on his feet and cried out as loud as he could, "Wolf! Wolf!" But the villagers thought he was (4)\_\_\_\_\_ them again, and so they didn't come to help. At sunset, the villagers went looking for the boy who hadn't returned with their sheep. When they went up the hill, they found him (5)\_\_\_\_\_ as all the sheep were dead.

**SubQuestion No : 21**

**Q.21** Select the most appropriate option to fill in blank number 1.

- Ans  1. laughing  
 2. receiving  
 3. assisting  
 4. grazing

Question ID : 264330153531  
Option 1 ID : 264330601627  
Option 2 ID : 264330601630  
Option 3 ID : 264330601628  
Option 4 ID : 264330601629  
Status : Answered  
Chosen Option : 4

**Comprehension:**

In the following passage, some words have been deleted. Read the passage carefully and select the most appropriate option to fill in each blank.

Once, there was a boy who became bored when he watched over the village sheep (1)\_\_\_\_\_ on the hillside. To entertain himself, he sang out, "Wolf! Wolf! The wolf is chasing the sheep!" When the villagers heard the cry, they came (2)\_\_\_\_\_ the hill to drive the wolf away. But, when they arrived, they saw no wolf. The boy was amused when seeing their angry faces. "Don't scream wolf, boy," warned the villagers, "when there is no wolf!" They angrily went back down the hill. Later, the shepherd boy cried out once again, "Wolf! Wolf! The wolf is chasing the sheep!" When the villagers came, they saw there was no wolf, they said strictly, "Save your (3)\_\_\_\_\_ cry for when there is really a wolf! Don't cry 'wolf' when there is no wolf!" Later, the boy saw a real wolf sneaking around his flock. Alarmed, he jumped on his feet and cried out as loud as he could, "Wolf! Wolf!" But the villagers thought he was (4)\_\_\_\_\_ them again, and so they didn't come to help. At sunset, the villagers went looking for the boy who hadn't returned with their sheep. When they went up the hill, they found him (5)\_\_\_\_\_ as all the sheep were dead.

**SubQuestion No : 22**

**Q.22** Select the most appropriate option to fill in blank number 2.

- Ans  1. driving  
 2. walking down  
 3. running down  
 4. running up

Question ID : 264330153532  
Option 1 ID : 264330601632  
Option 2 ID : 264330601633  
Option 3 ID : 264330601634  
Option 4 ID : 264330601631  
Status : Answered  
Chosen Option : 4

**Comprehension:**

In the following passage, some words have been deleted. Read the passage carefully and select the most appropriate option to fill in each blank.

Once, there was a boy who became bored when he watched over the village sheep (1)\_\_\_\_\_ on the hillside. To entertain himself, he sang out, "Wolf! Wolf! The wolf is chasing the sheep!" When the villagers heard the cry, they came (2)\_\_\_\_\_ the hill to drive the wolf away. But, when they arrived, they saw no wolf. The boy was amused when seeing their angry faces. "Don't scream wolf, boy," warned the villagers, "when there is no wolf!" They angrily went back down the hill. Later, the shepherd boy cried out once again, "Wolf! Wolf! The wolf is chasing the sheep!" When the villagers came, they saw there was no wolf, they said strictly, "Save your (3)\_\_\_\_\_ cry for when there is really a wolf! Don't cry 'wolf' when there is no wolf!" Later, the boy saw a real wolf sneaking around his flock. Alarmed, he jumped on his feet and cried out as loud as he could, "Wolf! Wolf!" But the villagers thought he was (4)\_\_\_\_\_ them again, and so they didn't come to help. At sunset, the villagers went looking for the boy who hadn't returned with their sheep. When they went up the hill, they found him (5)\_\_\_\_\_ as all the sheep were dead.

**SubQuestion No : 23**

**Q.23** Select the most appropriate option to fill in blank number 3.

- Ans  1. frightened  
 2. laughable  
 3. funny  
 4. muffled

Question ID : 264330153533  
Option 1 ID : 264330601636  
Option 2 ID : 264330601637  
Option 3 ID : 264330601635  
Option 4 ID : 264330601638  
Status : Answered  
Chosen Option : 1

**Comprehension:**

In the following passage, some words have been deleted. Read the passage carefully and select the most appropriate option to fill in each blank.

Once, there was a boy who became bored when he watched over the village sheep (1)\_\_\_\_\_ on the hillside. To entertain himself, he sang out, "Wolf! Wolf! The wolf is chasing the sheep!" When the villagers heard the cry, they came (2)\_\_\_\_\_ the hill to drive the wolf away. But, when they arrived, they saw no wolf. The boy was amused when seeing their angry faces. "Don't scream wolf, boy," warned the villagers, "when there is no wolf!" They angrily went back down the hill. Later, the shepherd boy cried out once again, "Wolf! Wolf! The wolf is chasing the sheep!" When the villagers came, they saw there was no wolf, they said strictly, "Save your (3)\_\_\_\_\_ cry for when there is really a wolf! Don't cry 'wolf' when there is no wolf!" Later, the boy saw a real wolf sneaking around his flock. Alarmed, he jumped on his feet and cried out as loud as he could, "Wolf! Wolf!" But the villagers thought he was (4)\_\_\_\_\_ them again, and so they didn't come to help. At sunset, the villagers went looking for the boy who hadn't returned with their sheep. When they went up the hill, they found him (5)\_\_\_\_\_ as all the sheep were dead.

**SubQuestion No : 24**

**Q.24** Select the most appropriate option to fill in blank number 4.

- Ans  1. fooling  
 2. questioning  
 3. fighting  
 4. seeing

Question ID : 264330153534  
Option 1 ID : 264330601642  
Option 2 ID : 264330601640  
Option 3 ID : 264330601639  
Option 4 ID : 264330601641  
Status : Answered  
Chosen Option : 1

**Comprehension:**

In the following passage, some words have been deleted. Read the passage carefully and select the most appropriate option to fill in each blank.

Once, there was a boy who became bored when he watched over the village sheep (1)\_\_\_\_\_ on the hillside. To entertain himself, he sang out, "Wolf! Wolf! The wolf is chasing the sheep!" When the villagers heard the cry, they came (2)\_\_\_\_\_ the hill to drive the wolf away. But, when they arrived, they saw no wolf. The boy was amused when seeing their angry faces. "Don't scream wolf, boy," warned the villagers, "when there is no wolf!" They angrily went back down the hill. Later, the shepherd boy cried out once again, "Wolf! Wolf! The wolf is chasing the sheep!" When the villagers came, they saw there was no wolf, they said strictly, "Save your (3)\_\_\_\_\_ cry for when there is really a wolf! Don't cry 'wolf' when there is no wolf!" Later, the boy saw a real wolf sneaking around his flock. Alarmed, he jumped on his feet and cried out as loud as he could, "Wolf! Wolf!" But the villagers thought he was (4)\_\_\_\_\_ them again, and so they didn't come to help. At sunset, the villagers went looking for the boy who hadn't returned with their sheep. When they went up the hill, they found him (5)\_\_\_\_\_ as all the sheep were dead.

**SubQuestion No : 25**

**Q.25** Select the most appropriate option to fill in blank number 5.

- Ans  1. singing  
 2. happy  
 3. dancing  
 4. weeping

Question ID : 264330153535

Option 1 ID : 264330601644

Option 2 ID : 264330601646

Option 3 ID : 264330601645

Option 4 ID : 264330601643

Status : Answered

Chosen Option : 4

