

Adda247



# VEER



## SSC GD 2024

**VACANCY : 26146**

### INCLUDES

- EXAM PATTERN & SYLLABUS
- PREVIOUS YEAR PAPERS
- VACANCY TREND
- ELIGIBILITY
- CUT OFF TREND



## SSC GD Notification 2024: Overview

SSC has announced 26146 SSC GD Vacancy 2023-24 for Constable posts for BSF, CISF, CRPF, SSB, ITBP, AR, SSF, NIA forces through an SSC GD Notification. Here is a brief provided about the SSC GD Constable 2024 in the below table.

SSC GD 2024 Notification: Overview	
Organization	Staff Selection Commission (SSC)
Post Name	Constables (GD) in Central Armed Police Forces (CAPFs), SSF and Rifleman (GD) in Assam Rifles (AR) and Sepoy in Narcotics Control Bureau
<b>SSC GD Vacancy 2024</b>	26146
Category	<a href="#">Govt Jobs</a>
Online Application Mode	Online
Exam Mode	Online
Exam Type	National Level Exam
SSC GD Notification 2024 Release Date	<b>24 November 2023</b>
Online Registration Dates	<b>24 November 2023 to 31 December 2023</b>
SSC GD Exam Date 2024	20th, 21st, 22nd, 23rd, 24th, 26th, 27th, 28th, 29th, February and 1st, 5th, 6th, 7th, 11th, 12th March, 2024 <b>[NEW]</b>
Job Location	PAN India
Age Limit	18-23 years
Educational Qualification	10th Pass
Selection Process	<ul style="list-style-type: none"> <li>• CBT</li> <li>• PST</li> <li>• PET</li> <li>• Medical Examination</li> </ul>
Official Website	<a href="http://www.ssc.nic.in">www.ssc.nic.in</a>

## SSC GD Notification 2024: Eligibility Criteria

All the important eligibility criteria including age limit and educational qualification are provided in this article.

### SSC GD Constable Nationality

- Candidates willing to apply for the vacancies released under SSC GD Recruitment 2024 must be a resident of India.



## SSC GD Constable Education Qualification

- To be eligible for the SSC GD Constable Recruitment 2024, candidates must ensure they have cleared matriculation or 10th class from a recognized Board/ University before applying for the General Duty Examination.

## SSC GD Constable Age Limit

- The age of the applicant must not be less than 18 years and should not be more than 23 years.
- The crucial date to calculate the age limit is 01/01/2024.

## Age Relaxation

The relaxation in Age Limit will also be given to the candidates of backward categories according to government rules and regulations which is 3 years for the candidates of the OBC category and 5 years for the applicants of SC/ST Categories.

## SSC GD Previous Year Cut Off

SSC GD Constable Cut Off 2022 (Candidates qualified against All India vacancies of Sepoy in NCB)


Category	Cut Off Marks	Part A Marks	Part B Marks	DOB
EWS	136.75	36	23	11/07/2003
SC	127.33	38	16	02/02/2004
ST	123.04	35	27.5	02/12/1994
ESM	71.83	24.5	4.5	24/06/1986
OBC	137.64	36	22	20/03/1998
UR	139.32	38	26	28/12/1999

SSC GD Constable Cut Off 2022 (Female candidates qualified against All-India vacancies of SSF)

Category	Cut Off Marks	Part A Marks	Part B Marks	DOB
EWS	128.41	33.5	20	15/07/2002
SC	115.25	37.5	18	15/08/2000
ST	112.13	34	3.5	07/01/2002
OBC	130.78	37.5	12	16/05/2003
UR	132.70	36	19	06/05/2000

SSC GD Constable Cut Off 2022 (Male candidates qualified against All-India vacancies of SSF)

Category	Cut Off Marks	Part A Marks	Part B Marks	DOB
EWS	139.16	38	23.5	20/04/2003
SC	129.75	33.5	19.5	01/03/2002
ST	126.45	26.5	26	15/05/1998
ESM	75.01	26	16	06/01/1974
OBC	140.75	37.5	13.5	05/11/2000
UR	142.03	40	14.5	02/10/2004



## SSC GD Vacancy Trend

Year	No. Of Vacancy
2023-24	26146
2022	50187
2021	25271
2020	60210
2019	54593

## SSC GD 2024 Application Fees

Category	Application Fee
General Male	Rs. 100
Female/SC/ST/Ex-serviceman	No Fee

## SSC GD 2024 Selection Process

The SSC GD Constable selection process consists of four different stages. The candidates who qualify in all the stages of the examination will have to appear for document verification.

1. Computer Based Test (CBT)
2. Physical Standard Test (PST)
3. Physical Efficiency Test (PET)
4. Medical Test

## SSC GD 2024 Exam Pattern

- Each question will carry 2 marks
- There will be a negative marking of 0.25 marks for each wrong answer

Parts	Name of Disciplines	Questions	Marks	Duration
Part-A	General Intelligence and reasoning	20	40	60 minutes
Part-B	General Awareness and General Knowledge	20	40	
Part-C	Elementary Mathematics	20	40	
Part-D	English/Hindi	20	40	
	<b>Total</b>	<b>80</b>	<b>160</b>	

## SSC GD Constable Physical Efficiency Test Exam Pattern

Candidates have to clear the race within the following time limits:-

Male	Female	Category
5 km in 24 min	1.6 km in 8½ min	For candidates other than those belonging to the Ladakh region
1.6 km in 6½ min	800 m in 4 min	For candidates of the Ladakh region

## SSC GD Constable Physical Standard Test Exam Pattern

Standard	For Male Candidates	For Female Candidates
Height ( General, SC & OBC)	170	157
Height ( ST )	162.5	150
Chest Expansion (General, SC & OBC)	80/ 5	N/A
Chest Expansion ( ST )	76 / 5	N/A

## SSC GD 2024 Syllabus

SSC GD Constable Paper comprises four Sections/Subjects that are mentioned below: Check complete SSC GD Syllabus here.

- General Intelligence and Reasoning
- General Knowledge and General Awareness
- Elementary Mathematics
- English/ Hindi

The SSC GD syllabus contains Computer Based Examination which includes an objective-type paper carrying 160 marks for 80 questions.

### SSC GD Syllabus For General Intelligence & Reasoning

This General Intelligence section consists of both verbal and non-verbal types of reasoning questions. This test particularly includes questions that test the candidate's analytical and logical reasoning skills and his/ her ability to observe and distinguish patterns. The topics included in the syllabus are as follows:

- Reasoning Analogies
- Arithmetic Number Series
- Arithmetical Reasoning
- Coding-Decoding
- Discrimination
- Figural Classification
- Non-verbal Series
- Observation
- Relationship Concepts – Blood Relations
- Similarities and Differences
- Spatial Orientation
- Spatial Visualization
- Visual Memory

### SSC GD Syllabus For General Knowledge and General Awareness

This section depends on current news affairs and some general knowledge. These questions do not require the candidate to have special knowledge of any particular discipline. The questions in this component revolve around matters of everyday observations and test the candidate's knowledge of the environment around him/ her and topics related to India and its neighboring countries such as:

- Culture
- Economic Scene
- General Polity
- Geography
- History
- Indian Constitution
- Scientific Research
- Sports

**ENGLISH**

## SSC 2023-24

## SSC GD

TOPIC WISE + MOCK TESTS

### COMPLETE PACK

**360 + TOTAL TESTS**

## SSC GD Syllabus For Elementary Mathematics

This section is based on high-school-level mathematical problems. According to the SSC GD syllabus, the following topics are:

- Averages
- Computation of Whole Numbers
- Decimals and Fractions
- Discount
- Fundamental Arithmetical Operations
- Interest
- Mensuration
- Number Systems
- Percentages
- Profit and Loss
- Ratio and Proportion
- Ratio and Time
- Relationship between Numbers
- Time and Distance
- Time and Work

## SSC GD Syllabus For English/ Hindi

This is to check the basic knowledge of candidates in Hindi or English. The syllabus is as follows:

- Error Spotting
- Fill in the Blanks: Articles, Prepositions, etc.
- Phrase replacements
- Cloze test
- Synonyms & Antonyms
- Phrase and idioms meaning
- One Word Substitution
- Spellings
- Reading comprehension

## SSC GD 2024 Salary

Pay Level

Level-3

SSC GD Salary

Rs. 21,799 to 69,100

## SSC GD Notification 2024: Job Profile

The duties and responsibilities of this post are also higher. Let us go through the job profiles for the SSC GD Constable.

- GD Constable in BSF
- GD Constable in ITBP
- GD Constable in CISF
- GD Constable in SSB
- GD Constable in CRPF
- GD Constable in Assam Rifles
- GD Constable in SSF

**BILINGUAL**

**SSC  
PRIME  
TEST PACK**

CGL | CHSL | GD | MTS

**1000+ TOTAL TESTS**

## Constable GD in CAPFs SSF Rifleman GD in Assam Rifles and Sepoy in NCB Examination 2022

Roll Number	
Candidate Name	
Venue Name	Cds Infotech
Exam Date	10/01/2023
Exam Time	9:00 AM - 10:00 AM
Subject	Constable GD Examination 2022

Section : Part-A-General Intelligence and Reasoning

Q.1 Select the correct mirror image of the given figure when the mirror is placed at MN as shown below.

CLkv38z

M ————— N

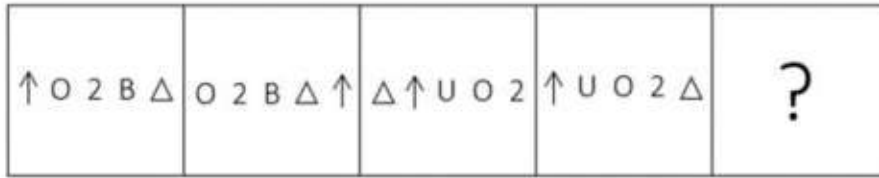
- Ans
- 1. C T K A E 8 5
  - 2. C T K A 3 8 5
  - 3. C T K A 3 8 5
  - 4. 5 8 E v k l c

Question ID : 26433080804

Status : Answered

Chosen Option : 3

Q.2 Which figure should replace the question mark (?) if the series were to be continued?



Ans

✗ 1. Δ 2 O U ↑

✓ 2. 2 Δ ☆ ↑ U

✗ 3. 2 Δ O ↑ U

✗ 4. Δ 2 F U ↑

Question ID : 26433076637

Status : Answered

Chosen Option : 2

Q.3 Select the option that is related to the fifth letter-cluster in the same way as the second letter-cluster is related to the first letter-cluster and the fourth letter-cluster is related to the third letter-cluster.

YOUR: XPEJ :: TONE: SPLW :: BANK: ?

Ans ✗ 1. XYOP

✗ 2. CBOL

✓ 3. ABLO

✗ 4. YZMP

Question ID : 26433057494

Status : Answered

Chosen Option : 3



Q.4 Select the option that is related to the fifth letter-cluster in the same way as the second letter-cluster is related to the first letter-cluster and the fourth letter-cluster is related to the third letter-cluster.

COMFORT : OCFMTRO :: CONTROL : OCTNLOR :: DIGITAL : ?

- Ans  1. IDIGLAT  
 2. GITALDI  
 3. GIDLATI  
 4. LATIGID

Question ID : 26433069633  
Status : Answered  
Chosen Option : 1

Q.5 In a certain code language, 'cart light' is coded as 'straw handle', 'plug light' is coded as 'toes handle', and 'cart plug' is coded as 'toes straw'. What is the code word for 'cart'?

- Ans  1. plug  
 2. straw  
 3. handle  
 4. toes

Question ID : 26433079367  
Status : Answered  
Chosen Option : 2

Q.6 Which of the following numbers will replace the question mark (?) in the given series?  
1, 6, 31, 156, ?, 3906

- Ans  1. 781  
 2. 2125  
 3. 985  
 4. 1225

Question ID : 26433070219  
Status : Answered  
Chosen Option : 1

Q.7 Which two signs should be interchanged to make the below equation mathematically correct?

$$72 \times 6 + 18 \div 5 - 9 = 93$$

- Ans  1.  $\times$  and  $+$   
 2.  $+$  and  $-$   
 3.  $+$  and  $\div$   
 4.  $\times$  and  $\div$

Question ID : 264330117495  
Status : Answered  
Chosen Option : 4

Q.8 Which of the following numbers will replace the question mark (?) in the given series?  
33, 47, 44, 58, 56, 70, 69, ?

- Ans
- 1. 80
  - 2. 82
  - 3. 84
  - 4. 83

Question ID : 26433067879  
Status : Answered  
Chosen Option : 4

Q.9 Select the set in which the numbers are related in the same way as are the numbers of the following set.

(NOTE : Operations should be performed on the whole numbers, without breaking down the numbers into its constituent digits. E.g. 13 – Operations on 13 such as adding /subtracting/multiplying etc. to 13 can be performed. Breaking down 13 into 1 and 3 and then performing mathematical operations on 1 and 3 is NOT allowed)  
(20, 30, 450)  
(35, 25, 540)

- Ans
- 1. (9, 17, 264)
  - 2. (20, 9, 297)
  - 3. (7, 18, 225)
  - 4. (8, 15, 227)

Question ID : 26433076487  
Status : Answered  
Chosen Option : 3

Q.10 In a certain code language, FORCE is coded as 47, and GREEN is coded as 49. How will FLAVOUR be coded in that language?

- Ans
- 1. 98
  - 2. 92
  - 3. 95
  - 4. 100

Question ID : 26433067995  
Status : Answered  
Chosen Option : 3

Q.11 Six people are sitting around a circular table facing the centre. Kaya is the immediate neighbour of Jaya and Tara. Sonal is the immediate neighbour of Priya and Swati. Sonal is sitting immediate right of Priya, Tara and Swati are not sitting immediately next to each other. Who is sitting to the immediate left of Priya?

- Ans
- 1. Tara
  - 2. Kaya
  - 3. Jaya
  - 4. Swati

Question ID : 26433069665  
Status : Answered  
Chosen Option : 1

**Q.12** Two different positions of the same dice are shown having alphabets P to U. Find the alphabet on the face opposite the face showing 'U'.



- Ans
- 1. Q
  - 2. S
  - 3. T
  - 4. R

Question ID : 26433085526  
Status : Answered  
Chosen Option : 4

**Q.13** Six colleagues A, B, C, D, E and F are having lunch together on a circular table at equal distance, facing the centre of the circle. D is the immediate neighbour of E and B while C is the immediate neighbour of A and F. If A is to the immediate left of E, then who is on the immediate left of C?

- Ans
- 1. D
  - 2. F
  - 3. B
  - 4. E

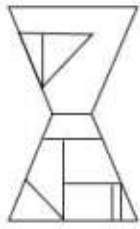
Question ID : 26433079052  
Status : Answered  
Chosen Option : 2

**Q.14** Which of the following terms will replace the question mark (?) in the given series?  
EZG, GXH, KTL, QNR, ?

- Ans
- 1. WEY
  - 2. YGY
  - 3. YFZ
  - 4. XFZ

Question ID : 26433068304  
Status : Answered  
Chosen Option : 2

Q.15 Select the option figure which is embedded in the given figure. (Rotation is NOT allowed)

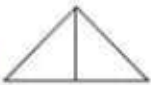


Ans

✗ 1.



✗ 2.



✗ 3.



✓ 4.



Question ID : 26433069337

Status : Answered

Chosen Option : 4

Q.16 Which two signs should be interchanged to make the below equation mathematically correct?

$$42 + 16 \div 7 - 36 \times 16 = 76$$

Ans ✗ 1. + and -

✗ 2. + and ×

✓ 3. × and +

✗ 4. + and +

Question ID : 264330114197

Status : Answered

Chosen Option : 3

Q.17 Which letter-cluster will replace the question mark (?) to complete the given series?  
ZACF, WXZC, ?, QRTW, NOQT

Ans ✗ 1. XUVZ

✗ 2. XUYZ

✗ 3. VWZC

✓ 4. TUWZ

Question ID : 26433067712

Status : Answered

Chosen Option : 4



Q.18 In this question, three statements are given, followed by two conclusions numbered I and II. Assuming the statements to be true, even if they seem to be at variance with commonly known facts, decide which of the conclusions logically follows/follow from the statements.

Statements:

All bottles are bags.

Some bags are pencils.

Some pencils are sharpeners.

Conclusions:

I. Some sharpeners are bottles.

II. Some bottles are pencils.

- Ans
- 1. Both conclusions I and II follow.
  - 2. Neither conclusion I nor II follows.
  - 3. Only conclusion II follows.
  - 4. Only conclusion I follows.

Question ID : 26433070393

Status : Answered

Chosen Option : 2

Q.19 Which option represents the correct order of the given words as they would appear in the English dictionary?

1 manner

2 manage

3 masculine

4 magic

5 matter

- Ans
- 1. 1,2,4,3,5
  - 2. 1,4,3,2,5
  - 3. 4,2,1,3,5
  - 4. 4,1,2,5,3

Question ID : 26433069285

Status : Answered

Chosen Option : 3

Q.20 'A + B' means 'B is the father of A'  
'A # B' means 'B is the sister of A'  
'A @ B' means 'B is the brother of A'  
If A @ B # C + D + E, then how is E related to A?

- Ans
- 1. Son
  - 2. Father
  - 3. Father's father
  - 4. Father's brother

Question ID : 26433068535

Status : Answered

Chosen Option : 3

Q.1 Jagoi is a major style of which of the following forms of Indian classical dance?

- Ans
- 1. Sattriya
  - 2. Kathak
  - 3. Manipuri
  - 4. Odissi

Question ID : 26433070839  
Status : Answered  
Chosen Option : 1

Q.2 Identify a way to reduce the pollution caused due to burning of fossil fuels

- Ans
- 1. By lowering the temperature of burning
  - 2. By increasing the efficiency of the combustion process
  - 3. By increasing the number of carbon molecules
  - 4. By decreasing the latent heat

Question ID : 26433096234  
Status : Answered  
Chosen Option : 4

Q.3 Tapan Kumar Pattanayak won the Sangeet natak Akademi Award in which dance form?

- Ans
- 1. Kuchipudi
  - 2. Chhau
  - 3. Sattriya
  - 4. Odissi

Question ID : 264330115827  
Status : Not Answered  
Chosen Option : --

Q.4 Who was the first Indian to conquer the English Channel from Dover to Calais in 1958, and also the only man to swim the oceans of the five continents in one calendar year in 1966?

- Ans
- 1. Mihir Sen
  - 2. Ramanathan Krishnan
  - 3. Ajit Patel
  - 4. Khashaba Jadhav

Question ID : 26433089924  
Status : Answered  
Chosen Option : 2

Q.5 Rs. 2000 banknote of Mahatma Gandhi (New) Series has \_\_\_\_\_ motif on its back.

- Ans
- 1. Rani Ki Vav
  - 2. Mangalyaan
  - 3. Sun Temple, Konark
  - 4. Red Fort

Question ID : 264330115382  
Status : Answered  
Chosen Option : 2

Q.6 Who commissioned India's first indigenous aircraft carrier INS Vikrant in Kochi in September 2022?

- Ans
- 1. Rajnath Singh
  - 2. Amit Shah
  - 3. Jyotiraditya Scindia
  - 4. Narendra Modi

Question ID : 264330114916  
Status : Answered  
Chosen Option : 1

Q.7 Which latitude line passes through the middle of India influencing the climate of the country?

- Ans
- 1. Equator
  - 2. Tropic of Capricorn
  - 3. Tropic of Cancer
  - 4. Antarctic Circle

Question ID : 264330115984  
Status : Answered  
Chosen Option : 2

Q.8 During the reign of which of the following Mauryan kings, the Kalinga War was fought?

- Ans
- 1. Bindusara
  - 2. Ashoka
  - 3. Chandragupta
  - 4. Dasaratha

Question ID : 264330115454  
Status : Answered  
Chosen Option : 2

Q.9 When was the first complete Census conducted in India?

- Ans
- 1. 1882
  - 2. 1880
  - 3. 1887
  - 4. 1881

Question ID : 264330116036  
Status : Answered  
Chosen Option : 1

Q.10 Who has been appointed as the "State Brand Ambassador" of Uttarakhand government in August 2022?

- Ans
- 1. Dinesh Karthik
  - 2. Rishabh Pant
  - 3. Akshay Kumar
  - 4. Rohit Shetty

Question ID : 264330114985  
Status : Answered  
Chosen Option : 2

Q.11 The President of India is elected by \_\_\_\_\_.

- Ans
- 1. Only the Members of State Legislative Assemblies
  - 2. Only the elected members of both Houses of Parliament
  - 3. Only the members of Council of States
  - 4. the Elected Members of both Houses of Parliament and State Legislative Assemblies.

Question ID : 264330115663  
Status : Answered  
Chosen Option : 4

Q.12 Which of the following is the thanksgiving festival of Maharashtra, where bulls are honoured as they are considered indispensable to farming?

- Ans
- 1. Makar Sankranti
  - 2. Pola Festival
  - 3. Gudi Padwa
  - 4. Kala Ghoda Arts Festival

Question ID : 264330106205  
Status : Answered  
Chosen Option : 3



Q.13 Original text of the Indian Constitution contained \_\_\_\_\_ articles.

- Ans  1. 376  
 2. 395  
 3. 386  
 4. 440

Question ID : 264330115691  
Status : Answered  
Chosen Option : 3

Q.14 Which of the following was one of the main objectives of the Seventh Five-Year Plan?

- Ans  1. Increase in Infrastructure  
 2. Increase in production of Food Grains  
 3. Elimination of poverty  
 4. Improve the standard of living

Question ID : 264330116126  
Status : Answered  
Chosen Option : 1

Q.15 Moss and Marchantia comes under which of the following?

- Ans  1. Algae  
 2. Gymnosperms  
 3. Pteridophytes  
 4. Bryophytes

Question ID : 264330115210  
Status : Not Answered  
Chosen Option : --

Q.16 Revenue receipts are \_\_\_\_\_ as they do not lead to a claim on the government.

- Ans  1. capital receipts  
 2. reinforceable  
 3. redeemable  
 4. non-redeemable

Question ID : 264330115282  
Status : Answered  
Chosen Option : 4

Q.17 During emergency which fundamental rights cannot be suspended?

- Ans  1. Article 14-15  
 2. Article 20-21  
 3. Article 18-19  
 4. Article 16-17

Question ID : 264330115617  
Status : Answered  
Chosen Option : 1

Q.18 In which among the following states, Arabica coffee grown in India?

- Ans
- 1. Assam
  - 2. Uttarakhand
  - 3. West Bengal
  - 4. Karnataka

Question ID : 264330115529  
Status : Answered  
Chosen Option : 3

Q.19 \_\_\_\_\_ falls under the Ministry of textiles.

- Ans
- 1. Samarth Scheme
  - 2. Ambekar Social Innovation & Incubation Mission
  - 3. MPLADS (Members of Parliament Local Area Development Scheme)
  - 4. Merchandise Export From India Scheme

Question ID : 264330116173  
Status : Answered  
Chosen Option : 1

Q.20 Which State won the Vijay Hazare Trophy in 2017-18?

- Ans
- 1. Uttar Pradesh
  - 2. Kerala
  - 3. Maharashtra
  - 4. Karnataka

Question ID : 264330116255  
Status : Not Answered  
Chosen Option : --

Section : Part-C-Elementary Mathematics

Q.1 A shopkeeper allows a discount of 40% on his articles and still makes a profit of 20%. How much cost price does shopkeeper pay for an article whose marked price is ₹ 2,400?

- Ans
- 1. ₹1,728
  - 2. ₹1,200
  - 3. ₹1,440
  - 4. ₹1,132

Question ID : 26433062686  
Status : Answered  
Chosen Option : 2

**Q.2** A man covers a certain distance by scooter at 64 km/h and he returns to the starting place riding a bicycle at 16 km/h. Find the average speed for the whole journey.

- Ans**  1. 25.6 km/h  
 2. 26.5 km/h  
 3. 40 km/h  
 4. 51.2 km/h

Question ID : 26433076200  
Status : Answered  
Chosen Option : 1

**Q.3** 5 women can complete a work in 8 days, while 8 children take 10 days to complete the same work. How many days will 2 women and 4 children take to complete the work?

- Ans**  1. 10  
 2. 12  
 3. 40  
 4. 8

Question ID : 26433076384  
Status : Answered  
Chosen Option : 1

**Q.4** The diameter of a right circular cylinder is 14 cm and height is 2 cm. The sum of its curved surface area and the total surface area is: (use  $\pi = \frac{22}{7}$ )

- Ans**  1. 484 cm<sup>2</sup>  
 2. 308 cm<sup>2</sup>  
 3. 176 cm<sup>2</sup>  
 4. 968 cm<sup>2</sup>

Question ID : 26433087416  
Status : Answered  
Chosen Option : 1

**Q.5** What is the fourth proportional to  $\sqrt{6}$ ,  $\sqrt{8}$  and  $\sqrt{21}$  ?

- Ans**  1.  $3\sqrt{7}$   
 2.  $2\sqrt{7}$   
 3.  $8\sqrt{7}$   
 4.  $5\sqrt{7}$

Question ID : 26433079869  
Status : Answered  
Chosen Option : 2

Q.6 A can paint a painting in 12 days. B can paint the same in 8 days. C can paint the same in 10 days. Find the (approximate) number of days in which the painting can be painted by A if he is accompanied by both B and C together on alternate days and A starts painting on the first day alone.

- Ans
- 1. 4.4 days
  - 2. 5.4 days
  - 3. 7.2 days
  - 4. 8.5 days

Question ID : 264330116857  
Status : Answered  
Chosen Option : 2

Q.7 The population of bears in a city has been growing at 3% every year. If the present population of bears in the city is 21,218, what was the population of bears two years ago?

- Ans
- 1. 18000
  - 2. 19000
  - 3. 18500
  - 4. 20000

Question ID : 26433075412  
Status : Answered  
Chosen Option : 4

Q.8 The income of a person is ₹95,000 and his expenditure is ₹75,000. If his income is increased by 18% and the expenditure by 12%, then what will be the percentage increase in his saving?

- Ans
- 1. 40.6%
  - 2. 40.8%
  - 3. 40.4%
  - 4. 40.5%

Question ID : 26433080161  
Status : Answered  
Chosen Option : 4

Q.9 Mohan is selling a table at Rs.2,832. If his profit is 18%, then what is the cost price of the table?

- Ans
- 1. Rs.2,480
  - 2. Rs.2,500
  - 3. Rs.2,440
  - 4. Rs.2,400

Question ID : 26433075652  
Status : Answered  
Chosen Option : 4



Q.10 In how much time (in years) would ₹80,000 amount to ₹1,17,128 at 10% per annum rate of interest, compounded yearly?

- Ans  1. 4 years  
 2. 2 years  
 3. 2.5 years  
 4. 3.5 years

Question ID : 26433076229  
Status : Answered  
Chosen Option : 1

Q.11 5 bells start commencing together at 9 AM. They ring at the intervals of 12 seconds, 18 seconds, 24 seconds, 36 seconds and 45 seconds. At what time do the bells ring together again?

- Ans  1. 9:10 AM  
 2. 9:06 AM  
 3. 9:08 AM  
 4. 9:05 AM

Question ID : 264330116633  
Status : Answered  
Chosen Option : 2

Q.12 A spends 45% of his salary on food and donates 5% of his salary on old age homes. If he spends Rs.28,500 on food and old age homes, then what will be the salary of A?

- Ans  1. Rs. 52,000  
 2. Rs. 57,000  
 3. Rs. 50,000  
 4. Rs. 55,000

Question ID : 26433081016  
Status : Answered  
Chosen Option : 2

Q.13 A cone of radius 9 cm and height 15 cm is melted and made into a cylinder of height 45 cm. The diameter of the cylinder is:

- Ans  1. 3 cm  
 2. 5 cm  
 3. 10 cm  
 4. 6 cm

Question ID : 26433075332  
Status : Answered  
Chosen Option : 4

**Q.14** A person rides bicycle on four different ways to reach the destination. Determine the average speed during this whole journey.

Way	Speed (km/h)	Distance (km)
A	5	20
B	3	15
C	2	10
D	4	24

Ans

1.  $4.5 \frac{\text{km}}{\text{hr}}$

2.  $3.45 \frac{\text{km}}{\text{hr}}$

3.  $5.5 \frac{\text{km}}{\text{hr}}$

4.  $2.45 \frac{\text{km}}{\text{hr}}$

Question ID : 26433076001

Status : Answered

Chosen Option : 2

**Q.15** Divya bought a car for ₹ 3,50,000 and sold it for ₹ 4,35,000. What is her percentage profit (correct up to one decimal place)?

Ans

1. 23.3%

2. 24.3%

3. 21.5%

4. 20.7%

Question ID : 26433075543

Status : Answered

Chosen Option : 2

Q.16

If  $(5x - 2y) : (x - 2y) = 9 : 17$ , then find the value of  $\frac{9x}{13y}$ .

Ans

1.  $\frac{72}{421}$

2.  $\frac{151}{1731}$

3.  $\frac{36}{247}$

4.  $\frac{144}{1001}$

Question ID : 26433080030

Status : Answered

Chosen Option : 3

Q.17 A car covered 240 km in 5 h. If it travels with half of its usual speed, then how much more time will be taken to cover the same distance?

Ans  1. 3 h

2. 5 h

3. 10 h

4. 4 h

Question ID : 26433076306

Status : Answered

Chosen Option : 2

Q.18 X bought 40 pencils for a total of Rs 180 and bought 2 dozens of pens for Rs 180. Find the difference between the price of one pen and one pencil.

Ans  1. Rs 3.5

2. Rs 3

3. Rs 2

4. Rs 2.5

Question ID : 264330116689

Status : Answered

Chosen Option : 2

Q.19 How many prime numbers are there between 40 and 50?

Ans  1. 4

2. 5

3. 3

4. 2

Question ID : 26433080282

Status : Answered

Chosen Option : 3

**Q.20** A dealer allowed a discount of 20 percent on marked price of Rs. 72000 on an article and incurred a loss of 10 percent. What discount should he allow on the marked price, so that he gains Rs. 440 on the article?

- Ans**  1. 10.5 percent  
 2. 8.5 percent  
 3. 9.5 percent  
 4. 11.5 percent

Question ID : 264330116742  
Status : Answered  
Chosen Option : 1

Section : Part-D-English

**Q.1** Identify the correctly spelt sentence.

- Ans**  1. The events arranged or organised in order of time are known as chronoligal order.  
 2. The events arranged or organised in order of time are known as chronological order.  
 3. The events arranged or organised in order of time are known as chronologikal order.  
 4. The events arranged or organised in order of time are known as chronoloigal order.

Question ID : 26433072826  
Status : Answered  
Chosen Option : 2

**Q.2** Select the most appropriate ANTONYM of the given word.

Timid

- Ans**  1. Diffident  
 2. Shy  
 3. Bold  
 4. Fearful

Question ID : 26433073571  
Status : Answered  
Chosen Option : 3

**Q.3** Select the most appropriate synonym of the given word.

Blast

- Ans**  1. Blow up  
 2. Recall  
 3. Plead  
 4. Share

Question ID : 26433089107  
Status : Answered  
Chosen Option : 1



Q.4 Select the most appropriate option that can substitute the underlined segment in the given sentence.

I regarded my brother on passing his graduation examination.

- Ans
- 1. congratulated
  - 2. disparaged
  - 3. flattered
  - 4. kowtowed

Question ID : 26433088163  
Status : Answered  
Chosen Option : 1

Q.5 Select the most appropriate ANTONYM of the given word.

Liability

- Ans
- 1. Resource
  - 2. Responsibility
  - 3. Asset
  - 4. Strike

Question ID : 26433072269  
Status : Answered  
Chosen Option : 4

Q.6 Select the most appropriate homophone to fill in the blank.

In many road accidents people break their bones mainly because their vehicle \_\_\_\_\_ fails.

- Ans
- 1. brake
  - 2. broke
  - 3. brow
  - 4. bleak

Question ID : 26433088794  
Status : Answered  
Chosen Option : 1

Q.7 Select the correct word for the blanks in the given sentence.

Sivakashi is famous for its \_\_\_\_\_ box industry, and I am unable to find a \_\_\_\_\_ for my purple dress.

- Ans
- 1. sweat
  - 2. match
  - 3. chatter
  - 4. bread

Question ID : 26433060538  
Status : Answered  
Chosen Option : 2

Q.8 Select the most appropriate option to fill in the blank.

Truthfully speaking, the victories of peace and harmony have a more \_\_\_\_\_ impact on human civilisation than the so-called victories of war.

- Ans
- 1. Superior
  - 2. Transient
  - 3. Lasting
  - 4. Greater

Question ID : 26433074420  
Status : Answered  
Chosen Option : 4

Q.9 Select the most appropriate option to substitute the underlined segment in the given sentence.

Purchasing furniture at a low cost could not involve abandoning design or quality.

- Ans
- 1. should not entail sacrificing
  - 2. did not provoke compromising
  - 3. have not done regretting
  - 4. cannot force forgetting

Question ID : 26433092914  
Status : Answered  
Chosen Option : 1

Q.10 Select the most appropriate synonym of the given word.

Colloquial

- Ans
- 1. Lexical
  - 2. Conversational
  - 3. Prosodic
  - 4. Linguistic

Question ID : 26433073635  
Status : Answered  
Chosen Option : 1

Q.11 Select the option that expresses the given sentence in future tense form.

There are multiple facilities available for reaching the island.

- Ans
- 1. There will be multiple facilities available for reaching the island.
  - 2. There have been multiple facilities available for reaching the island.
  - 3. There had been multiple facilities available for reaching the island.
  - 4. There were multiple facilities available for reaching the island.

Question ID : 26433089292  
Status : Answered  
Chosen Option : 1

Q.12 Select the INCORRECTLY spelt word.

- Ans
- 1. Maladjusted
  - 2. Stakeholder
  - 3. Permenent
  - 4. Longitude

Question ID : 26433073513  
Status : Answered  
Chosen Option : 3

Q.13 Select the most appropriate ANTONYM of the given word.

Rancid

- Ans
- 1. Rotten
  - 2. Urgent
  - 3. Fresh
  - 4. Rough

Question ID : 26433071977  
Status : Answered  
Chosen Option : 3

Q.14 Select the most appropriate meaning of the given idiom.

At your beck and call

- Ans
- 1. To have absolute control over someone
  - 2. To call someone respectfully
  - 3. To have no control over someone
  - 4. To call someone and then deny

Question ID : 26433072224  
Status : Answered  
Chosen Option : 1

Q.15 Select the most appropriate meaning of the given idiom.

A night owl

- Ans
- 1. Someone who has good eyesight
  - 2. Someone who works very hard
  - 3. Someone who never works
  - 4. A person who prefers to be awake late at night

Question ID : 26433072675  
Status : Answered  
Chosen Option : 4

**Comprehension:**

In the following passage, some words have been deleted. Read the passage carefully and select the most appropriate option to fill in each blank.

The companies in the present era (1) \_\_\_\_\_ priority, during recruitment, to the candidates who have Emotional Intelligence. EI is the ability to understand, analyse and control emotions. Possessing very high EI creates a (2) \_\_\_\_\_ impact on a person's life. People who have EI always maintain emotional stability even in difficult situations. They can be nice even in socially awkward situations. As they are very good at controlling emotions, they make others feel (3) \_\_\_\_\_. It is proven that it will make leaders more effective as they understand the feelings of teammates. It allows one (4) \_\_\_\_\_ impactfully with others. Stress and conflict can be handled so easily. As it allows great empathy towards others, they can be very good at interpersonal relationship. These people strengthen the relationship (5) \_\_\_\_\_ the people with their interaction and coordination both in personal and professional life. Companies are well aware of the benefits with the employees who have EI.

**SubQuestion No : 16**

**Q.16 Select the most appropriate option to fill in blank number 1.**

- Ans
- 1. has been giving
  - 2. have been given
  - 3. are giving
  - 4. is giving

Question ID : 26433072166

Status : Answered

Chosen Option : 3

**Comprehension:**

In the following passage, some words have been deleted. Read the passage carefully and select the most appropriate option to fill in each blank.

The companies in the present era (1) \_\_\_\_\_ priority, during recruitment, to the candidates who have Emotional Intelligence. EI is the ability to understand, analyse and control emotions. Possessing very high EI creates a (2) \_\_\_\_\_ impact on a person's life. People who have EI always maintain emotional stability even in difficult situations. They can be nice even in socially awkward situations. As they are very good at controlling emotions, they make others feel (3) \_\_\_\_\_. It is proven that it will make leaders more effective as they understand the feelings of teammates. It allows one (4) \_\_\_\_\_ impactfully with others. Stress and conflict can be handled so easily. As it allows great empathy towards others, they can be very good at interpersonal relationship. These people strengthen the relationship (5) \_\_\_\_\_ the people with their interaction and coordination both in personal and professional life. Companies are well aware of the benefits with the employees who have EI.

**SubQuestion No : 17**

**Q.17 Select the most appropriate option to fill in blank number 2.**

- Ans
- 1. creative
  - 2. positive
  - 3. colonial
  - 4. memorable

Question ID : 26433072167

Status : Answered

Chosen Option : 2



**Comprehension:**

In the following passage, some words have been deleted. Read the passage carefully and select the most appropriate option to fill in each blank.

The companies in the present era (1) \_\_\_\_\_ priority, during recruitment, to the candidates who have Emotional Intelligence. EI is the ability to understand, analyse and control emotions. Possessing very high EI creates a (2) \_\_\_\_\_ impact on a person's life. People who have EI always maintain emotional stability even in difficult situations. They can be nice even in socially awkward situations. As they are very good at controlling emotions, they make others feel (3) \_\_\_\_\_. It is proven that it will make leaders more effective as they understand the feelings of teammates. It allows one (4) \_\_\_\_\_ impactfully with others. Stress and conflict can be handled so easily. As it allows great empathy towards others, they can be very good at interpersonal relationship. These people strengthen the relationship (5) \_\_\_\_\_ the people with their interaction and coordination both in personal and professional life. Companies are well aware of the benefits with the employees who have EI.

**SubQuestion No : 18****Q.18 Select the most appropriate option to fill in blank number 3.**

- Ans  1. comfortable  
 2. tolerable  
 3. favourable  
 4. manageable

Question ID : 26433072168

Status : Answered

Chosen Option : 1

**Comprehension:**

In the following passage, some words have been deleted. Read the passage carefully and select the most appropriate option to fill in each blank.

The companies in the present era (1) \_\_\_\_\_ priority, during recruitment, to the candidates who have Emotional Intelligence. EI is the ability to understand, analyse and control emotions. Possessing very high EI creates a (2) \_\_\_\_\_ impact on a person's life. People who have EI always maintain emotional stability even in difficult situations. They can be nice even in socially awkward situations. As they are very good at controlling emotions, they make others feel (3) \_\_\_\_\_. It is proven that it will make leaders more effective as they understand the feelings of teammates. It allows one (4) \_\_\_\_\_ impactfully with others. Stress and conflict can be handled so easily. As it allows great empathy towards others, they can be very good at interpersonal relationship. These people strengthen the relationship (5) \_\_\_\_\_ the people with their interaction and coordination both in personal and professional life. Companies are well aware of the benefits with the employees who have EI.

**SubQuestion No : 19****Q.19 Select the most appropriate option to fill in blank number 4.**

- Ans  1. communicate  
 2. to communicating  
 3. to be communicated  
 4. to communicate

Question ID : 26433072169

Status : Answered

Chosen Option : 4



**Comprehension:**

In the following passage, some words have been deleted. Read the passage carefully and select the most appropriate option to fill in each blank.

The companies in the present era (1) \_\_\_\_\_ priority, during recruitment, to the candidates who have Emotional Intelligence. EI is the ability to understand, analyse and control emotions. Possessing very high EI creates a (2) \_\_\_\_\_ impact on a person's life. People who have EI always maintain emotional stability even in difficult situations. They can be nice even in socially awkward situations. As they are very good at controlling emotions, they make others feel (3) \_\_\_\_\_. It is proven that it will make leaders more effective as they understand the feelings of teammates. It allows one (4) \_\_\_\_\_ impactfully with others. Stress and conflict can be handled so easily. As it allows great empathy towards others, they can be very good at interpersonal relationship. These people strengthen the relationship (5) \_\_\_\_\_ the people with their interaction and coordination both in personal and professional life. Companies are well aware of the benefits with the employees who have EI.

SubQuestion No : 20

Q.20 Select the most appropriate option to fill in blank number 5.

- Ans
- 1. in reference with
  - 2. between
  - 3. along with
  - 4. among

Question ID : 26433072170  
Status : Answered  
Chosen Option : 4

Section : Part-D-Hindi

Q.1 इस वाक्य के रिक्त स्थान पर रेखांकित शब्द का उपयुक्त विलोम शब्द कौन-सा होगा?

भारत में कहीं अतिवृष्टि से बाढ़ आती है तो कहीं \_\_\_\_\_ से सूखा पड़ता है।

- Ans
- 1. लघुवृष्टि
  - 2. अनावृष्टि
  - 3. वृष्टि
  - 4. सुवरिष्टि

Question ID : 26433066909  
Status : Not Answered  
Chosen Option : --

Q.2 'करण खाने बीच मिठाई लाया'

उपरोक्त वाक्य में कारक सम्बन्धी त्रुटि पहचानकर निम्नलिखित में से शुद्ध वाक्य चुनिए।

- Ans
- 1. करण खाने बाद मिठाई लाया।
  - 2. करण खाने की मिठाई लाया।
  - 3. करण खाने के लिए मिठाई लाया।
  - 4. करण खाने साथ मिठाई लाया।

Question ID : 26433066967  
Status : Not Answered  
Chosen Option : --

Q.3 'सुनैना खाना खा रही है'  
उपरोक्त वाक्य का भाववाच्य में रूपांतरण होगा-

- Ans
- 1. सुनैना खाना खा रही थी।
  - 2. सुनैना से खाना नहीं खाया जाता।
  - 3. सुनैना खाना खा रही होगी।
  - 4. सुनैना खाना नहीं खा रही है।

Question ID : 26433066980  
Status : Not Answered  
Chosen Option : --

Q.4 दिए गए शब्दों में से उचित शब्द से वाक्य पूर्ण करें --  
वैद्य जी \_\_\_\_\_ देखकर इलाज करते हैं।

- Ans
- 1. नारी
  - 2. नीड़
  - 3. नीर
  - 4. नाड़ी

Question ID : 26433062909  
Status : Not Answered  
Chosen Option : --

Q.5 'टिप्पस भिड़ाना' मुहावरे का अर्थ होगा-

- Ans
- 1. सिफारिश करवाना
  - 2. अक्ल लगाना
  - 3. लोगों को आपस में लड़वाना
  - 4. नयी योजना बनाना

Question ID : 26433069947  
Status : Not Answered  
Chosen Option : --

Q.6 निम्नलिखित वाक्य के किस खंड में अशुद्धि है?  
गौतम बुद्ध ने पाली भाषा में उपदेश दिया

- Ans
- 1. भाषा
  - 2. उपदेश
  - 3. दिया
  - 4. पाली

Question ID : 26433066753  
Status : Not Answered  
Chosen Option : --

Q.7 वाक्य में रेखांकित अंश के लिए उचित मुहावरा दिए गए विकल्पों में से चुनिए-  
तुम किस काम के हो!

- Ans
- 1. कोढ़ में खाज
  - 2. किस मर्ज की दवा
  - 3. कोल्हू का बैल
  - 4. कूप मंडूक

Question ID : 26433062304  
Status : Not Answered  
Chosen Option : --

Q.8 'सरस्वती' के पर्यायवाची शब्द से वाक्य की पूर्ति कीजिए।

प्रातःकाल \_\_\_\_\_ का स्तोत्र पढ़िए।

- Ans
- 1. धत्री
  - 2. कान्ता
  - 3. शारदा
  - 4. उमा

Question ID : 26433079242  
Status : Not Answered  
Chosen Option : --

Q.9 निम्नलिखित वाक्य के किस खंड में त्रुटि है?  
जीवन और साहित्य का घोर संबंध है।

- Ans
- 1. संबंध
  - 2. घोर
  - 3. साहित्य
  - 4. जीवन

Question ID : 26433066756  
Status : Not Answered  
Chosen Option : --

Q.10 'वह व्यक्ति जो विद्यार्थियों को पढ़ाने का कार्य करता है' वाक्यांश के लिए सार्थक शब्द है-

- Ans
- 1. शिक्षार्थी
  - 2. शिक्षक
  - 3. छात्र
  - 4. विद्यार्थी

Question ID : 26433062230  
Status : Not Answered  
Chosen Option : --

Q.11 लकड़ियों का समूह।  
रेखांकित पद 'समूह' के बदले उपयुक्त शब्द का प्रयोग कीजिए।

- Ans
- 1. रेवड़
  - 2. ढेर
  - 3. टुकड़ा
  - 4. गट्टर

Question ID : 26433062691  
Status : Not Answered  
Chosen Option : --

Q.12 'शरीर का कोई भाग' वाक्यांश के लिए उचित शब्द बताइए -

- Ans
- 1. अवयव
  - 2. अभिन्न
  - 3. कृशांग
  - 4. दृष्टि

Question ID : 26433065908  
Status : Not Answered  
Chosen Option : --

Q.13 निम्न में से किस वाक्य में 'उत्कंठा' के सही पर्यायवाची शब्द का प्रयोग हुआ है?

- Ans
- 1. नव्या में अब कोई लालसा शेष नहीं थी।
  - 2. नेहा श्रेष्ठ गायिका है।
  - 3. रघु में उत्साह की कमी है।
  - 4. लता ने अपनी उदारता का परिचय दिया।

Question ID : 26433067015  
Status : Not Answered  
Chosen Option : --

Q.14 पेड़ बढ़ता गया।

इस वाक्य में प्रयुक्त संयुक्त क्रिया का नाम बताइए।

- Ans
- 1. नित्यताबोधक संयुक्त क्रिया
  - 2. अवकाशबोधक संयुक्त क्रिया
  - 3. अनुमतिबोधक संयुक्त क्रिया
  - 4. समाप्तिबोधक संयुक्त क्रिया

Question ID : 26433063048  
Status : Not Answered  
Chosen Option : --

Q.15 निम्नलिखित वाक्यांश के लिए उपयुक्त सार्थक शब्द है:  
जो कहा न जा सके

- Ans
- 1. कहना
  - 2. कहानी
  - 3. अकथ्य
  - 4. कथन

Question ID : 26433065756  
Status : Not Answered  
Chosen Option : --

**Comprehension:**

निम्नलिखित गद्यांश में कुछ शब्दों को हटा दिया गया है। दिए गए विकल्पों की सहायता से रिक्त स्थानों की पूर्ति कीजिए। प्रत्येक संख्या के लिए सबसे उपयुक्त विकल्प का चयन करें।

मैत्री भाव सकारात्मक तथा 1. \_\_\_\_\_ वर्ग में गिना जाता है। मित्रता ऐसा उपहार है जो 2. \_\_\_\_\_ को प्राप्त होता है। सच्चा मित्र वही होता है जिसके कारण हमें कभी भी 3. \_\_\_\_\_ ना हो। जब भी हमारी ऐसी कोई आदत होती है जिससे दूसरे को परेशानी होती है तो ऐसी आदत 4. \_\_\_\_\_ में ही भलाई है। मनुष्य तो 5. \_\_\_\_\_ प्राणी है।

SubQuestion No : 16

Q.16 रिक्त स्थान 1 की पूर्ति के लिए सबसे उपयुक्त विकल्प का चयन कीजिए।

- Ans
- 1. नकारात्मक
  - 2. निम्न
  - 3. मध्यम
  - 4. उच्च

Question ID : 264330110993  
Status : Not Answered  
Chosen Option : --

**Comprehension:**

निम्नलिखित गद्यांश में कुछ शब्दों को हटा दिया गया है। दिए गए विकल्पों की सहायता से रिक्त स्थानों की पूर्ति कीजिए। प्रत्येक संख्या के लिए सबसे उपयुक्त विकल्प का चयन करें।

मैत्री भाव सकारात्मक तथा 1. \_\_\_\_\_ वर्ग में गिना जाता है। मित्रता ऐसा उपहार है जो 2. \_\_\_\_\_ को प्राप्त होता है। सच्चा मित्र वही होता है जिसके कारण हमें कभी भी 3. \_\_\_\_\_ ना हो। जब भी हमारी ऐसी कोई आदत होती है जिससे दूसरे को परेशानी होती है तो ऐसी आदत 4. \_\_\_\_\_ में ही भलाई है। मनुष्य तो 5. \_\_\_\_\_ प्राणी है।

SubQuestion No : 17

Q.17 रिक्त स्थान 2 की पूर्ति के लिए सबसे उपयुक्त विकल्प का चयन कीजिए।

- Ans
- 1. सबको
  - 2. अमीर
  - 3. भाग्यशाली
  - 4. गरीब

Question ID : 264330110994  
Status : Not Answered  
Chosen Option : --



**Comprehension:**

निम्नलिखित गद्यांश में कुछ शब्दों को हटा दिया गया है। दिए गए विकल्पों की सहायता से रिक्त स्थानों की पूर्ति कीजिए। प्रत्येक संख्या के लिए सबसे उपयुक्त विकल्प का चयन करें।

मैत्री भाव सकारात्मक तथा 1. \_\_\_\_\_ वर्ग में गिना जाता है। मित्रता ऐसा उपहार है जो 2. \_\_\_\_\_ को प्राप्त होता है। सच्चा मित्र वही होता है जिसके कारण हमें कभी भी 3. \_\_\_\_\_ ना हो। जब भी हमारी ऐसी कोई आदत होती है जिससे दूसरे को परेशानी होती है तो ऐसी आदत 4. \_\_\_\_\_ में ही भलाई है। मनुष्य तो 5. \_\_\_\_\_ प्राणी है।

**SubQuestion No : 18**

Q.18 रिक्त स्थान 3 की पूर्ति के लिए सबसे उपयुक्त विकल्प का चयन कीजिए।

- Ans  1. पश्चाताप  
 2. उल्साह  
 3. खुरशी  
 4. भलाई

Question ID : 264330110995

Status : Not Answered

Chosen Option : --

**Comprehension:**

निम्नलिखित गद्यांश में कुछ शब्दों को हटा दिया गया है। दिए गए विकल्पों की सहायता से रिक्त स्थानों की पूर्ति कीजिए। प्रत्येक संख्या के लिए सबसे उपयुक्त विकल्प का चयन करें।

मैत्री भाव सकारात्मक तथा 1. \_\_\_\_\_ वर्ग में गिना जाता है। मित्रता ऐसा उपहार है जो 2. \_\_\_\_\_ को प्राप्त होता है। सच्चा मित्र वही होता है जिसके कारण हमें कभी भी 3. \_\_\_\_\_ ना हो। जब भी हमारी ऐसी कोई आदत होती है जिससे दूसरे को परेशानी होती है तो ऐसी आदत 4. \_\_\_\_\_ में ही भलाई है। मनुष्य तो 5. \_\_\_\_\_ प्राणी है।

**SubQuestion No : 19**

Q.19 रिक्त स्थान 4 की पूर्ति के लिए सबसे उपयुक्त विकल्प का चयन कीजिए।

- Ans  1. छोड़ने  
 2. गिनाने  
 3. दिखाने  
 4. अपनाने

Question ID : 264330110996

Status : Not Answered

Chosen Option : --

**Comprehension:**

निम्नलिखित गद्यांश में कुछ शब्दों को हटा दिया गया है। दिए गए विकल्पों की सहायता से रिक्त स्थानों की पूर्ति कीजिए। प्रत्येक संख्या के लिए सबसे उपयुक्त विकल्प का चयन करें।

मैत्री भाव सकारात्मक तथा 1. \_\_\_\_\_ वर्ग में गिना जाता है। मित्रता ऐसा उपहार है जो 2. \_\_\_\_\_ को प्राप्त होता है। सच्चा मित्र वही होता है जिसके कारण हमें कभी भी 3. \_\_\_\_\_ ना हो। जब भी हमारी ऐसी कोई आदत होती है जिससे दूसरे को परेशानी होती है तो ऐसी आदत 4. \_\_\_\_\_ में ही भलाई है। मनुष्य तो 5. \_\_\_\_\_ प्राणी है।

**SubQuestion No : 20**

**Q.20** रिक्त स्थान 5 की पूर्ति के लिए सबसे उपयुक्त विकल्प का चयन कीजिए।

- Ans**  1. सामाजिक  
 2. दिखावा  
 3. परेशान  
 4. भयानक

Question ID : 264330110997

Status : Not Answered

Chosen Option : --



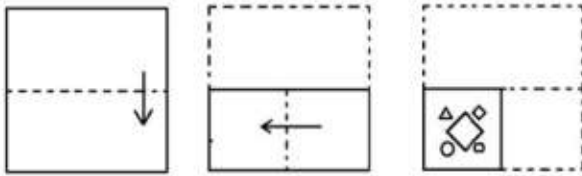
## Constable GD in CAPFs SSF Rifleman GD in Assam Rifles and Sepoy in NCB Examination 2022

Roll Number	
Candidate Name	
Venue Name	TCS Gito Bitan
Exam Date	10/01/2023
Exam Time	11:45 AM - 12:45 PM
Subject	Constable GD Examination 2022

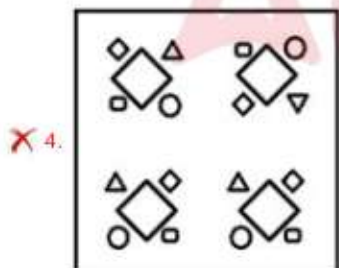
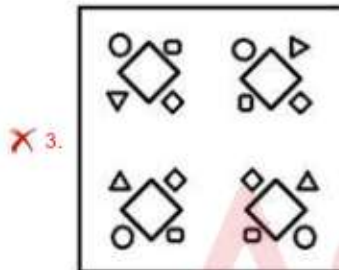
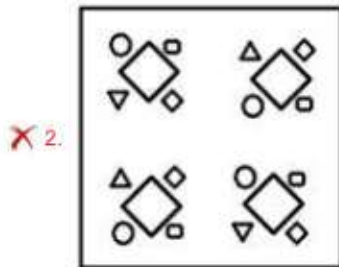
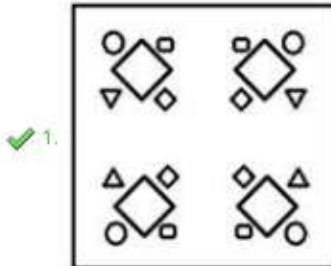
Section : Part-A-General Intelligence and Reasoning



**Q.1** The sequence of folding a piece of paper and the manner in which the folded paper has been cut is shown below. Select the figure which would most closely resemble the unfolded form of the paper.



Ans



Question ID : 26433087095  
 Status : Answered  
 Chosen Option : 1

Q.2 Six girls D, K, M, P, R and S are sitting around a circular table, facing the centre. S is sitting third to the left of R. P is sitting to the immediate right of R and to the immediate left of D. M is sitting to the immediate left of R. K is sitting to the immediate right of S and to the immediate left of M. Who is the immediate neighbour of K and D?

- Ans
- 1. R
  - 2. P
  - 3. M
  - 4. S

Question ID : 26433080472  
Status : Answered  
Chosen Option : 4

Q.3 Which two signs should be interchanged to make the below equation mathematically correct?

$$42 + 12 \div 24 \times 84 - 14 = 91$$

- Ans
- 1. + and  $\times$
  - 2. + and -
  - 3. - and +
  - 4.  $\times$  and  $\div$

Question ID : 264330117505  
Status : Answered  
Chosen Option : 1

Q.4 Select the option that is related to the third word in the same way as the second word is related to the first word (The words must be considered as meaningful English words and must not be related to each other based on the number of letters/consonants/vowels in the word).

Pediatrician : Children :: Dermatologist : ?

- Ans
- 1. Feet
  - 2. Bones
  - 3. Plant
  - 4. Skin

Question ID : 26433078823  
Status : Answered  
Chosen Option : 4

Q.5 Which option represents the correct order of the given words as they would appear in the English dictionary?

- 1 lonely
- 2 longitude
- 3 lovely
- 4 lounge
- 5 locker

- Ans
- 1. 5,1,2,3,4
  - 2. 5,2,1,3,4
  - 3. 5,1,2,4,3
  - 4. 5,4,3,1,2

Question ID : 26433069317  
Status : Answered  
Chosen Option : 3



Q.6 Which letter-cluster will replace the question mark (?) to complete the given series?  
UERB, RHOE, ?, LNIK, IQFN

- Ans
- 1. OKMH
  - 2. OKNI
  - 3. OKLH
  - 4. OLMl

Question ID : 26433068574  
Status : Answered  
Chosen Option : 3

Q.7 Select the set in which the numbers are related in the same way as are the numbers of the following sets.

(NOTE : Operations should be performed on the whole numbers, without breaking down the numbers into its constituent digits. E.g. 13 – Operations on 13 such as adding/subtracting/multiplying etc. to 13 can be performed. Breaking down 13 into 1 and 3 and then performing mathematical operations on 1 and 3 is not allowed)  
(20, 90, 10)  
(25, 135, 10)

- Ans
- 1. (18, 72, 10)
  - 2. (19, 80, 15)
  - 3. (22, 150, 7)
  - 4. (30, 169, 12)

Question ID : 26433076546  
Status : Answered  
Chosen Option : 1

Q.8 Which of the following interchange of numbers (not digits) would make the given equation correct?

$$8 \times 15 \div 3 + 14 - 4 = 26$$

- Ans
- 1. 15, 26
  - 2. 4, 8
  - 3. 14, 15
  - 4. 3, 4

Question ID : 26433087045  
Status : Answered  
Chosen Option : 2

Q.9 A @ B means 'A is the husband of B'.

A & B means 'A is the mother of B'.

A # B means 'A is the daughter of B'.

A % B means 'A is the sister of B'.

If G % V @ K & P and G # S % M, then how is S related to P?

- Ans
- 1. Father's mother
  - 2. Mother-in-law
  - 3. Son's son
  - 4. Father-in-law

Question ID : 26433069614  
Status : Answered  
Chosen Option : 1

**Q.10** Which of the following numbers will replace the question mark (?) in the given series?  
7, 50, 351, 2458, ?

- Ans  1. 17207  
 2. 18000  
 3. 13582  
 4. 15265

Question ID : 26433082002  
Status : Answered  
Chosen Option : 1

**Q.11** Which of the following terms will replace the question mark (?) in the given series?  
DBA, JHG, PNM, ?

- Ans  1. VTU  
 2. VTQ  
 3. VTS  
 4. KMV

Question ID : 26433068631  
Status : Answered  
Chosen Option : 3

**Q.12** Three Statements are given followed by Three conclusions numbered I, II and III.  
Assuming the statements to be true, even if they seem to be at variance with commonly known facts, decide which of the conclusions logically follow(s) from the statements.

Statements:

Some cabbages are rocks.

All rocks are wheels.

No wheel is a scissor.

Conclusions:

I. All cabbages are wheels.

II. Some rocks are wheels.

III. Some wheels are not scissors.

- Ans  1. Both conclusions I and II follow.  
 2. Both conclusions I and III follow.  
 3. Both conclusions II and III follow.  
 4. All conclusions follow.

Question ID : 26433081792  
Status : Answered  
Chosen Option : 3

Q.13 Eight people are sitting in two parallel rows with 4 people each in such a way that there is equal distance between adjacent persons and they are facing each other. In row I – L, M, N and O are seated and all of them are facing south. In row II – P, Q, R and S are seated and all of them are facing north. N sits next to the person at the extreme right end of their row and is facing R. S sits at the extreme left end of their row. Q sits to the immediate right of R and is facing L. O sits at the extreme left end of their row. Who sits at the extreme right end of the row of people facing South?

- Ans  1. N  
 2. M  
 3. L  
 4. O

Question ID : 26433068745  
 Status : Answered  
 Chosen Option : 2

Q.14 Select the correct mirror image of the given figure when the mirror is placed at MN as shown below.



- Ans  1. 9 d b 7 n o m 4 e  
 2. 9 d b 7 m o n 4 e  
 3. e d b 7 m o n 4 9  
 4. 9 b d 7 m o n 4 e

Question ID : 26433082331  
 Status : Answered  
 Chosen Option : 2

Q.15 In a certain code language, 'MONTH' is written as '141213719' and 'YEAR' is written as '222269'. How will 'WEEK' be written in that language?

- Ans  1. 1444424  
 2. 2444416  
 3. 4222261  
 4. 4222216

Question ID : 26433068228  
 Status : Answered  
 Chosen Option : 4

Q.16 In a certain code language, 'BUYER' is written as 'CSZCS' and 'CHILD' is written as 'DFJJE'. How will 'DEATH' be written in that language?

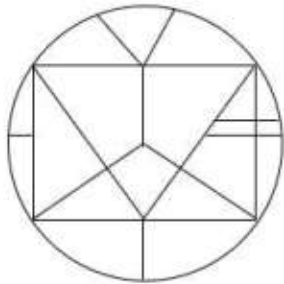
- Ans
- 1. GFCRJ
  - 2. EBCUJ
  - 3. FFBUI
  - 4. ECBRI

Question ID : 26433082558

Status : Answered

Chosen Option : 4

Q.17 Select the option figure which is embedded in the given figure. (Rotation is NOT allowed)



Ans

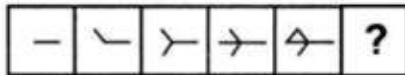
- 1.
- 2.
- 3.
- 4.

Question ID : 26433069349

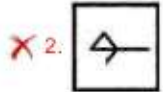
Status : Answered

Chosen Option : 3

Q.18 Select the figure from among the given options that can replace the question mark (?) in the following series.



Ans



Question ID : 26433080494

Status : Answered

Chosen Option : 4

Q.19 Select the option that is related to the fifth letter-cluster in the same way as the second letter-cluster is related to the first letter-cluster and the fourth letter-cluster is related to the third letter-cluster.

UCE : FEX :: PGS : TIS :: HKR : ?

Ans  1. SNK

2. SMJ

3. SMK

4. RKH

Question ID : 26433057745

Status : Answered

Chosen Option : 3

Q.20 Which of the following numbers will replace the question mark (?) in the given series?  
7, 17, ?, 137, 407, 1217

Ans  1. 57

2. 34

3. 51

4. 47

Question ID : 26433068096

Status : Answered

Chosen Option : 4



Q.1 Sadanam P.V Balakrishnan won the Sangeet Natak Akademi Award in which dance form?

- Ans
- 1. Lavani
  - 2. Kathakali
  - 3. Bharatnatyam
  - 4. Kuchipudi

Question ID : 264330115844  
Status : Not Answered  
Chosen Option : --

Q.2 Who among the following was the first Indian to be recruited in Indian Civil Service in British India?

- Ans
- 1. Satyendranath Tagore
  - 2. Rahimtulla M Sayani
  - 3. Rabindranath Tagore
  - 4. Surendra Nath Banerjee

Question ID : 26433090582  
Status : Not Answered  
Chosen Option : --

Q.3 In badminton each game consist of how many points?

- Ans
- 1. 15
  - 2. 21
  - 3. 11
  - 4. 20

Question ID : 264330115928  
Status : Not Answered  
Chosen Option : --

Q.4 Who was the first flag bearer for India in the Olympics?

- Ans
- 1. Purma Banerjee
  - 2. Dhyan Chand
  - 3. Lal Shah Bokhari
  - 4. Zafar Iqbal

Question ID : 264330116258  
Status : Not Answered  
Chosen Option : --

Q.5 Rs. 50 banknote of Mahatma Gandhi (New) series has base colour of \_\_\_\_\_.

- Ans
- 1. chocolate brown
  - 2. stone grey
  - 3. fluorescent blue
  - 4. lavender

Question ID : 264330115292  
Status : Not Answered  
Chosen Option : --

Q.6 Which of the following is a classical dance form from Andhra Pradesh?

- Ans
- 1. Bharatanatyam
  - 2. Mohiniyattam
  - 3. Kuchipudi
  - 4. Manipuri

Question ID : 26433074069  
Status : Not Attempted and Marked For Review  
Chosen Option : --

Q.7 Identify a redox reaction.

- Ans
- 1.  $2\text{Pb}(\text{NO}_3)_2(\text{s}) \xrightarrow{\text{Heat}} 2\text{PbO}(\text{s}) + 4\text{NO}_2(\text{g}) + \text{O}_2(\text{g})$
  - 2.  $\text{CaCO}_3(\text{s}) \xrightarrow{\text{Heat}} \text{CaO}(\text{s}) + \text{CO}_2(\text{g})$
  - 3.  $\text{MnO}_2 + 4\text{HCl} \rightarrow \text{MnCl}_2 + 2\text{H}_2\text{O} + \text{Cl}_2$
  - 4.  $\text{Pb}(\text{s}) + \text{CuCl}_2(\text{aq}) \rightarrow \text{PbCl}_2(\text{aq}) + \text{Cu}(\text{s})$

Question ID : 26433091479  
Status : Not Answered  
Chosen Option : --

Q.8 Maha Shivratri is celebrated in the honour of the Hindu deity, Lord Shiva in the Hindu month of \_\_\_\_\_.

- Ans
- 1. Kartika
  - 2. Chaitra
  - 3. Phalguna
  - 4. Vaishakha

Question ID : 264330115124  
Status : Not Answered  
Chosen Option : --

Q.9 The plan between fifth five year plan and sixth five year plan is known as \_\_\_\_\_.

- Ans
- 1. Forward
  - 2. Equality
  - 3. Rolling
  - 4. Integrated

Question ID : 264330116139  
Status : Answered  
Chosen Option : 3

Q.10 According to Xuan Zang, the \_\_\_\_\_ of Nalanda Buddhist monastery asks new entrants difficult questions which were very difficult to answer

- Ans
- 1. chief of monastery
  - 2. gatekeeper
  - 3. youngest monk
  - 4. oldest monk

Question ID : 26433085220  
Status : Not Answered  
Chosen Option : --

Q.11 As on October 2022, who is the General Secretary of the Communist Party of India ?

- Ans
- 1. Sitaram Yechury
  - 2. D. Raja
  - 3. Indrajit Gupta
  - 4. Binoy Viswam

Question ID : 264330114995  
Status : Not Answered  
Chosen Option : --

Q.12 Skill India Mission's Governing Council is chaired by the \_\_\_\_\_.

- Ans
- 1. Chief Minister
  - 2. President
  - 3. Prime Minister
  - 4. Home Minister

Question ID : 264330116190  
Status : Not Answered  
Chosen Option : --

Q.13 The contribution made by each sector of the economy into GDP is called \_\_\_\_\_.

- Ans
- 1. structural composition
  - 2. nominal composition
  - 3. real GDP
  - 4. real composition

Question ID : 26433082165  
Status : Not Answered  
Chosen Option : --

Q.14 In Nomadic herding, herdsmen move from place to place with their animals for \_\_\_\_\_ and \_\_\_\_\_ along defined routes.

- Ans
- 1. money and water
  - 2. shelter and money
  - 3. fodder and water
  - 4. shelter and fodder

Question ID : 264330115539  
Status : Not Answered  
Chosen Option : --

Q.15 Who among the following was elected as Member of Rajya Sabha from Tripura, India in September 2022?

- Ans
- 1. Arun Singh
  - 2. Miriam Rengma
  - 3. Radha Mohan Das
  - 4. Biplab Kumar Deb

Question ID : 264330114948  
Status : Not Answered  
Chosen Option : --

Q.16 Which article of the Indian Constitution deals with the 'protection of life and personal liberty'?

- Ans
- 1. Article 19
  - 2. Article 21
  - 3. Article 20
  - 4. Article 22

Question ID : 26433089906  
Status : Answered  
Chosen Option : 2

Q.17 Which of the following case is NOT a criminal law case?

- Ans
- 1. Murder
  - 2. Harassment for dowry
  - 3. Theft
  - 4. Divorce case

Question ID : 26433089183  
Status : Answered  
Chosen Option : 4

Q.18 Name the state which has the highest female literacy rate in India as per census 2011.

- Ans  1. Mizoram  
 2. Kerala  
 3. Karnataka  
 4. Maharashtra

Question ID : 264330116053  
Status : Not Answered  
Chosen Option : --

Q.19 In human body, the food passes through a continuous canal which begins at \_\_\_\_\_ and ends at anus.

- Ans  1. stomach  
 2. buccal cavity  
 3. food pipe  
 4. rectum

Question ID : 264330115227  
Status : Answered  
Chosen Option : 1

Q.20 Tamil Nadu coast gets a large portion of its rain during \_\_\_\_\_ and \_\_\_\_\_.

- Ans  1. April and May  
 2. October and November  
 3. May and June  
 4. August and September

Question ID : 26433087879  
Status : Not Answered  
Chosen Option : --

Section : Part-C-Elementary Mathematics

Q.1 A and B can complete a work separately in 10 days and 15 days, respectively. B alone work for 3 days and then he left the work. In how many days will A finish the remaining work?

- Ans  1. 6  
 2. 9  
 3. 8  
 4. 7

Question ID : 26433081081  
Status : Answered  
Chosen Option : 3



Q.2 Find the product of the numbers whose HCF and LCM are 8 and 40 respectively.

- Ans
- 1. 240
  - 2. 300
  - 3. 320
  - 4. 360

Question ID : 264330116665  
Status : Answered  
Chosen Option : 3

Q.3 The difference between compound interest and simple interest is ₹228 for a certain sum of money at 8% per annum for  $1\frac{1}{2}$  years, when compound interest is compounded half-yearly and simple interest is computed yearly. What is the sum?

- Ans
- 1. ₹46,900
  - 2. ₹46,531
  - 3. ₹47,000
  - 4. ₹46,875

Question ID : 26433090258  
Status : Not Answered  
Chosen Option : --

Q.4 John borrowed some amount of money from a bank at the rate of 10% per annum on compound interest for which interest is compounded annually. If he repaid his loan by paying ₹21,961.50 at the end of 4 years, what is the amount he borrowed?

- Ans
- 1. ₹17,000
  - 2. ₹15,000
  - 3. ₹16,000
  - 4. ₹14,000

Question ID : 26433071233  
Status : Not Answered  
Chosen Option : --

Q.5 A bus travels from station P to station Q at a speed of 70 km/h, and from station Q to station P at a speed of 90 km/h. What is the average speed of the bus during the entire journey?

- Ans
- 1. 75.78 km/h
  - 2. 78.75 km/h
  - 3. 80.25 km/h
  - 4. 82.35 km/h

Question ID : 26433080375  
Status : Answered  
Chosen Option : 2

Q.6 Sonal and Arjun together can finish a piece of work in 57 days, Arjun and Rohan in 38 days, and Rohan and Sonal in 38 days, then Sonal, Arjun, and Rohan together can finish the same work in how many days?

- Ans
- 1. 31.5 days
  - 2. 28.5 days
  - 3. 26.5 days
  - 4. 24.5 days

Question ID : 264330116874  
Status : Answered  
Chosen Option : 2

Q.7 On selling a table fan at Rs.2,827.06, the value of gain is 14% more than the value of loss incurred on selling it at Rs.2,230. In order to gain 14%, the selling price will be:

- Ans
- 1. Rs.3,045
  - 2. Rs.2,890
  - 3. Rs.2,860.26
  - 4. Rs.2,844.50

Question ID : 26433074923  
Status : Not Answered  
Chosen Option : --

Q.8 The ratio between the fourth proportional of 7, 5 and 3 to the third proportional of 7 and 13 is:

- Ans
- 1. 75 : 448
  - 2. 15 : 169
  - 3. 21 : 25
  - 4. 25 : 21

Question ID : 26433079943  
Status : Answered  
Chosen Option : 2

Q.9 A cylindrical tank has a capacity of  $5632 \text{ m}^3$ . If the diameter of its base is 16 m, find its depth.

- Ans
- 1. 28 m
  - 2. 32 m
  - 3. 30 m
  - 4. 34 m

Question ID : 26433079807  
Status : Answered  
Chosen Option : 1

Q.10 A shopkeeper sells goods at a profit of 12% and uses a weight which is 15% less than the original weight. Find his total percentage gain. (Correct to 2 decimal places)

- Ans  1. 31.76%  
 2. 30.24%  
 3. 28.75%  
 4. 25.80%

Question ID : 26433080164  
Status : Answered  
Chosen Option : 1

Q.11 If  $A : B = 5 : 6$  and  $B : C = 6 : 7$ , then  $(A + B) : (B + C) : (C + A)$  is:

- Ans  1. 12 : 13 : 11  
 2. 11 : 13 : 12  
 3. 11 : 12 : 13  
 4. 13 : 11 : 12

Question ID : 26433074990  
Status : Answered  
Chosen Option : 2

Q.12 The LCM of two numbers is 15 times their HCF. The sum of the LCM and the HCF is 112. If one of the numbers is 49, then the other number is:

- Ans  1. 18  
 2. 21  
 3. 24  
 4. 15

Question ID : 26433079829  
Status : Answered  
Chosen Option : 4

Q.13 In a circular race of 400 m in length, A and B start at speeds of 10 m/s and 16 m/s, respectively, at the same time from the same point. After how much time will they meet for the first time at the starting point when running in the same direction?

- Ans  1. 180 s  
 2. 200 s  
 3. 240 s  
 4. 220 s

Question ID : 26433074968  
Status : Not Answered  
Chosen Option : --

Q.14 What is the length of the longest pole that can be placed in a room of dimensions 10 m × 10 m × 5 m?

- Ans  1. 20 m  
 2. 25 m  
 3. 15 m  
 4. 10 m

Question ID : 26433066369  
Status : Answered  
Chosen Option : 3

Q.15 A clothing store announced a discount of 30 percent on shirts. Rivaan wanted to save Rs. 810 in discount. How many shirts should he buy to do so, if marked price of each shirt is Rs. 540?

- Ans  1. 6  
 2. 5  
 3. 4  
 4. 8

Question ID : 264330116759  
Status : Answered  
Chosen Option : 2

Q.16 A train 120 m long passes a bridge in 18 seconds moving at a speed of 60 km/h. Find out the length of the bridge.

- Ans  1. 150 m  
 2. 160 m  
 3. 170 m  
 4. 180 m

Question ID : 26433075415  
Status : Answered  
Chosen Option : 4

Q.17 A dealer marks his goods 15% above the cost price. Then he allows 20% discount on it. What will be his loss percentage?

- Ans  1. 7%  
 2. 8%  
 3. 5%  
 4. 6%

Question ID : 26433082970  
Status : Answered  
Chosen Option : 2

Q.18 Number 350 is increased by 20% and then decreased by 25%. Find the new number.

- Ans
- 1. 320
  - 2. 3244
  - 3. 340
  - 4. 315

Question ID : 26433080004  
Status : Answered  
Chosen Option : 4

Q.19 The average cost of 10 items is Rs.89. If one item costs Rs.35, then find the average cost of remaining 9 items (in Rs.).

- Ans
- 1. 90
  - 2. 95
  - 3. 85
  - 4. 80

Question ID : 26433075717  
Status : Answered  
Chosen Option : 2

Q.20 Due to illness the weight of a person has reduced from 80 kg to 64 kg in a month. The percent decrease in the weight of the person is:

- Ans
- 1. 16 percent
  - 2. 14 percent
  - 3. 24 percent
  - 4. 20 percent

Question ID : 264330116794  
Status : Answered  
Chosen Option : 4

Section : Part-D-English

Q.1 Select the most appropriate meaning of the given idiom.  
Bed of roses

- Ans
- 1. As one wishes
  - 2. Be bound to obey
  - 3. A pleasant condition of life
  - 4. With all of one's belonging

Question ID : 26433084689  
Status : Answered  
Chosen Option : 3



Q.2 Select the most appropriate meaning of the given idiom.

Bag and baggage

- Ans
- 1. Lots of bags
  - 2. To make a beginning
  - 3. Close friends
  - 4. With all belongings

Question ID : 26433072538  
Status : Not Answered  
Chosen Option : --

Q.3 Select the most appropriate option to fill in the blank.

Alas! The forest turned into a \_\_\_\_\_ land.

- Ans
- 1. bare
  - 2. beer
  - 3. bear
  - 4. buyer

Question ID : 26433090391  
Status : Not Answered  
Chosen Option : --

Q.4 Select the most appropriate option that can substitute the underlined segment in the given sentence. If there is no need to substitute it, select 'No substitution'.

The turtle can live in water as well as land.

- Ans
- 1. No substitution
  - 2. and also land
  - 3. also on land
  - 4. as well as on land.

Question ID : 26433093077  
Status : Answered  
Chosen Option : 4

Q.5 Select the most appropriate option that can substitute the underlined segment in the given sentence.

Baldness is quite very usual among youngsters these days.

- Ans
- 1. happening very surely
  - 2. having very certain
  - 3. getting very common
  - 4. hitting very severely

Question ID : 26433088503  
Status : Not Answered  
Chosen Option : --

**Q.6** Select the most appropriate synonym of the given word.  
Conceal

- Ans
- 1. Manifest
  - 2. Disclose
  - 3. Confess
  - 4. Hide

Question ID : 26433084681  
Status : Answered  
Chosen Option : 4

**Q.7** Select the most appropriate ANTONYM to substitute the underlined word in the given sentence.

Her lively demeanour makes her the ideal choice for this job.

- Ans
- 1. dreamy
  - 2. slimy
  - 3. grainy
  - 4. gloomy

Question ID : 26433074010  
Status : Answered  
Chosen Option : 1

**Q.8** Select the most appropriate ANTONYM of the given word.

Cruel

- Ans
- 1. Trunk
  - 2. Brutal
  - 3. Kind
  - 4. Savage

Question ID : 26433086374  
Status : Answered  
Chosen Option : 3

**Q.9** Select the INCORRECTLY spelt word.

- Ans
- 1. Dribbling
  - 2. Slice
  - 3. Temperament
  - 4. Solvant

Question ID : 26433073501  
Status : Answered  
Chosen Option : 3

Q.10 Select the most appropriate ANTONYM of the given word.

Steadfast

- Ans  1. Dishonest  
 2. Unwavering  
 3. Immobile  
 4. Dependable

Question ID : 26433072216  
Status : Not Answered  
Chosen Option : --

Q.11 Select the most appropriate option to fill in the blanks and make the sentence meaningful.

They were not \_\_\_\_\_ to eat during the \_\_\_\_\_.

- Ans  1. allowed; brake  
 2. aloud; break  
 3. allowed; break  
 4. aloud; brake

Question ID : 26433092101  
Status : Marked For Review  
Chosen Option : 3

Q.12 Select the option that can be used as a one-word substitute for the given group of words.

The possible results of an action

- Ans  1. Implementation  
 2. Decision  
 3. Ramification  
 4. Causation

Question ID : 26433089380  
Status : Not Answered  
Chosen Option : --

Q.13 Select the most appropriate synonym of the given word.

Bankrupt

- Ans  1. Well-off  
 2. Invert  
 3. Insolvent  
 4. Careless

Question ID : 26433072187  
Status : Not Answered  
Chosen Option : --

Q.14 Select the INCORRECTLY spelt word.

- Ans
- 1. Ignorance
  - 2. Misspell
  - 3. Harass
  - 4. Occassion

Question ID : 26433073738  
Status : Answered  
Chosen Option : 3

Q.15 The following sentence has been split into four segments. Identify the segment that contains an error.

Nandu will / leave for the airport / as soon as / a taxi arrive.

- Ans
- 1. a taxi arrive
  - 2. leave for the airport
  - 3. Nandu will
  - 4. as soon as

Question ID : 26433099601  
Status : Answered  
Chosen Option : 1

**Comprehension:**

In the following passage, some words have been deleted. Read the passage carefully and select the most appropriate option to fill in each blank.

A natural gas barrier in the upper atmosphere called the ozone layer (1.) \_\_\_\_\_ people and other living things from the sun's harmful ultraviolet (UV) radiation. Ozone exists in tiny concentrations (2.) \_\_\_\_\_ the atmosphere, but the majority (about 90%) is found in the stratosphere, a layer that is 10 to 50 kilometres (3.) \_\_\_\_\_ the surface of Earth. The ozone layer is essential to life on Earth because it (4.) \_\_\_\_\_ out the majority of the sun's harmful UV rays. In the 1970s, researchers (5.) \_\_\_\_\_ that the ozone layer was thinning.

SubQuestion No : 16

Q.16 Select the most appropriate option to fill in blank number 1.

- Ans
- 1. attracts
  - 2. flourishes
  - 3. discovers
  - 4. shields

Question ID : 26433089803  
Status : Answered  
Chosen Option : 4

**Comprehension:**

In the following passage, some words have been deleted. Read the passage carefully and select the most appropriate option to fill in each blank.

A natural gas barrier in the upper atmosphere called the ozone layer (1.) \_\_\_\_\_ people and other living things from the sun's harmful ultraviolet (UV) radiation. Ozone exists in tiny concentrations (2.) \_\_\_\_\_ the atmosphere, but the majority (about 90%) is found in the stratosphere, a layer that is 10 to 50 kilometres (3.) \_\_\_\_\_ the surface of Earth. The ozone layer is essential to life on Earth because it (4.) \_\_\_\_\_ out the majority of the sun's harmful UV rays. In the 1970s, researchers (5.) \_\_\_\_\_ that the ozone layer was thinning.

**SubQuestion No : 17**

**Q.17** Select the most appropriate option to fill in blank number 2.

- Ans  1. below  
 2. in  
 3. throughout  
 4. under

Question ID : 26433089804  
Status : Answered  
Chosen Option : 2

**Comprehension:**

In the following passage, some words have been deleted. Read the passage carefully and select the most appropriate option to fill in each blank.

A natural gas barrier in the upper atmosphere called the ozone layer (1.) \_\_\_\_\_ people and other living things from the sun's harmful ultraviolet (UV) radiation. Ozone exists in tiny concentrations (2.) \_\_\_\_\_ the atmosphere, but the majority (about 90%) is found in the stratosphere, a layer that is 10 to 50 kilometres (3.) \_\_\_\_\_ the surface of Earth. The ozone layer is essential to life on Earth because it (4.) \_\_\_\_\_ out the majority of the sun's harmful UV rays. In the 1970s, researchers (5.) \_\_\_\_\_ that the ozone layer was thinning.

**SubQuestion No : 18**

**Q.18** Select the most appropriate option to fill in blank number 3.

- Ans  1. into  
 2. onto  
 3. above  
 4. at

Question ID : 26433089805  
Status : Answered  
Chosen Option : 3



**Comprehension:**

In the following passage, some words have been deleted. Read the passage carefully and select the most appropriate option to fill in each blank.

A natural gas barrier in the upper atmosphere called the ozone layer (1.) \_\_\_\_\_ people and other living things from the sun's harmful ultraviolet (UV) radiation. Ozone exists in tiny concentrations (2.) \_\_\_\_\_ the atmosphere, but the majority (about 90%) is found in the stratosphere, a layer that is 10 to 50 kilometres (3.) \_\_\_\_\_ the surface of Earth. The ozone layer is essential to life on Earth because it (4.) \_\_\_\_\_ out the majority of the sun's harmful UV rays. In the 1970s, researchers (5.) \_\_\_\_\_ that the ozone layer was thinning.

**SubQuestion No : 19**

**Q.19** Select the most appropriate option to fill in blank number 4.

- Ans
- 1. blames
  - 2. builds
  - 3. brims
  - 4. blocks

Question ID : 26433089806

Status : Answered

Chosen Option : 4

**Comprehension:**

In the following passage, some words have been deleted. Read the passage carefully and select the most appropriate option to fill in each blank.

A natural gas barrier in the upper atmosphere called the ozone layer (1.) \_\_\_\_\_ people and other living things from the sun's harmful ultraviolet (UV) radiation. Ozone exists in tiny concentrations (2.) \_\_\_\_\_ the atmosphere, but the majority (about 90%) is found in the stratosphere, a layer that is 10 to 50 kilometres (3.) \_\_\_\_\_ the surface of Earth. The ozone layer is essential to life on Earth because it (4.) \_\_\_\_\_ out the majority of the sun's harmful UV rays. In the 1970s, researchers (5.) \_\_\_\_\_ that the ozone layer was thinning.

**SubQuestion No : 20**

**Q.20** Select the most appropriate option to fill in blank number 5.

- Ans
- 1. learning
  - 2. learns
  - 3. learnt
  - 4. learn

Question ID : 26433089807

Status : Answered

Chosen Option : 3

Section : Part-D-Hindi

**Q.1** निम्नलिखित मुहावरे के लिय उपयुक्त सार्थक शब्द है-  
नानी याद आना

- Ans
- 1. नानी को याद करना
  - 2. छुप कर बैठ जाना
  - 3. मुसीबत देखकर घबरा जाना
  - 4. किसी से मिलने का मन करना

Question ID : 26433065776

Status : Not Answered

Chosen Option : --

Q.2 'समुद्र की सीमा अनंत है।' वाक्य में प्रयुक्त 'अनंत' शब्द का विलोम शब्द बताइए -

- Ans
- 1. अंतहीन
  - 2. अंत
  - 3. अनंग
  - 4. असीमित

Question ID : 26433069745  
Status : Not Answered  
Chosen Option : --

Q.3 निम्नलिखित में से अव्यय से बना विशेषण शब्द नहीं है -

- Ans
- 1. अगला
  - 2. बाहरी
  - 3. पिछला
  - 4. कैसा

Question ID : 26433085056  
Status : Not Answered  
Chosen Option : --

Q.4 'आज विद्यालय में शिक्षिका ने अंताक्षरी खेलने को कहा।' वाक्य में अशुद्ध वर्तनी वाला शब्द है -

- Ans
- 1. शिक्षिका
  - 2. विद्यालय
  - 3. खेलने को कहा
  - 4. अंताक्षरी

Question ID : 26433069698  
Status : Not Answered  
Chosen Option : --

Q.5 मूल क्रिया, प्रथम प्रेरणार्थक क्रिया और द्वितीय प्रेरणार्थक क्रिया का सही शब्द-क्रम चुनिए।

- Ans
- 1. बजवाना - बजना - बजाना
  - 2. कराना - करना - करावाना
  - 3. उठना - उठाना - उठवाना
  - 4. सुनना - सुनवाना - सुनाना

Question ID : 26433063044  
Status : Not Answered  
Chosen Option : --

Q.6 'दोपहर \_\_\_\_\_'

उपर्युक्त वाक्य में रिक्त स्थान का उपयुक्त विकल्प निम्न में से क्या होगा?

- Ans
- 1. का अर्थ होता है दो पहरों का संग्राम
  - 2. का अर्थ होता है दो पहरों का कदाचार
  - 3. का अर्थ होता है दो पहरों का समाहार
  - 4. का अर्थ होता है दो पहरों का अनाचार

Question ID : 26433067041  
Status : Not Answered  
Chosen Option : --

Q.7 'जिसका खण्डन न हो सके' वाक्यांश के लिए उचित शब्द बताइए -

- Ans
- 1. खंडित
  - 2. खण्डनीय
  - 3. अखण्डनीय
  - 4. समूल

Question ID : 26433065906  
Status : Not Answered  
Chosen Option : --

Q.8 रेखांकित शब्द-समूह के लिए सर्वाधिक उपयुक्त विकल्प चुनें।  
मुसीबत का मारा वह किसी और स्थान पर जा बसा।

- Ans
- 1. तत्र
  - 2. अन्यत्र
  - 3. सर्वत्र
  - 4. अत्र

Question ID : 26433062287  
Status : Not Answered  
Chosen Option : --

Q.9 इस जल में अनेक जीव हैं।

रेखांकित शब्द के विलोम शब्द का चयन कीजिए।

- Ans
- 1. सलिल
  - 2. तालाब
  - 3. थल
  - 4. स्थान

Question ID : 26433079643  
Status : Not Answered  
Chosen Option : --

Q.10 दो घोड़ों पर सवार होने से तुम सफल नहीं रहोगे।  
उपरोक्त वाक्य में रेखांकित अंश के लिए कौन - सा शब्द उपयुक्त होगा?

- Ans
- 1. त्रिरंगी नीति
  - 2. दुरंगी नीति
  - 3. सवारी नीति
  - 4. सफल नीति

Question ID : 26433063059  
Status : Not Answered  
Chosen Option : --

Q.11 ऊँट के मुँह में जीरा' मुहावरे का सही अर्थ है -

- Ans
- 1. अधिक खाने वाले को कम देना
  - 2. ऊँट को जीरा खिलाना
  - 3. खाने में जीरा डालना
  - 4. मित्रता करना

Question ID : 26433065923  
Status : Not Answered  
Chosen Option : --

Q.12 निम्नलिखित वाक्य में से अशुद्धि पहचानें-  
वह आया परंतु मैं नहीं गया।

- Ans
- 1. आया
  - 2. गया
  - 3. परंतु
  - 4. वह

Question ID : 26433066827  
Status : Not Answered  
Chosen Option : --

Q.13 निम्नलिखित वाक्यांश के लिए उपयुक्त शब्द का चयन विकल्पों में से कीजिए।  
जिसने चित्त किसी विषय में दिया (लगाया) है

- Ans
- 1. दत्तचित्त
  - 2. विषयचित्त
  - 3. अग्रसोची
  - 4. अग्रगामी

Question ID : 26433069997  
Status : Not Answered  
Chosen Option : --

Q.14 हिमालय भारत का ताज है।

रेखांकित शब्द के उचित पर्यायवाची शब्द का चयन कीजिए।

- Ans
- 1. प्रभा
  - 2. गिरिराज
  - 3. मदन
  - 4. आसव

Question ID : 26433079626  
Status : Not Answered  
Chosen Option : --

Q.15 'आकलन' शब्द के लिए इनमें से उपयुक्त पर्यायवाची शब्द कौन-सा है?

- Ans
- 1. अगणन
  - 2. गणना
  - 3. शरण
  - 4. नूतन

Question ID : 26433066893  
Status : Not Answered  
Chosen Option : --

**Comprehension:**

निम्न गद्यांश में से कुछ शब्दों को हटा दिया गया है। गद्यांश के नीचे पूछे गए प्रश्नों में इन रिक्त स्थानों के लिए उपयुक्त शब्द का चयन विकल्पों में से कीजिए।

राष्ट्र के 1. \_\_\_\_\_ विकास के लिए चरित्र निर्माण परम आवश्यक है। जिस प्रकार वर्तमान में भौतिक निर्माण का कार्य अनेक योजनाओं के माध्यम से तीव्र गति के साथ सम्पन्न हो रहा है, वैसे ही वर्तमान की सबसे बड़ी आवश्यकता यह है कि देशवासियों के चरित्र निर्माण के लिए भी प्रयत्न किया जाए। उत्तम चरित्रवान व्यक्ति ही 2. \_\_\_\_\_ की सर्वोच्च संपदा है। जनतंत्र के लिए तो यह एक महान 3. \_\_\_\_\_ योजना है। जन-समाज में राष्ट्र, संस्कृति, 4. \_\_\_\_\_ एवं परिवार के प्रति हमारा क्या कर्तव्य है इसका पूर्ण रूप से बोध कराना एवं राष्ट्र में व्याप्त समग्र भ्रष्टाचार के प्रति निषेधात्मक वातावरण का निर्माण करना ही चरित्र निर्माण का प्रथम 5. \_\_\_\_\_ है।

SubQuestion No : 16

Q.16 रिक्त स्थान 1 के लिए सर्वाधिक उपयुक्त शब्द इनमें से क्या होगा?

- Ans
- 1. सभी
  - 2. पूरे
  - 3. अधिक
  - 4. सर्वांगीण

Question ID : 26433072588  
Status : Not Answered  
Chosen Option : --



**Comprehension:**

निम्न गद्यांश में से कुछ शब्दों को हटा दिया गया है। गद्यांश के नीचे पूछे गए प्रश्नों में इन रिक्त स्थानों के लिए उपयुक्त शब्द का चयन विकल्पों में से कीजिए।

राष्ट्र के 1. \_\_\_\_\_ विकास के लिए चरित्र निर्माण परम आवश्यक है। जिस प्रकार वर्तमान में भौतिक निर्माण का कार्य अनेक योजनाओं के माध्यम से तीव्र गति के साथ सम्पन्न हो रहा है, वैसे ही वर्तमान की सबसे बड़ी आवश्यकता यह है कि देशवासियों के चरित्र निर्माण के लिए भी प्रयत्न किया जाए। उत्तम चरित्रवान व्यक्ति ही 2. \_\_\_\_\_ की सर्वोच्च संपदा है। जनतंत्र के लिए तो यह एक महान 3. \_\_\_\_\_ योजना है। जन-समाज में राष्ट्र, संस्कृति, 4. \_\_\_\_\_ एवं परिवार के प्रति हमारा क्या कर्तव्य है इसका पूर्ण रूप से बोध कराना एवं राष्ट्र में व्याप्त समग्र भ्रष्टाचार के प्रति निषेधात्मक वातावरण का निर्माण करना ही चरित्र निर्माण का प्रथम 5. \_\_\_\_\_ है।

**SubQuestion No : 17**

Q.17 रिक्त स्थान 2 के लिए सर्वाधिक उपयुक्त शब्द इनमें से क्या होगा?

- Ans
- 1. राज्य
  - 2. मोहल्ले
  - 3. राष्ट्र
  - 4. प्रदेश

Question ID : 26433072589

Status : Not Answered

Chosen Option : --

**Comprehension:**

निम्न गद्यांश में से कुछ शब्दों को हटा दिया गया है। गद्यांश के नीचे पूछे गए प्रश्नों में इन रिक्त स्थानों के लिए उपयुक्त शब्द का चयन विकल्पों में से कीजिए।

राष्ट्र के 1. \_\_\_\_\_ विकास के लिए चरित्र निर्माण परम आवश्यक है। जिस प्रकार वर्तमान में भौतिक निर्माण का कार्य अनेक योजनाओं के माध्यम से तीव्र गति के साथ सम्पन्न हो रहा है, वैसे ही वर्तमान की सबसे बड़ी आवश्यकता यह है कि देशवासियों के चरित्र निर्माण के लिए भी प्रयत्न किया जाए। उत्तम चरित्रवान व्यक्ति ही 2. \_\_\_\_\_ की सर्वोच्च संपदा है। जनतंत्र के लिए तो यह एक महान 3. \_\_\_\_\_ योजना है। जन-समाज में राष्ट्र, संस्कृति, 4. \_\_\_\_\_ एवं परिवार के प्रति हमारा क्या कर्तव्य है इसका पूर्ण रूप से बोध कराना एवं राष्ट्र में व्याप्त समग्र भ्रष्टाचार के प्रति निषेधात्मक वातावरण का निर्माण करना ही चरित्र निर्माण का प्रथम 5. \_\_\_\_\_ है।

**SubQuestion No : 18**

Q.18 रिक्त स्थान 3 के लिए सर्वाधिक उपयुक्त शब्द इनमें से क्या होगा?

- Ans
- 1. हितकारी
  - 2. लाभकारी
  - 3. कल्याणकारी
  - 4. मनोहारी

Question ID : 26433072590

Status : Not Answered

Chosen Option : --

**Comprehension:**

निम्न गद्यांश में से कुछ शब्दों को हटा दिया गया है। गद्यांश के नीचे पूछे गए प्रश्नों में इन रिक्त स्थानों के लिए उपयुक्त शब्द का चयन विकल्पों में से कीजिए।

राष्ट्र के 1. \_\_\_\_\_ विकास के लिए चरित्र निर्माण परम आवश्यक है। जिस प्रकार वर्तमान में भौतिक निर्माण का कार्य अनेक योजनाओं के माध्यम से तीव्र गति के साथ सम्पन्न हो रहा है, वैसे ही वर्तमान की सबसे बड़ी आवश्यकता यह है कि देशवासियों के चरित्र निर्माण के लिए भी प्रयत्न किया जाए। उत्तम चरित्रवान व्यक्ति ही 2. \_\_\_\_\_ की सर्वोच्च संपदा है। जनतंत्र के लिए तो यह एक महान 3. \_\_\_\_\_ योजना है। जन-समाज में राष्ट्र, संस्कृति, 4. \_\_\_\_\_ एवं परिवार के प्रति हमारा क्या कर्तव्य है इसका पूर्ण रूप से बोध कराना एवं राष्ट्र में व्याप्त समग्र भ्रष्टाचार के प्रति निषेधात्मक वातावरण का निर्माण करना ही चरित्र निर्माण का प्रथम 5. \_\_\_\_\_ है।

**SubQuestion No : 19****Q.19 रिक्त स्थान 4 के लिए सर्वाधिक उपयुक्त शब्द इनमें से क्या होगा?**

- Ans
- 1. राज्य
  - 2. लोग
  - 3. राष्ट्र
  - 4. समाज

**Question ID : 26433072591****Status : Not Answered**

Chosen Option : --

**Comprehension:**

निम्न गद्यांश में से कुछ शब्दों को हटा दिया गया है। गद्यांश के नीचे पूछे गए प्रश्नों में इन रिक्त स्थानों के लिए उपयुक्त शब्द का चयन विकल्पों में से कीजिए।

राष्ट्र के 1. \_\_\_\_\_ विकास के लिए चरित्र निर्माण परम आवश्यक है। जिस प्रकार वर्तमान में भौतिक निर्माण का कार्य अनेक योजनाओं के माध्यम से तीव्र गति के साथ सम्पन्न हो रहा है, वैसे ही वर्तमान की सबसे बड़ी आवश्यकता यह है कि देशवासियों के चरित्र निर्माण के लिए भी प्रयत्न किया जाए। उत्तम चरित्रवान व्यक्ति ही 2. \_\_\_\_\_ की सर्वोच्च संपदा है। जनतंत्र के लिए तो यह एक महान 3. \_\_\_\_\_ योजना है। जन-समाज में राष्ट्र, संस्कृति, 4. \_\_\_\_\_ एवं परिवार के प्रति हमारा क्या कर्तव्य है इसका पूर्ण रूप से बोध कराना एवं राष्ट्र में व्याप्त समग्र भ्रष्टाचार के प्रति निषेधात्मक वातावरण का निर्माण करना ही चरित्र निर्माण का प्रथम 5. \_\_\_\_\_ है।

**SubQuestion No : 20****Q.20 रिक्त स्थान 5 के लिए सर्वाधिक उपयुक्त शब्द इनमें से क्या होगा?**

- Ans
- 1. तरीका
  - 2. रास्ता
  - 3. सोपान
  - 4. कदम

**Question ID : 26433072592****Status : Not Answered**

Chosen Option : --

## Constable GD in CAPFs SSF Rifleman GD in Assam Rifles and Sepoy in NCB Examination 2022

Roll Number	
Candidate Name	
Venue Name	TCS Gito Bitan
Exam Date	10/01/2023
Exam Time	2:30 PM - 3:30 PM
Subject	Constable GD Examination 2022

### Section : Part-A-General Intelligence and Reasoning

**Q.1** In this question, three statements are given, followed by two conclusions numbered I and II. Assuming the statements to be true, even if they seem to be at variance with commonly known facts, decide which of the conclusions logically follows/follow from the statements.

**Statements:**

All fans are bulbs.

All bulbs are tube lights.

Some tube lights are new.

**Conclusions:**

I. All fans are new.

II. All tube lights are fans.

**Ans**  1. Only conclusion II follows.

2. Only conclusion I follows.

3. Neither conclusion I nor II follows.

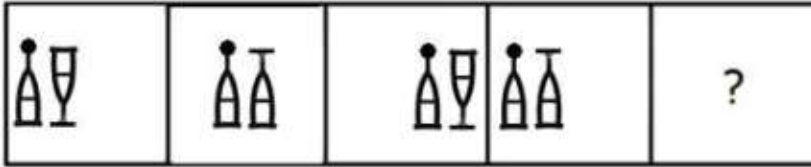
4. Both conclusions I and II follow.

Question ID : 26433070381

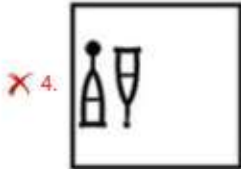
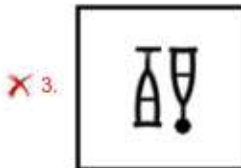
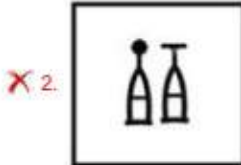
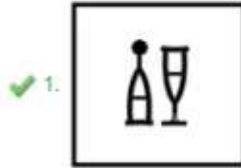
Status : Answered

Chosen Option : 3

Q.2 Select the figure that will come next in the following series.



Ans



Question ID : 26433079024  
Status : Answered  
Chosen Option : 1

Q.3 Select the option that is related to the fifth letter-cluster in the same way as the second letter-cluster is related to the first letter-cluster and the fourth letter-cluster is related to the third letter-cluster.

ROOT : QQTV :: STEM : VGUO :: LEAF : ?

Ans ✓ 1. GCNH

✗ 2. GCHN

✗ 3. GDNH

✗ 4. NGCH

Question ID : 26433057247  
Status : Answered  
Chosen Option : 1

Q.4 Which letter-cluster will replace the question mark (?) to complete the given series?  
AJRZ, DMTC, ?, JSXI, MVZL

Ans ✗ 1. GRVF

✗ 2. HRVF

✗ 3. HPVF

✓ 4. GPVF

Question ID : 26433067947  
Status : Answered  
Chosen Option : 1

Q.5 'A + B' means 'A is the son of B'  
'A - B' means 'A is the sister of B'  
'A × B' means 'A is the brother of B'  
'A ÷ B' means 'A is the wife of B'  
If  $A + B + C \times D - E + F$ , then which of the following statements is NOT correct?

- Ans
- 1. A is the grandson of F.
  - 2. A is the son of C.
  - 3. E is the brother of B.
  - 4. D is the daughter of F.

Question ID : 26433090050  
Status : Answered  
Chosen Option : 3

Q.6 In a certain code language, 'FINGER' is written as 'HHPIDT' and 'DESTINY' is written as 'FDUVHPA'. How will 'GRANTED' be written in that language?

- Ans
- 1. ITZPVDF
  - 2. HTZPVCE
  - 3. IQCMVDF
  - 4. HTC OVCE

Question ID : 26433081767  
Status : Answered  
Chosen Option : 3

Q.7 Which two signs should be interchanged to make the below equation mathematically correct?

$$136 \div 17 + 102 - 3 \times 2 = 187$$

- Ans
- 1. + and ×
  - 2. + and -
  - 3. × and -
  - 4. ÷ and -

Question ID : 264330117569  
Status : Answered  
Chosen Option : 4

Q.8 Seven people A, H, D, F, T, E, and G are sitting in a straight row, facing north. Only three people sit to the left of E. G and H are immediate neighbours of E. A sits at the extreme right of the row. D is the immediate neighbour of A. F sits second to the left of E. Who sits at the extreme left of the row?

- Ans
- 1. T
  - 2. D
  - 3. A
  - 4. F

Question ID : 26433095009  
Status : Answered  
Chosen Option : 1



Q.9 6 Friends F, U, K, S, M, and A, are sitting around a circular table facing the centre. A and S are immediate neighbours of K. F is sitting opposite to K. S is not a neighbour of F. M is an immediate neighbour of A and F. Who is the immediate neighbour of A and F if M and S exchange their positions?

- Ans
- 1. U
  - 2. K
  - 3. S
  - 4. M

Question ID : 26433068077  
Status : Not Answered  
Chosen Option : --

Q.10 In a certain code language, 'find a solution' is coded as '418', 'be attentive' is coded as '29' and 'answers are correct' is coded as '737'. How will 'check the question' be coded in that language?

- Ans
- 1. 835
  - 2. 427
  - 3. 538
  - 4. 649

Question ID : 26433067779  
Status : Answered  
Chosen Option : 3

Q.11 Select the set in which the numbers are related in the same way as are the numbers of the following set.

(NOTE : Operations should be performed on the whole numbers, without breaking down the numbers into its constituent digits. E.g. 13 – Operations on 13 such as adding /subtracting/multiplying etc. to 13 can be performed. Breaking down 13 into 1 and 3 and then performing mathematical operations on 1 and 3 is NOT allowed)  
(216, 12, 15)  
(432, 23, 31)

- Ans
- 1. (304, 14, 24)
  - 2. (380, 24, 18)
  - 3. (150, 11, 14)
  - 4. (484, 16, 32)

Question ID : 26433076475  
Status : Not Attempted and Marked For Review  
Chosen Option : --

Q.12 Which option represents the correct order of the given words as they would appear in the English dictionary?

- 1 Seminar
- 2 Semolina
- 3 Senior
- 4 September
- 5 Serious

- Ans
- 1. 5,4,3,2,1
  - 2. 1,3,4,2,5
  - 3. 1,2,3,4,5
  - 4. 5,3,4,1,2

Question ID : 26433069306  
Status : Answered  
Chosen Option : 3

Q.13 Which of the following numbers will replace the question mark (?) in the given series?  
3, 21, 147, ?, 7203

- Ans
- 1. 882
  - 2. 1323
  - 3. 1218
  - 4. 1029

Question ID : 26433092490  
Status : Answered  
Chosen Option : 4

Q.14 Select the option that is related to the third word in the same way as the second word is related to the first word.  
(The words must be considered as meaningful English words and must not be related to each other based on the number of letters/number of consonants/vowels in the word.)

Mumbai : Maharashtra :: Bhopal : ?

- Ans
- 1. Madhya Pradesh
  - 2. Delhi
  - 3. Uttar Pradesh
  - 4. Andhra Pradesh

Question ID : 26433087260  
Status : Answered  
Chosen Option : 1

Q.15 Select the number from among the given options that can replace the question mark (?) in the following series.  
213, 216, 225, 240, 261, ?

- Ans
- 1. 286
  - 2. 288
  - 3. 289
  - 4. 268

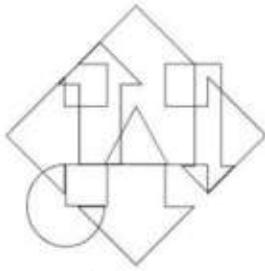
Question ID : 26433078921  
Status : Answered  
Chosen Option : 2

Q.16 Which of the following terms will replace the question mark (?) in the given series?  
LPKT, NNMR, PLOP, ?, THSL

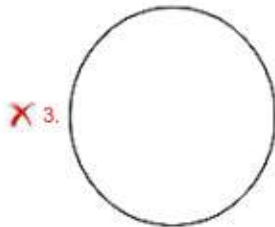
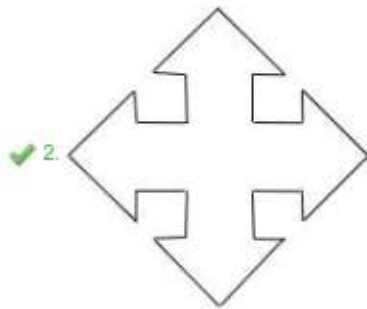
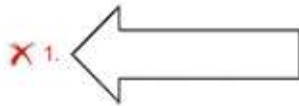
- Ans
- 1. RJQN
  - 2. SJQN
  - 3. SJQO
  - 4. RIQN

Question ID : 26433080688  
Status : Answered  
Chosen Option : 4

**Q.17** Select the option figure which is embedded in the given figure. (Rotation is NOT allowed)



**Ans**



Question ID : 26433085754  
 Status : Answered  
 Chosen Option : 2

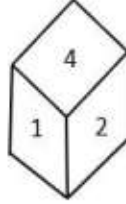
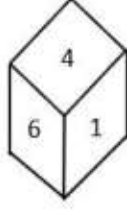
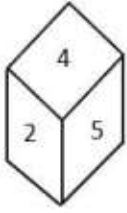
**Q.18** Select the correct combination of mathematical signs to replace the \* signs and balance the given equation.

$$89 * 5 * 15 * 32 * 8 * 18$$

- Ans**
- ✗ 1. + , + , - , × , =
  - ✗ 2. × , + , ÷ , - , =
  - ✗ 3. + , - , ÷ , × , =
  - ✓ 4. - , × , + , ÷ , =

Question ID : 26433085357  
 Status : Answered  
 Chosen Option : 4

**Q.19** Three different positions of the same dice are shown. Find the number on the face opposite the face showing '4'.

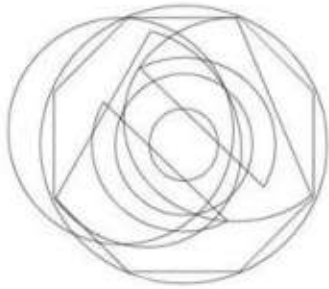


- Ans**
- 1. 2
  - 2. 3
  - 3. 5
  - 4. 1

Question ID : 26433090076  
Status : Answered  
Chosen Option : 2



**Q.20** Select the option figure which is embedded in the given figure. (Rotation is NOT allowed)



**Ans**

1.



2.



3.



4.



Question ID : 26433085752  
Status : Answered  
Chosen Option : 1

Section : **Part-B-General Knowledge and General awareness**

**Q.1** In the Indian Constitution 'the abolition of untouchability' provision is mentioned in \_\_\_\_\_.

**Ans**  1. Article 14

2. Article 17

3. Article 19

4. Article 32

Question ID : 26433090671  
Status : Answered  
Chosen Option : 2



**Q.2** What is the colour of the flame when magnesium burns in the presence of oxygen?

- Ans
- 1. Yellow
  - 2. Red
  - 3. White
  - 4. Green

Question ID : 26433087842  
Status : Answered  
Chosen Option : 4

**Q.3** Who among the following Gupta rulers was hailed as 'Indian Napoleon' because of his military achievements?

- Ans
- 1. Chandragupta I
  - 2. Chandragupta II
  - 3. Srigupta
  - 4. Samudragupta

Question ID : 264330115455  
Status : Answered  
Chosen Option : 4

**Q.4** E.Krishna Iyer is associated with which form of dance?

- Ans
- 1. Kathak
  - 2. Odissi
  - 3. Kuchipudi
  - 4. Bharatanatyam

Question ID : 26433086576  
Status : Answered  
Chosen Option : 4

**Q.5** In India, the population census is conducted once every \_\_\_\_\_.

- Ans
- 1. 5 years
  - 2. 12 years
  - 3. 10 years
  - 4. 15 years

Question ID : 264330116024  
Status : Answered  
Chosen Option : 3

**Q.6** Which of the following country is not a part of the Lusofonia Games?

- Ans
- 1. Portugal
  - 2. Germany
  - 3. India
  - 4. Macau

Question ID : 264330115941  
Status : Answered  
Chosen Option : 3

Q.7 Radio broadcasting started in India in 1923 by the \_\_\_\_\_.

- Ans  1. Radio Club of Bombay  
 2. Lions Club of Bombay  
 3. Rotary Club of Bombay  
 4. Rotaract Club Of Bombay

Question ID : 264330115603  
Status : Answered  
Chosen Option : 1

Q.8 Which Article of the Constitution of India talks about Superintendence, direction and control of elections?

- Ans  1. Article 324  
 2. Article 333  
 3. Article 356  
 4. Article 367

Question ID : 26433074899  
Status : Answered  
Chosen Option : 1

Q.9 As of November 2022, who among the following is the Lieutenant Governor of Delhi, India?

- Ans  1. Anil Bajjal  
 2. Vinai Kumar Saxena  
 3. Arvind Kejriwal  
 4. Manoj Sinha

Question ID : 264330114937  
Status : Answered  
Chosen Option : 2

Q.10 While computing the national income, \_\_\_\_\_ is taken as a factor.

- Ans  1. Chemical used  
 2. Electricity bill  
 3. Export  
 4. Road construction

Question ID : 264330115356  
Status : Answered  
Chosen Option : 3

Q.11 Which among the following festival marks the menstruation period of the Goddess Kamakhya in Assam?

- Ans  1. Moatsu  
 2. Chapchar Kut  
 3. Wangala  
 4. Ambubachi Mela

Question ID : 264330115113  
Status : Answered  
Chosen Option : 4

Q.12 The \_\_\_\_\_ industry covers a wide range of products from transistor sets to television.

- Ans
- 1. fertilizer
  - 2. canal irrigation
  - 3. electronics
  - 4. jute processing

Question ID : 264330115401  
Status : Answered  
Chosen Option : 3

Q.13 Three of the following four are examples of Coelenterata phylum, and therefore form a group. Which is the one that does not belong to that group?

- Ans
- 1. Sea-pen
  - 2. Liver fluke
  - 3. Brain coral
  - 4. Sea anemone

Question ID : 264330115186  
Status : Not Answered  
Chosen Option : --

Q.14 \_\_\_\_\_ launched on 25th June 2015 , intends to provide housing for all in urban areas by year 2022.

- Ans
- 1. O-SMART Scheme
  - 2. Pradhan Mantri Garib Kalyan Anna Yojana
  - 3. Pradhan Mantri Awas Yojana (Urban)
  - 4. Global Housing Technology Challenge

Question ID : 264330116161  
Status : Answered  
Chosen Option : 3

Q.15 In which of the following places was the Indian Grand Prix-4 held in June 2021?

- Ans
- 1. Ludhiana
  - 2. Patiala
  - 3. Amritsar
  - 4. Jalandhar

Question ID : 26433072892  
Status : Not Answered  
Chosen Option : --

Q.16 A \_\_\_\_\_ is a barrier across flowing water that obstructs, directs or retards the flow, often creating a reservoir, lake or impoundment.

- Ans
- 1. meander
  - 2. dam
  - 3. tributary
  - 4. moat

Question ID : 26433092218  
Status : Answered  
Chosen Option : 2

Q.17 Who won the Sangeet Natak Akademi Award in Bharatnatyam in 2018?

- Ans
- 1. Madambi Subramanian Namboodiri
  - 2. Radha Sridhar
  - 3. Pasumurthy Ramalinga Sastry
  - 4. Akham Lakshmi Devi

Question ID : 264330115815  
Status : Not Answered  
Chosen Option : --

Q.18 Which Union Minister launched the India water pitch-pilot-scale start-up challenge in March 2022?

- Ans
- 1. Kaushal Kishore
  - 2. D Thara
  - 3. Manoj Joshi
  - 4. Hardeep Singh Puri

Question ID : 26433081828  
Status : Answered  
Chosen Option : 3

Q.19 Swami Dayanand Saraswati founded the \_\_\_\_\_, an organisation that attempted to reform Hinduism.

- Ans
- 1. Arya Samaj
  - 2. Adi Hindu Samaj
  - 3. Vedant Samaj
  - 4. Adi Dharam Samaj

Question ID : 264330103802  
Status : Answered  
Chosen Option : 1

Q.20 As per RBI, in India, services sector accounted for \_\_\_\_\_ of the GDP in the 1980s.

- Ans
- 1. 58.6 per cent
  - 2. 38.6 per cent
  - 3. 18.6 per cent
  - 4. 78.6 per cent

Question ID : 264330116114  
Status : Answered  
Chosen Option : 1

Section : Part-C-Elementary Mathematics

Q.1 The value of an article depreciated from ₹18,000 to ₹14,580 in 2 years. Find the yearly rate of depreciation in the value of the article.

- Ans
- 1. 10%
  - 2. 12%
  - 3. 9%
  - 4. 8%

Question ID : 26433082406  
Status : Not Answered  
Chosen Option : --

**Q.2** Ramu and Mohan can separately complete a work in 10 hours and 16 hours, respectively. After working for 2 hours together, Mohan leaves the work. In how many hours will Ramu finish the remaining work?

Ans

1.  $6\frac{1}{4}$

2.  $6\frac{3}{4}$

3.  $5\frac{3}{4}$

4.  $7\frac{3}{4}$

Question ID : 26433075573

Status : Not Answered

Chosen Option : --

**Q.3** A car covers a certain distance in 3 h with a speed of 108 km/h. If the speed is reduced by 27 km/h, then the time taken by the car to cover the same distance will be:

Ans

1.  $2\frac{1}{2}$  h

2. 2 h

3.  $3\frac{1}{2}$  h

4. 4 h

Question ID : 26433087375

Status : Answered

Chosen Option : 4

**Q.4** Rahul travels a certain distance at a speed of 4 km/h and returns at a speed of 3 km/h via same route. What was his average speed for the entire journey (correct to 2 decimal places)?

Ans

1. 3.43 km/h

2. 5.92 km/h

3. 1.23 km/h

4. 2.5 km/h

Question ID : 26433065293

Status : Not Answered

Chosen Option : --

**Q.5** Rohan divides his complete journey in three equal parts and covers the first part at a speed of 30 km/h, the second part at 40 km/h and the last part at 50 km/h with his car. What is the average speed (in km/h) of his car during his entire journey?

Ans

1.  $38\frac{14}{47}$

2.  $35\frac{14}{47}$

3. 40

4. 45

Question ID : 26433075541

Status : Not Answered

Chosen Option : --



Q.6 A can do a piece of work in 8 days and B in 24 days. They begin together, but 4 days before the completion of the work, A leaves. Find the number of days taken by A and B to complete the entire work.

- Ans
- 1. 11 days
  - 2. 8 days
  - 3. 9 days
  - 4. 7 days

Question ID : 264330116845  
Status : Answered  
Chosen Option : 2

Q.7 A thief started his journey at a speed of 60 km/h. After 30 minutes, police started from the same place but at a speed of 80 km/h. How much time (in hours) will the police take to catch the thief?

- Ans
- 1.  $\frac{3}{2}$  hours
  - 2.  $\frac{1}{2}$  hours
  - 3.  $\frac{1}{3}$  hours
  - 4.  $\frac{5}{2}$  hours

Question ID : 26433081044  
Status : Answered  
Chosen Option : 1

Q.8 What is the difference between the compound interest on Rs.5,750 for one year at 16% per annum compounded yearly and compounded half-yearly?

- Ans
- 1. Rs.49.76
  - 2. Rs.36.80
  - 3. Rs.29.50
  - 4. Rs.32.58

Question ID : 26433064989  
Status : Not Answered  
Chosen Option : --

Q.9 Evaluate the following expression.

$$\left[\frac{-4}{7} \div \frac{1}{12}\right] \div \left[-\frac{4}{5} \times \{(-2) - (-\frac{2}{7})\}\right]$$

- Ans
- 1. -5
  - 2.  $-\frac{1}{5}$
  - 3.  $\frac{1}{5}$
  - 4. 5

Question ID : 26433090248  
Status : Answered  
Chosen Option : 1

**Q.10** The volumes of two cones are in the ratio of 3 : 2 and their radii are in the ratio 3 : 4. The ratio of their heights is:

- Ans  1. 8:3  
 2. 9:4  
 3. 4:9  
 4. 2:1

Question ID : 26433075481  
Status : Not Answered  
Chosen Option : --

**Q.11** In an election, there were two candidates A and B. The total number of voters in the constituency was 90000 and 70% of the total votes were polled. If 60% of the polled votes were cast in favour of A, how many votes were received by B?

- Ans  1. 28500  
 2. 25200  
 3. 28700  
 4. 28600

Question ID : 26433079770  
Status : Not Answered  
Chosen Option : --

**Q.12** The curved surface area of a sphere is  $1386 \text{ cm}^2$ . The volume of this sphere is:

- Ans  1.  $4815 \text{ cm}^3$   
 2.  $4851 \text{ cm}^3$   
 3.  $2425.5 \text{ cm}^3$   
 4.  $1617 \text{ cm}^3$

Question ID : 26433087406  
Status : Not Answered  
Chosen Option : --

**Q.13** The ratio of milk and water in two containers of 20 litres and 36 litres are in the ratio 3 : 7 and 7 : 5, respectively. What will be the ratio of milk and water if the two containers are mixed together?

- Ans  1. 9 : 13  
 2. 27 : 29  
 3. 21 : 23  
 4. 21 : 25

Question ID : 26433091899  
Status : Not Answered  
Chosen Option : --

**Q.14** The square of 28 is divided by the largest number that can exactly divide both 42 and 56. What is the result?

- Ans  1. 28  
 2. 14  
 3. 42  
 4. 56

Question ID : 264330116654  
Status : Answered  
Chosen Option : 1

**Q.15** A table whose marked price ₹300 is sold at two successive discounts of 20% and 10%. If in addition, a discount of 5% is offered on cash payment, then the cash price for the table is:

- Ans
- 1. ₹210.25
  - 2. ₹216.50
  - 3. ₹240.25
  - 4. ₹205.20

Question ID : 26433082095  
Status : Not Answered  
Chosen Option : --

**Q.16** The price of petrol is raised to Rs.96.5 per litre from Rs.92 per litre. What is the percentage increase in price of petrol?

- Ans
- 1. 4.5%
  - 2. 4.7%
  - 3. 4.9%
  - 4. 5.1%

Question ID : 26433071246  
Status : Not Answered  
Chosen Option : --

**Q.17** The third proportional to 24 and 36 is:

- Ans
- 1. 45
  - 2. 64
  - 3. 54
  - 4. 46

Question ID : 26433074993  
Status : Not Answered  
Chosen Option : --

**Q.18** Under a discount scheme, after allowing a discount of 20%, there is still a gain of 10%. The marked price is what percentage more than the cost price?

- Ans
- 1. 39%
  - 2. 37.5%
  - 3. 40%
  - 4. 35.2%

Question ID : 26433083042  
Status : Not Answered  
Chosen Option : --

**Q.19** Harshi bought a new sweatshirt at the store, when they were giving a 40 percent discount. If the marked price of the sweatshirt was Rs. 2999, then how much did Harshi pay with the discount?

- Ans
- 1. Rs. 2099.20
  - 2. Rs. 1799.40
  - 3. Rs. 2399.50
  - 4. Rs. 1899.80

Question ID : 264330116730  
Status : Not Answered  
Chosen Option : --

**Q.20** A man sold two chairs for Rs.475 each, gaining 25% on one and losing 20% on the other. Had he sold the two chairs for Rs.575 each, what would have been his gain/loss percentage (rounded off to the nearest integer)?

- Ans
- 1. 45% gain
  - 2. 18% gain
  - 3. 41% gain
  - 4. 25% loss

Question ID : 26433071284  
Status : Not Answered  
Chosen Option : --

Section : Part-D-English

**Q.1** Select the most appropriate option to fill in the blank.

We would \_\_\_\_\_ to travel by train rather than bus due to the poor road conditions in the village.

- Ans
- 1. prefer
  - 2. assure
  - 3. make it
  - 4. drop

Question ID : 26433091877  
Status : Answered  
Chosen Option : 1

**Q.2** Select the most appropriate option that can substitute the underlined segment in the given sentence.

The participants are rehearse their roles.

- Ans
- 1. are rehearsed
  - 2. has been rehearsing
  - 3. have rehearse
  - 4. are rehearsing

Question ID : 26433091869  
Status : Answered  
Chosen Option : 4

**Q.3** Select the option with the correct spelling to replace the underlined word in the given sentence.

She hit him in a moment of abomination.

- Ans
- 1. aberation
  - 2. abberation
  - 3. aberattion
  - 4. aberration

Question ID : 26433094408  
Status : Answered  
Chosen Option : 1

**Q.4 Select the most appropriate ANTONYM of the given word.**

**Anxious**

- Ans**  1. Considerate  
 2. Unconcerned  
 3. Stealthy  
 4. Haughty

Question ID : 26433074380  
Status : Answered  
Chosen Option : 3

**Q.5 Identify the correctly spelt sentence.**

- Ans**  1. My grandfather planted couliflower in the garden.  
 2. My grandfather planted kauliflower in the garden.  
 3. My grandfather planted cauleflower in the garden.  
 4. My grandfather planted cauliflower in the garden.

Question ID : 26433072831  
Status : Answered  
Chosen Option : 4

**Q.6 Select the most appropriate synonym of the underlined word.**

Music is a therapy for everyone – plants, birds, animals and human-beings – to flourish and rejuvenate.

- Ans**  1. modify  
 2. prosper  
 3. refreshen  
 4. fortify

Question ID : 26433089100  
Status : Answered  
Chosen Option : 3

**Q.7 Select the most appropriate meaning of the given idiom.**

**After one's own heart**

- Ans**  1. Having a face as one's own  
 2. Having likes and dislikes dissimilar to one's own  
 3. Having likes and dislikes far to one's own  
 4. Having likes and dislikes similar to one's own

Question ID : 26433072278  
Status : Answered  
Chosen Option : 4



**Q.8** The following sentence has been divided into parts. One of them may contain an error. Select the part that contains the error from the given options. If you don't find any error, mark 'No error' as your answer.  
Our soldiers have being / making a clean sweep of the / sheep and poultry on the route.

- Ans**
- 1. No error
  - 2. sheep and poultry on the route
  - 3. Our soldiers have being
  - 4. making a clean sweep of the

Question ID : 264330114510  
Status : Answered  
Chosen Option : 4

**Q.9** Select the most appropriate ANTONYM of the italicised word in the given sentence.

It is *absurd* to argue about this.

- Ans**
- 1. facetious
  - 2. fundamental
  - 3. reasonable
  - 4. amazing

Question ID : 26433096209  
Status : Answered  
Chosen Option : 3

**Q.10** Select the most appropriate option to fill in the blank.

\_\_\_\_\_ men command respect.

- Ans**
- 1. Holy
  - 2. Holey
  - 3. Holly
  - 4. Wholly

Question ID : 26433073934  
Status : Answered  
Chosen Option : 1

**Q.11** Select the most appropriate synonym of the given word.

**Sumptuous**

- Ans**
- 1. Mammoth
  - 2. Humble
  - 3. Minuscule
  - 4. Lavish

Question ID : 26433073980  
Status : Not Answered  
Chosen Option : --

**Q.12** Select the most appropriate idiom to substitute the underlined group of words in the given sentence.

Once in a year, the management of the institute surveys the whole situation.

- Ans**
- 1. take stock of
  - 2. perplexed with
  - 3. makes a mark
  - 4. comes to the front

Question ID : 26433073878  
Status : **Answered**  
Chosen Option : 3

**Q.13** Select the correct pair of words for the blanks in the given sentence.

My cousin likes \_\_\_\_\_ root and \_\_\_\_\_ around the bush is one of the idioms in English.

- Ans**
- 1. beat; beat
  - 2. beat; beet
  - 3. beet; beat
  - 4. beet; beet

Question ID : 26433060543  
Status : **Not Answered**  
Chosen Option : --

**Q.14** Select the most appropriate homonym to fill in the blank.  
He confessed about his affairs as the \_\_\_\_\_ made him sleepless.

- Ans**
- 1. guilt
  - 2. gilled
  - 3. gild
  - 4. guild

Question ID : 26433058525  
Status : **Not Answered**  
Chosen Option : --

**Q.15** Select the most appropriate option that can substitute the underlined segment in the given sentence.

The students were boring by the lecture delivered on environmental issues.

- Ans**
- 1. The students were bores
  - 2. The students bored
  - 3. The students were barring
  - 4. The students were bored

Question ID : 26433091771  
Status : **Answered**  
Chosen Option : 2

**Comprehension:**

In the following passage, some words have been deleted. Read the passage carefully and select the most appropriate option to fill in each blank.

Children especially (1)\_\_\_\_\_ avoid such foods or try to reduce intake and instead, eat healthy food for (2)\_\_\_\_\_ growth. Schools can (3)\_\_\_\_\_ the quality of the food being sold in the canteens and also ensure that the children bring wholesome nutrition food (4)\_\_\_\_\_ home. (5)\_\_\_\_\_ should be appointed to check the calories content and food value of food served in the canteens and setting definite tiffin patterns.

**SubQuestion No : 16**

**Q.16 Select the most appropriate option to fill in blank number 1.**

- Ans**  1. might  
 2. will  
 3. should  
 4. shall

Question ID : 26433089046  
Status : Answered  
Chosen Option : 3

**Comprehension:**

In the following passage, some words have been deleted. Read the passage carefully and select the most appropriate option to fill in each blank.

Children especially (1)\_\_\_\_\_ avoid such foods or try to reduce intake and instead, eat healthy food for (2)\_\_\_\_\_ growth. Schools can (3)\_\_\_\_\_ the quality of the food being sold in the canteens and also ensure that the children bring wholesome nutrition food (4)\_\_\_\_\_ home. (5)\_\_\_\_\_ should be appointed to check the calories content and food value of food served in the canteens and setting definite tiffin patterns.

**SubQuestion No : 17**

**Q.17 Select the most appropriate option to fill in blank number 2.**

- Ans**  1. elegant  
 2. proper  
 3. interesting  
 4. awkward

Question ID : 26433089047  
Status : Answered  
Chosen Option : 2

**Comprehension:**

In the following passage, some words have been deleted. Read the passage carefully and select the most appropriate option to fill in each blank.

Children especially (1)\_\_\_\_\_ avoid such foods or try to reduce intake and instead, eat healthy food for (2)\_\_\_\_\_ growth. Schools can (3)\_\_\_\_\_ the quality of the food being sold in the canteens and also ensure that the children bring wholesome nutrition food (4)\_\_\_\_\_ home. (5)\_\_\_\_\_ should be appointed to check the calories content and food value of food served in the canteens and setting definite tiffin patterns.

**SubQuestion No : 18**

**Q.18 Select the most appropriate option to fill in blank number 3.**

- Ans**  1. allow  
 2. show  
 3. proclaim  
 4. monitor

Question ID : 26433089048  
Status : Answered  
Chosen Option : 4

**Comprehension:**

In the following passage, some words have been deleted. Read the passage carefully and select the most appropriate option to fill in each blank.

Children especially (1)\_\_\_\_\_ avoid such foods or try to reduce intake and instead, eat healthy food for (2)\_\_\_\_\_ growth. Schools can (3)\_\_\_\_\_ the quality of the food being sold in the canteens and also ensure that the children bring wholesome nutrition food (4)\_\_\_\_\_ home. (5)\_\_\_\_\_ should be appointed to check the calories content and food value of food served in the canteens and setting definite tiffin patterns.

**SubQuestion No : 19**

**Q.19** Select the most appropriate option to fill in blank number 4.

- Ans**  1. through  
 2. with  
 3. from  
 4. in

Question ID : 26433089049  
Status : Answered  
Chosen Option : 3

**Comprehension:**

In the following passage, some words have been deleted. Read the passage carefully and select the most appropriate option to fill in each blank.

Children especially (1)\_\_\_\_\_ avoid such foods or try to reduce intake and instead, eat healthy food for (2)\_\_\_\_\_ growth. Schools can (3)\_\_\_\_\_ the quality of the food being sold in the canteens and also ensure that the children bring wholesome nutrition food (4)\_\_\_\_\_ home. (5)\_\_\_\_\_ should be appointed to check the calories content and food value of food served in the canteens and setting definite tiffin patterns.

**SubQuestion No : 20**

**Q.20** Select the most appropriate option to fill in blank number 5.

- Ans**  1. Technicians  
 2. Dieticians  
 3. Paediatricians  
 4. Opticians

Question ID : 26433089050  
Status : Answered  
Chosen Option : 2

Section : Part-D-Hindi

**Q.1** 'नव्या ने सुमति की बहुत भर्त्सना की'  
उक्त वाक्य में प्रयुक्त 'भर्त्सना' के स्थान पर उसके विलोम शब्द का प्रयोग निम्न में से किस वाक्य में किया गया है?

- Ans**  1. नव्या ने सुमति की बहुत बुराई की।  
 2. नव्या ने सुमति की बहुत आलोचना की।  
 3. नव्या ने सुमति की बहुत निंदा की।  
 4. नव्या ने सुमति की बहुत प्रशंसा की।

Question ID : 26433067027  
Status : Not Answered  
Chosen Option : --



Q.2 वाक्य में रेखांकित शब्द को दिए गए शब्दों में से उचित शब्द से बदलें।  
भरत को कैकयी की करनी पर करूणा हुई।

- Ans
- 1. क्षोभ
  - 2. दया
  - 3. दुःख
  - 4. पश्चात्ताप

Question ID : 26433062873  
Status : Not Answered  
Chosen Option : --

Q.3 निम्नलिखित वाक्यांश के लिए उपयुक्त सार्थक शब्द है-  
बिना स्वार्थ के कार्य करने वाला

- Ans
- 1. हितेषी
  - 2. सहायक
  - 3. निस्वार्थी
  - 4. स्वार्थी

Question ID : 26433065765  
Status : Not Answered  
Chosen Option : --

Q.4 निम्नलिखित वाक्यों में रिक्त स्थान की पूर्ति उचित एकार्थी शब्द-युग्म से करें-  
साहसी व्यक्ति \_\_\_\_\_ हो जाता है। कछुआ \_\_\_\_\_-चर जीव है।

- Ans
- 1. भय सहित- केवल एक
  - 2. जिसमें भय हो- जिसमें भय ना हो
  - 3. साथ साथ- ऊपर
  - 4. अभय-उभय

Question ID : 26433091326  
Status : Not Answered  
Chosen Option : --

Q.5 'लेने के देने पड़ना' मुहावरे का उचित अर्थ है-

- Ans
- 1. लाभ के बदले हानि
  - 2. कुछ न देना
  - 3. बहुत अधिक लाभ होना
  - 4. व्यापार करना

Question ID : 26433065879  
Status : Not Answered  
Chosen Option : --

Q.6 वर्तनी की दृष्टि से दिए गए वाक्य के अशुद्ध भाग का चयन कीजिए-  
पूर्ण स्वस्थ के लिए शुद्ध आहार-विहार आवश्यक है।

- Ans
- 1. आहार-विहार
  - 2. पूर्ण स्वस्थ
  - 3. के लिए शुद्ध
  - 4. आवश्यक है।

Question ID : 26433062885  
Status : Not Answered  
Chosen Option : --



Q.7 निम्न में से कौन-सा शब्द 'हाथ' शब्द का पर्यायवाची शब्द नहीं है?

- Ans
- 1. बाहु
  - 2. पाणि
  - 3. कर
  - 4. दन्त

Question ID : 26433067083  
Status : Not Answered  
Chosen Option : --

Q.8 निम्नलिखित में से शुद्ध वाक्य का चयन कीजिए-

- Ans
- 1. आप कब्वे आए?
  - 2. आप कब आए?
  - 3. आप कब आया?
  - 4. आप कब आयो?

Question ID : 26433091312  
Status : Not Answered  
Chosen Option : --

Q.9 'हिमालय की चोटियाँ तो \_\_\_\_\_ करती हैं।' वाक्य में रिक्त स्थान की पूर्ति उचित मुहावरे द्वारा कीजिए।

- Ans
- 1. गगनचुम्बी हैं
  - 2. आसमान चूमती है
  - 3. आसमान से बातें करती हैं
  - 4. राई का पहाड़ है

Question ID : 26433062610  
Status : Not Answered  
Chosen Option : --

Q.10 'वह धन जो आधिकारिक रूप से राज्य को मिलता हो' - वाक्यांश के लिए एक शब्द होगा

- Ans
- 1. कर
  - 2. राजस्व
  - 3. चुंगी
  - 4. राजधन

Question ID : 26433065729  
Status : Not Answered  
Chosen Option : --

Q.11 निम्नलिखित विकल्पों में से किस एक वाक्य में संख्यावाचक विशेषण का उचित प्रयोग नहीं किया गया है?

- Ans
- 1. नव्या के काले बाल हैं।
  - 2. दुर्घटना में पहलवान को अधिक घाव हो गए हैं।
  - 3. हमारी बगिया में कुछ अधिक वृक्ष हो गए हैं।
  - 4. महात्मा गाँधी बहुत थोड़े कपड़े पहनते थे।

Question ID : 26433062966  
Status : Not Answered  
Chosen Option : --

Q.12 किसी पदार्थ या राज्य का दूसरे पदार्थ या राज्य में मिल जाना - वाक्यांश के लिए एक शब्द होगा-

- Ans
- 1. संगम
  - 2. सहयोग
  - 3. विलय
  - 4. एकीकरण

Question ID : 26433065727  
Status : Not Answered  
Chosen Option : --

Q.13 निम्न में से कौन-सा शब्द 'कुबेर' शब्द का पर्यायवाची शब्द नहीं है?

- Ans
- 1. धनपति
  - 2. किन्नरपति
  - 3. मुनि
  - 4. यक्ष

Question ID : 26433067085  
Status : Not Answered  
Chosen Option : --

Q.14 निम्नलिखित विकल्पों में से कौन सा एक वाक्य प्रश्रवाचक सर्वनाम से संबंधित नहीं है?

- Ans
- 1. यह मूर्खता किसने की है?
  - 2. संसार का संचालन और नियमन कौन करता है?
  - 3. यह गाड़ी किसकी है?
  - 4. किसी ने जोर से चीत्कार की?

Question ID : 26433091239  
Status : Not Answered  
Chosen Option : --

Q.15 दिए गये वाक्य के अशुद्ध भाग का चयन कीजिए।  
एक मेरे प्रिय मेधावी छात्र ने अच्छा नाम कमाया।

- Ans
- 1. प्रिय मेधावी
  - 2. छात्र ने अच्छा
  - 3. नाम कमाया।
  - 4. एक मेरे

Question ID : 26433085086  
Status : Not Answered  
Chosen Option : --

**Comprehension:**

निम्नलिखित गद्यांश में कुछ शब्दों को हटा दिया गया है। दिए गए विकल्पों की सहायता से रिक्त स्थानों की पूर्ति कीजिए। प्रत्येक संख्या के लिए सबसे उपयुक्त विकल्प का चयन करें।

आज का जीवन 1. \_\_\_\_\_ से भरा है। महत्त्वपूर्ण और अनिवार्य 2. \_\_\_\_\_ को पूरा करने में अत्यधिक संघर्ष करना पड़ता है। महँगाई बहुत 3. \_\_\_\_\_ गई है। इसके साथ ही बच्चों से लेकर 4. \_\_\_\_\_ तक की आवश्यकताएँ इतनी अधिक हो गई हैं कि परिवार के प्रत्येक सदस्य को धनोपार्जन के लिए घर से बाहर जाना पड़ता है। घर और अपनों के लिए समय ही नहीं होता। जीवन संघर्ष का 5. \_\_\_\_\_ बन गया है।

**SubQuestion No : 16**

**Q.16** रिक्त स्थान 1 की पूर्ति के लिए सबसे उपयुक्त विकल्प का चयन कीजिए।

- Ans**
- 1. कार्य
  - 2. सदस्यों
  - 3. खेल-कूद
  - 4. भागदौड़

Question ID : 264330111119  
Status : Not Answered  
Chosen Option : --

**Comprehension:**

निम्नलिखित गद्यांश में कुछ शब्दों को हटा दिया गया है। दिए गए विकल्पों की सहायता से रिक्त स्थानों की पूर्ति कीजिए। प्रत्येक संख्या के लिए सबसे उपयुक्त विकल्प का चयन करें।

आज का जीवन 1. \_\_\_\_\_ से भरा है। महत्त्वपूर्ण और अनिवार्य 2. \_\_\_\_\_ को पूरा करने में अत्यधिक संघर्ष करना पड़ता है। महँगाई बहुत 3. \_\_\_\_\_ गई है। इसके साथ ही बच्चों से लेकर 4. \_\_\_\_\_ तक की आवश्यकताएँ इतनी अधिक हो गई हैं कि परिवार के प्रत्येक सदस्य को धनोपार्जन के लिए घर से बाहर जाना पड़ता है। घर और अपनों के लिए समय ही नहीं होता। जीवन संघर्ष का 5. \_\_\_\_\_ बन गया है।

**SubQuestion No : 17**

**Q.17** रिक्त स्थान 2 की पूर्ति के लिए सबसे उपयुक्त विकल्प का चयन कीजिए।

- Ans**
- 1. आवश्यकताओं
  - 2. अवसर
  - 3. भावना
  - 4. घटना

Question ID : 2643301111120  
Status : Not Answered  
Chosen Option : --

**Comprehension:**

निम्नलिखित गद्यांश में कुछ शब्दों को हटा दिया गया है। दिए गए विकल्पों की सहायता से रिक्त स्थानों की पूर्ति कीजिए। प्रत्येक संख्या के लिए सबसे उपयुक्त विकल्प का चयन करें।

आज का जीवन 1. \_\_\_\_\_ से भरा है। महत्त्वपूर्ण और अनिवार्य 2. \_\_\_\_\_ को पूरा करने में अत्यधिक संघर्ष करना पड़ता है। महँगाई बहुत 3. \_\_\_\_\_ गई है। इसके साथ ही बच्चों से लेकर 4. \_\_\_\_\_ तक की आवश्यकताएँ इतनी अधिक हो गई हैं कि परिवार के प्रत्येक सदस्य को धनोपार्जन के लिए घर से बाहर जाना पड़ता है। घर और अपनों के लिए समय ही नहीं होता। जीवन संघर्ष का 5. \_\_\_\_\_ बन गया है।

**SubQuestion No : 18**

**Q.18** रिक्त स्थान 3 की पूर्ति के लिए सबसे उपयुक्त विकल्प का चयन कीजिए।

- Ans**
- 1. नीचे
  - 2. बन
  - 3. कम
  - 4. बढ़

Question ID : 2643301111121  
Status : Not Answered  
Chosen Option : --

**Comprehension:**

निम्नलिखित गद्यांश में कुछ शब्दों को हटा दिया गया है। दिए गए विकल्पों की सहायता से रिक्त स्थानों की पूर्ति कीजिए। प्रत्येक संख्या के लिए सबसे उपयुक्त विकल्प का चयन करें।

आज का जीवन 1. \_\_\_\_\_ से भरा है। महत्त्वपूर्ण और अनिवार्य 2. \_\_\_\_\_ को पूरा करने में अत्यधिक संघर्ष करना पड़ता है। महँगाई बहुत 3. \_\_\_\_\_ गई है। इसके साथ ही बच्चों से लेकर 4. \_\_\_\_\_ तक की आवश्यकताएँ इतनी अधिक हो गई हैं कि परिवार के प्रत्येक सदस्य को धनोपार्जन के लिए घर से बाहर जाना पड़ता है। घर और अपनों के लिए समय ही नहीं होता। जीवन संघर्ष का 5. \_\_\_\_\_ बन गया है।

**SubQuestion No : 19**

Q.19 रिक्त स्थान 4 की पूर्ति के लिए सबसे उपयुक्त विकल्प का चयन कीजिए।

- Ans  1. बूढ़ों  
 2. सरकार  
 3. बाहर  
 4. किसी की भी

Question ID : 264330111122  
Status : Not Answered  
Chosen Option : --

**Comprehension:**

निम्नलिखित गद्यांश में कुछ शब्दों को हटा दिया गया है। दिए गए विकल्पों की सहायता से रिक्त स्थानों की पूर्ति कीजिए। प्रत्येक संख्या के लिए सबसे उपयुक्त विकल्प का चयन करें।

आज का जीवन 1. \_\_\_\_\_ से भरा है। महत्त्वपूर्ण और अनिवार्य 2. \_\_\_\_\_ को पूरा करने में अत्यधिक संघर्ष करना पड़ता है। महँगाई बहुत 3. \_\_\_\_\_ गई है। इसके साथ ही बच्चों से लेकर 4. \_\_\_\_\_ तक की आवश्यकताएँ इतनी अधिक हो गई हैं कि परिवार के प्रत्येक सदस्य को धनोपार्जन के लिए घर से बाहर जाना पड़ता है। घर और अपनों के लिए समय ही नहीं होता। जीवन संघर्ष का 5. \_\_\_\_\_ बन गया है।

**SubQuestion No : 20**

Q.20 रिक्त स्थान 5 की पूर्ति के लिए सबसे उपयुक्त विकल्प का चयन कीजिए।

- Ans  1. प्रकार  
 2. सहायक  
 3. कारण  
 4. पर्याय

Question ID : 264330111123  
Status : Not Answered  
Chosen Option : --



## Constable GD in CAPFs SSF Rifleman GD in Assam Rifles and Sepoy in NCB Examination 2022

Roll Number	
Candidate Name	
Venue Name	iON Digital Zone iDZ 1 Sector 62
Exam Date	10/01/2023
Exam Time	5:15 PM - 6:15 PM
Subject	Constable GD Examination 2022

Section : Part-A-General Intelligence and Reasoning

**Q.1** Select the option that is related to the third word in the same way as the second word is related to the first word. (The words must be considered as meaningful English words and must not be related to each other based on the number of letters/number of consonants/vowels in the word.)  
Meghalaya : Shillong :: Kerala : ?

- Ans
- 1. Panaji
  - 2. Chennai
  - 3. Thiruvananthapuram
  - 4. Bengaluru

Question ID : 26433067371  
Status : Answered  
Chosen Option : 3

**Q.2** Select the option that is related to the fifth number in the same way as the second number is related to the first number and the fourth number is related to the third number.  
48 : 5 :: 30 : 3 :: 57 : ?

- Ans
- 1. 2
  - 2. 4
  - 3. 6
  - 4. 7

Question ID : 26433069418  
Status : Answered  
Chosen Option : 3

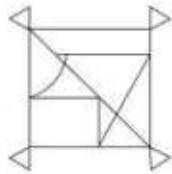
**Q.3** Which of the following numbers will replace the question mark (?) in the given series?  
23, 27, 35, ?, 63, 83, 107

- Ans
- 1. 47
  - 2. 43
  - 3. 55
  - 4. 39

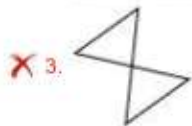
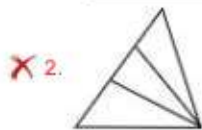
Question ID : 26433068090  
Status : Answered  
Chosen Option : 1



Q.4 Select the option figure which is embedded in the given figure. (Rotation is NOT allowed)



Ans



Question ID : 26433069343  
Status : Answered  
Chosen Option : 4

Q.5 Which two signs should be interchanged to make the given equation correct?  
 $561 \div 11 \times 22 + 6 - 25 = 158$

Ans ✓ 1. + and ×

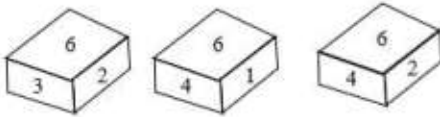
✗ 2. + and ×

✗ 3. ÷ and +

✗ 4. + and -

Question ID : 26433082742  
Status : Answered  
Chosen Option : 1

Q.6 Three different positions of the same dice are shown. Find the number on the face opposite the face showing '6'.



- Ans
- 1. 4
  - 2. 1
  - 3. 3
  - 4. 5

Question ID : 26433090066  
Status : Answered  
Chosen Option : 4

Q.7 In a certain code language, 'STATION' is written as 'UVYVGMP' and 'TRIUMPH' is written as 'VTGSORJ'. How will 'HOLIDAY' be written in that language?

- Ans
- 1. JMNGFXW
  - 2. JMNGBXW
  - 3. JMNGFCW
  - 4. JMNGFYA

Question ID : 26433081759  
Status : Answered  
Chosen Option : 4

Q.8 In a certain code language, 'TABLE' is written as '£@6#%', 'LARK' is written as '#@28' and 'BUCKET' is written as '6\$+8%£'. How will 'CLARET' be written in that language?

- Ans
- 1. +#@2%£
  - 2. +#26%\$
  - 3. 8#2%6+
  - 4. 8#@6%£

Question ID : 26433069608  
Status : Answered  
Chosen Option : 1

Q.9 Which letter-cluster will replace the question mark (?) to complete the given series?  
CTUJ, EVWL, ?, IZAP, KBCR

- Ans
- 1. GXYN
  - 2. FXYO
  - 3. FXYN
  - 4. GXYO

Question ID : 26433067940  
Status : Answered  
Chosen Option : 1

Q.10 Which of the following numbers will replace the question mark (?) in the given series?  
115, 102, 107, 94, 99, ?

- Ans
- 1. 92
  - 2. 84
  - 3. 96
  - 4. 86

Question ID : 26433076749  
Status : Answered  
Chosen Option : 4

Q.11 Select the option that is related to the fifth letter-cluster in the same way as the second letter-cluster is related to the first letter-cluster and the fourth letter-cluster is related to the third letter-cluster.

PENALTY : QFOBMUZ :: OFFENSE : PGGFOTF :: NERVOUS : ?

- Ans
- 1. VOUSNER
  - 2. SUOVREN
  - 3. RENVIOUS
  - 4. OFSWPVT

Question ID : 26433069637  
Status : Answered  
Chosen Option : 4

Q.12 There are 7 people sitting around a circular table facing towards the centre - A, B, C, D, E, F, and G. A is sitting to the immediate right of C and immediate left of D. G is sitting to the immediate left of C and immediate right of F. E is sitting to the immediate left of F and immediate right of B. B is sitting second right of A. Who is the immediate neighbour of A and B?

- Ans
- 1. G
  - 2. F
  - 3. E
  - 4. D

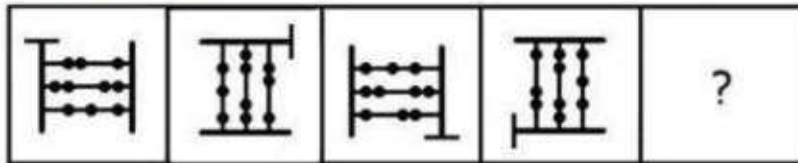
Question ID : 26433074607  
Status : Answered  
Chosen Option : 4

Q.13 Which of the following terms will replace the question mark (?) in the given series?  
MQEV, ?, QOIT, SNKS, UMMR

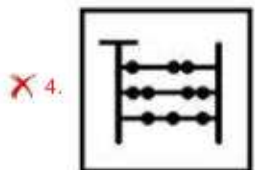
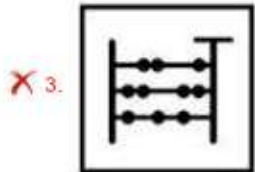
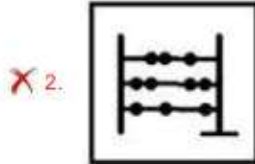
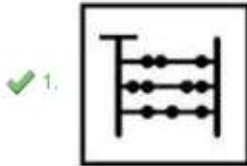
- Ans
- 1. OPHU
  - 2. NPGU
  - 3. OPGU
  - 4. PPHV

Question ID : 26433068308  
Status : Answered  
Chosen Option : 3

Q.14 Select the figure that will come next in the following series.



Ans



Question ID : 26433078968

Status : Answered

Chosen Option : 1





Q.18 A @ B means 'A is the sister of B'.  
A & B means 'A is the brother of B'.  
A # B means 'A is the wife of B'.  
A ^ B means 'A is the mother of B'.  
A + B means 'A is the father of B'.  
If  $X + T \wedge M \# G \& C \wedge K @ H \wedge Q$ , then which of the following statements is NOT correct?

- Ans:  1. G is the son-in-law of T.  
 2. G is the father of K.  
 3. C is the mother of H.  
 4. X is the maternal grandfather of M.

Question ID : 26433068952  
Status : Answered  
Chosen Option : 2

Q.19 Three statements are given followed by three conclusions. Assuming the statements to be true, even if they seem to be at variance with commonly known facts, decide which of the conclusions logically follow(s) from the statements.

Statements:

Some computers are phones.  
All phones are calculators.  
All calculators are i-pads.

Conclusions:

1. Some i-pads are computers.
2. All calculators are phones.
3. Some i-pads are phones.

- Ans:  1. All conclusions follow.  
 2. Only conclusions 1 and 2 follow.  
 3. Only conclusions 2 and 3 follow.  
 4. Only conclusions 1 and 3 follow.

Question ID : 26433089424  
Status : Answered  
Chosen Option : 4

Q.20 Which two signs should be interchanged to make the below equation mathematically correct?

$$48 - 96 \times 4 \div 3 + 58 = 34$$

- Ans:  1. + and -  
 2.  $\times$  and +  
 3. - and +  
 4. + and  $\times$

Question ID : 264330117499  
Status : Answered  
Chosen Option : 4

**Q.1** Which of the following Articles of the Constitution of India deals with the state executive?

- Ans**  1. Articles 134-143  
 2. Articles 123-132  
 3. Articles 153-167  
 4. Articles 145-150

Question ID : 26433086852  
Status : Answered  
Chosen Option : 3

**Q.2** The 'Method of Election of the president' in the Indian Constitution has been borrowed from the \_\_\_\_\_ constitution.

- Ans**  1. Irish  
 2. South African  
 3. German  
 4. United States of America

Question ID : 26433064813  
Status : Not Answered  
Chosen Option : --

**Q.3** Mohiniyattam is a solo classical dance form related to which of the following states?

- Ans**  1. Kerala  
 2. Uttar Pradesh  
 3. Karnataka  
 4. Bihar

Question ID : 26433071658  
Status : Answered  
Chosen Option : 1

**Q.4** Which Indian origin Sikh has been given New South Wales Australian of the Year award 2023 for supporting the community affected by floods, bushfires, drought and Covid-19?

- Ans**  1. Navjit Kaur Brar  
 2. Amar Singh  
 3. Jatinder Singh  
 4. Kamaljit Arora

Question ID : 264330114989  
Status : Not Answered  
Chosen Option : --

Q.5 In India, in which year was the National Food for Work Programme scheme launched?

- Ans
- 1. 2005
  - 2. 2000
  - 3. 2004
  - 4. 2003

Question ID : 264330116078  
Status : Not Answered  
Chosen Option : --

Q.6 Makar Sankranti is celebrated as Pedda Panduga in which of the following states?

- Ans
- 1. Andhra Pradesh
  - 2. Tamil Nadu
  - 3. Karnataka
  - 4. Kerala

Question ID : 264330115106  
Status : Answered  
Chosen Option : 2

Q.7 Pick the odd one out (Hint: fiber crops)

- Ans
- 1. rubber
  - 2. cotton
  - 3. hemp
  - 4. jute

Question ID : 264330115533  
Status : Answered  
Chosen Option : 3

Q.8 The mode of nutrition in which organisms take in nutrients from dead and decaying matter is called \_\_\_\_\_ nutrition.

- Ans
- 1. Monotrophic
  - 2. Saprotrophic
  - 3. Autotrophic
  - 4. Heterotrophic

Question ID : 264330115254  
Status : Answered  
Chosen Option : 3

Q.9 'Mother of Mohiniyattam' is a docu-fiction based on \_\_\_\_\_.

- Ans
- 1. Shovana Narayan
  - 2. Kalamandalam Kallyanikutty Amma
  - 3. Mahaboob Subhani
  - 4. Anuradha Pandey

Question ID : 264330115878  
Status : Answered  
Chosen Option : 2

Q.10 Budget documents classify total expenditure into \_\_\_\_\_.

- Ans
- 1. services and non- goods services
  - 2. goods and incomes
  - 3. part and whole expenditure
  - 4. plan and non-plan expenditure

Question ID : 264330115286  
Status : Answered  
Chosen Option : 4

Q.11 Which of the following was the main demand of the peasant movement of Kheda?

- Ans
- 1. Free irrigation facility to be provided
  - 2. Plantation system to be dropped
  - 3. Revenue collection be relaxed
  - 4. Hybrid seeds to be provided

Question ID : 26433089883  
Status : Not Answered  
Chosen Option : --

Q.12 In India, during October-November, with the apparent movement of the sun towards the south, the \_\_\_\_\_ over the northern plains becomes weaker.

- Ans
- 1. Upper level trough
  - 2. Monsoon trough
  - 3. Lee trough
  - 4. Inverted trough

Question ID : 264330115988  
Status : Answered  
Chosen Option : 1

Q.13 Techniques of making silk were first invented in China around \_\_\_\_\_ years ago.

- Ans
- 1. 20000
  - 2. 15000
  - 3. 7000
  - 4. 30000

Question ID : 26433090573  
Status : Not Answered  
Chosen Option : --

Q.14 Which Union Minister of Government of India inaugurated the Tech Conclave 2022 in March?

- Ans
- 1. Amit Shah
  - 2. Smriti Irani
  - 3. Rajnath Singh
  - 4. Ashwini Vaishnaw

Question ID : 264330114930  
Status : Answered  
Chosen Option : 1

Q.15 Which of the following player was the highest scorer in the final match of cricket world cup 1983?

- Ans
- 1. Krishnamachari Srikkanth
  - 2. Mohinder Amarnath
  - 3. Sunil Gavaskar
  - 4. Kapil Dev

Question ID : 264330116295  
Status : Answered  
Chosen Option : 4

Q.16 Which country hosted the Asian Athletics Championship in 2019?

- Ans
- 1. South Korea
  - 2. Jordan
  - 3. Philippines
  - 4. Qatar

Question ID : 264330115925  
Status : Not Answered  
Chosen Option : --

Q.17 Lime stone is the raw material of \_\_\_\_\_, among the given industries.

- Ans
- 1. plastic industry
  - 2. Furniture industry
  - 3. cement industry
  - 4. electronic industry

Question ID : 264330115394  
Status : Answered  
Chosen Option : 3



Q.18 The Supreme Court of India passed a judgment in \_\_\_\_\_ in which it declared the practice of Triple Talaq as unconstitutional and the practice of the same be void.

- Ans
- 1. 2018
  - 2. 2014
  - 3. 2017
  - 4. 2013

Question ID : 264330116224  
Status : Not Answered  
Chosen Option : --

Q.19 At independence, about \_\_\_\_\_ percent of the India's population was dependent on agriculture.

- Ans
- 1. 90
  - 2. 50
  - 3. 100
  - 4. 75

Question ID : 264330116158  
Status : Answered  
Chosen Option : 1

Q.20  $H_2SO_4$  is the chemical formula for \_\_\_\_\_.

- Ans
- 1. Oil of Vitriol
  - 2. Green Vitriol
  - 3. Muriatic Acid
  - 4. Blue Vitriol

Question ID : 264330115165  
Status : Answered  
Chosen Option : 3

Section : Part-C-Elementary Mathematics

Q.1 A batsman makes a score of 97 runs in 15th inning and thus increases his average by 5. Find his average after 15th inning.

- Ans
- 1. 15
  - 2. 82
  - 3. 27
  - 4. 92

Question ID : 26433082642  
Status : Answered  
Chosen Option : 1

**Q.2** The population of a town increased from 145000 to 200000 in a decade. What will be the simple growth rate percent of population per annum?

- Ans
- 1. 4.856 percent
  - 2. 5.789 percent
  - 3. 3.793 percent
  - 4. 2.165 percent

Question ID : 264330116828  
Status : Answered  
Chosen Option : 3

**Q.3** A can paint seven chairs in an hour and B can paint four chairs in an hour. Determine how much time they will require to paint 55 chairs when they work together.

- Ans
- 1. 7 hours
  - 2. 5 hours
  - 3. 6 hours
  - 4. 4 hours

Question ID : 26433074311  
Status : Answered  
Chosen Option : 2

**Q.4** A sum of Rs.1,875 at 4% per annum increased to Rs.2,028 in certain time. If interest is compounded yearly, then what is the time period?

- Ans
- 1. 2.5 years
  - 2. 3 years
  - 3. 3.5 years
  - 4. 2 years

Question ID : 26433075677  
Status : Answered  
Chosen Option : 4

**Q.5** 37 is what percentage of 55? (correct up to two decimal places)

- Ans
- 1. 67.27%
  - 2. 64.91%
  - 3. 69.41%
  - 4. 62.77%

Question ID : 26433080298  
Status : Answered  
Chosen Option : 1

Q.6 Calculate the volume (in  $\text{cm}^3$ ) of the cylinder having height 20 cm and base radius 14 cm.

- Ans
- 1.  $13,230 \text{ cm}^3$
  - 2.  $13,300 \text{ cm}^3$
  - 3.  $12,320 \text{ cm}^3$
  - 4.  $12,200 \text{ cm}^3$

Question ID : 26433075821  
Status : Answered  
Chosen Option : 3

Q.7 The current population of a city is 125000. If the population grows at the rate of 2% per year, what will be the population of the city after 3 years?

- Ans
- 1. 133512
  - 2. 132651
  - 3. 130896
  - 4. 132165

Question ID : 26433080338  
Status : Answered  
Chosen Option : 2

Q.8 The marked price of a washing machine is Rs.23,500 and the shopkeeper sold it for Rs.20,915. What is the percentage of discount offered by the shopkeeper?

- Ans
- 1. 10%
  - 2. 9%
  - 3. 12%
  - 4. 11%

Question ID : 26433075189  
Status : Answered  
Chosen Option : 4

Q.9 A dealer professes to sell his goods at a loss of 16%, but weights 750 gm in place of a kg weight. Find his total profit percentage.

- Ans
- 1. 15 Percent
  - 2. 11 Percent
  - 3. 14 Percent
  - 4. 12 Percent

Question ID : 26433080170  
Status : Answered  
Chosen Option : 4

Q.10 The LCM of 32 and 40 equals to 9 less than the square of X. Find the positive value of X.

- Ans
- 1. 14
  - 2. 11
  - 3. 12
  - 4. 13

Question ID : 264330116647  
Status : Answered  
Chosen Option : 4

Q.11 A man buys a toy car for ₹135 and sells it for ₹150, find his gain percentage.

- Ans
- 1. 10.10%
  - 2. 10%
  - 3. 11%
  - 4. 11.11%

Question ID : 26433076173  
Status : Answered  
Chosen Option : 4

Q.12 The curved surface area of a cone is  $4,455 \text{ cm}^2$  and its diameter is 105 cm. What is its slant height? Take  $\pi = \frac{22}{7}$

- Ans
- 1. 23 cm
  - 2. 21 cm
  - 3. 25 cm
  - 4. 27 cm

Question ID : 26433076253  
Status : Answered  
Chosen Option : 4

Q.13 In a linear race of 1000 m, Saloni beat Shweta by 100 m, while Shweta beat Sonam by 150 m. By how many metres does Saloni beat Sonam, in the same race?

- Ans
- 1. 220 m
  - 2. 250 m
  - 3. 225 m
  - 4. 235 m

Question ID : 26433080378  
Status : Answered  
Chosen Option : 2

Q.14 Four prime numbers are arranged in ascending order. The product of the first three numbers is 255 and that of the last three is 1955. The largest prime number is:

- Ans  1. 23  
 2. 31  
 3. 17  
 4. 29

Question ID : 26433081471  
Status : Answered  
Chosen Option : 3

Q.15 A boy travelled from the home to the college at the rate of 35 km/h and walked back at the rate of 3 km/h. If the whole journey took 6 h 30 min, then the distance of the college from the home (correct to 2 decimal places) is:

- Ans  1. 18.01 km  
 2. 17.58 km  
 3. 17.25 km  
 4. 17.96 km

Question ID : 26433081594  
Status : Not Answered  
Chosen Option : --

Q.16 Aman, Ram, and Kapil can complete a work in 68 days, 51 days, and 17 days respectively. If they work on alternate days such that Aman works on first day, Ram works on second day, Kapil works on third day and then again Aman works on fourth day and so on, then find the approximate number of days in which 50% of the work is completed.

- Ans  1. 19 days  
 2. 16 days  
 3. 15 days  
 4. 18 days

Question ID : 264330116908  
Status : Not Answered  
Chosen Option : --

Q.17 Find the mean proportional between 0.64 and 0.81.

- Ans  1. 0.70  
 2. 0.72  
 3. 0.66  
 4. 0.68

Question ID : 26433080113  
Status : Answered  
Chosen Option : 2



Q.18 Two numbers are in the ratio 3 : 8. If 8 is added to each number, then the ratio becomes 1 : 2. If 4 is subtracted from each number, then the ratio will become:

- Ans
- 1. 7 : 2
  - 2. 8 : 3
  - 3. 2 : 7
  - 4. 3 : 8

Question ID : 26433087371  
Status : Answered  
Chosen Option : 3

Q.19 A farmer has 10 Parrots and 40 horses. Find the average number of legs per animal.

- Ans
- 1. 3.2
  - 2. 3.4
  - 3. 3.6
  - 4. 3.8

Question ID : 264330116693  
Status : Answered  
Chosen Option : 3

Q.20 With a 10% discount on the marked price, a seller earns a 5% profit. If the marked price is increased by 5% and two successive discounts of 5% each are offered, how much percentage profit does the seller earn?

- Ans
- 1. 10.5%
  - 2. 10%
  - 3. 11%
  - 4. 11.5%

Question ID : 26433085450  
Status : Not Answered  
Chosen Option : --

Section : Part-D-English

Q.1 Select the most appropriate option that can substitute the underlined segment in the given sentence.

As of now, they have finished the construction of the ground flour.

- Ans
- 1. construction of the ground flavor
  - 2. construction of the ground floor
  - 3. construction of the ground flower
  - 4. construction of the ground flounder

Question ID : 264330100991  
Status : Not Answered  
Chosen Option : --

Q.2 Select the most appropriate option that can substitute the underlined segment in the given sentence.

I was delight in the moment I saw her.

- Ans
- 1. delighted at
  - 2. had delightful
  - 3. was delighting
  - 4. was delighted

Question ID : 26433088167  
Status : Not Answered  
Chosen Option : --

Q.3 Select the most appropriate synonym of the word given in brackets to fill in the blank.

Jack met with a/an \_\_\_\_\_ (deadly) accident.

- Ans
- 1. vital
  - 2. deaden
  - 3. fatal
  - 4. explicit

Question ID : 26433089076  
Status : Not Answered  
Chosen Option : --

Q.4 Select the most appropriate ANTONYM of the given word.

Solitary

- Ans
- 1. Indifferent
  - 2. Lone
  - 3. Gregarious
  - 4. Loan

Question ID : 26433073867  
Status : Not Answered  
Chosen Option : --

Q.5 Select the most appropriate synonym for the underlined word in the given sentence.

The pearls produced in that oyster farm have lost all their lustre.

- Ans
- 1. front
  - 2. shine
  - 3. lustful
  - 4. gloom

Question ID : 26433073753  
Status : Not Answered  
Chosen Option : --

**Q.6** Select the most appropriate option to fill in the blank.  
The person in ragged clothes sleeping on the street is a \_\_\_\_\_ man.

- Ans
- 1. cunning
  - 2. learned
  - 3. homeless
  - 4. wealthy

Question ID : 26433085600  
Status : Not Answered  
Chosen Option : --

**Q.7** Select the most appropriate synonym of the underlined word in the given sentence.

The country has an abundant supply of minerals.

- Ans
- 1. Artificial
  - 2. Sparse
  - 3. Ample
  - 4. Natural

Question ID : 26433072061  
Status : Not Answered  
Chosen Option : --

**Q.8** Select the most appropriate meaning of the given idiom.

The whys and wherefores

- Ans
- 1. Underlying reason
  - 2. Summary
  - 3. Interrogation
  - 4. Minute observation

Question ID : 26433072433  
Status : Not Answered  
Chosen Option : --

**Q.9** Select the most appropriate ANTONYM of the given word.

Acceptance

- Ans
- 1. Stoppage
  - 2. Allocation
  - 3. Rejection
  - 4. Trouble

Question ID : 26433073797  
Status : Not Answered  
Chosen Option : --

Q.10 The sentence given below has one misspelt word. Spot the INCORRECTLY spelt word and select its correct spelling.

He wishes to be an orthopidic surgeon.

- Ans
- 1. Orthapedic
  - 2. Ortopeedic
  - 3. Orthopaedic
  - 4. Orthopadic

Question ID : 26433073557  
Status : Not Answered  
Chosen Option : --

Q.11 The following sentence has been split into four segments. Identify the segment that contains a grammatical error.

My aunt Geeta, / is knowing / my friend Rudransh / very well.

- Ans
- 1. very well
  - 2. My aunt Geeta
  - 3. is knowing
  - 4. my friend Rudransh

Question ID : 26433086457  
Status : Not Answered  
Chosen Option : --

Q.12 Select the INCORRECTLY spelt word.

- Ans
- 1. Spead
  - 2. Task
  - 3. Salt
  - 4. Brand

Question ID : 26433073495  
Status : Not Answered  
Chosen Option : --

Q.13 Select the most appropriate ANTONYM of the given word.

Captivity

- Ans
- 1. Persistent
  - 2. Accused
  - 3. Liberty
  - 4. Haemorrhage

Question ID : 26433089114  
Status : Not Answered  
Chosen Option : --

Q.14 Select the most appropriate homonym to fill in the blank.

What \_\_\_\_\_ of a movie is this?

- Ans  1. kind  
 2. can  
 3. keen  
 4. con

Question ID : 26433088791  
Status : Not Answered  
Chosen Option : --

Q.15 Select the most appropriate option to fill in the blank.

The Conjuring is not a movie for the \_\_\_\_\_ of heart.

- Ans  1. faint  
 2. emotional  
 3. strong  
 4. paint

Question ID : 26433084604  
Status : Not Answered  
Chosen Option : --

#### Comprehension:

In the following passage, some words have been deleted. Read the passage carefully and select the most appropriate option to fill in each blank.

The blockade of the national highways leading to the Manipur valley, called by the United Naga Council (UNC), has been in place since 1 November. This has severely affected life in the State, with shortages and (1) \_\_\_\_\_ costs of essential supplies such as fuel and food, even as demonetisation has (2) \_\_\_\_\_ problems. Blockades like this are not new to Manipur. In 2011, there was initially a hundred-day- plus blockade enforced by Kuki-led groups, and countered later by Naga groups, which together had a (3) \_\_\_\_\_ effect on life in Manipur. This time the blockade is in place to oppose the creation of new districts by the Okram Ibobi Singh government. On 9 December it issued a (4) \_\_\_\_\_ notification for the creation of seven new districts by bifurcating seven (of a total of nine) districts. This decision had as much to do with long-pending demands — in particular, for a new Kuki-majority district to be carved out of the larger Senapati hill district — as with easing administrative access to (5) \_\_\_\_\_ areas from the district headquarters.

SubQuestion No : 16

Q.16 Select the most appropriate option to fill in blank number 1.

- Ans  1. diminishing  
 2. upfront  
 3. varying  
 4. escalating

Question ID : 26433088621  
Status : Not Answered  
Chosen Option : --



**Comprehension:**

In the following passage, some words have been deleted. Read the passage carefully and select the most appropriate option to fill in each blank.

The blockade of the national highways leading to the Manipur valley, called by the United Naga Council (UNC), has been in place since 1 November. This has severely affected life in the State, with shortages and (1) \_\_\_\_\_ costs of essential supplies such as fuel and food, even as demonetisation has (2) \_\_\_\_\_ problems. Blockades like this are not new to Manipur. In 2011, there was initially a hundred-day- plus blockade enforced by Kuki-led groups, and countered later by Naga groups, which together had a (3) \_\_\_\_\_ effect on life in Manipur. This time the blockade is in place to oppose the creation of new districts by the Okram Ibobi Singh government. On 9 December it issued a (4) \_\_\_\_\_ notification for the creation of seven new districts by bifurcating seven (of a total of nine) districts. This decision had as much to do with long-pending demands — in particular, for a new Kuki-majority district to be carved out of the larger Senapati hill district — as with easing administrative access to (5) \_\_\_\_\_ areas from the district headquarters.

**SubQuestion No : 17**

**Q.17** Select the most appropriate option to fill in blank number 2.

Ans  1. vindicated

2. exacerbated

3. pacified

4. exceed

Question ID : 26433088622

Status : Not Answered

Chosen Option : --

**Comprehension:**

In the following passage, some words have been deleted. Read the passage carefully and select the most appropriate option to fill in each blank.

The blockade of the national highways leading to the Manipur valley, called by the United Naga Council (UNC), has been in place since 1 November. This has severely affected life in the State, with shortages and (1) \_\_\_\_\_ costs of essential supplies such as fuel and food, even as demonetisation has (2) \_\_\_\_\_ problems. Blockades like this are not new to Manipur. In 2011, there was initially a hundred-day- plus blockade enforced by Kuki-led groups, and countered later by Naga groups, which together had a (3) \_\_\_\_\_ effect on life in Manipur. This time the blockade is in place to oppose the creation of new districts by the Okram Ibobi Singh government. On 9 December it issued a (4) \_\_\_\_\_ notification for the creation of seven new districts by bifurcating seven (of a total of nine) districts. This decision had as much to do with long-pending demands — in particular, for a new Kuki-majority district to be carved out of the larger Senapati hill district — as with easing administrative access to (5) \_\_\_\_\_ areas from the district headquarters.

**SubQuestion No : 18**

**Q.18** Select the most appropriate option to fill in blank number 3.

Ans  1. counter

2. acting

3. debilitating

4. befitting

Question ID : 26433088623

Status : Not Answered

Chosen Option : --

**Comprehension:**

In the following passage, some words have been deleted. Read the passage carefully and select the most appropriate option to fill in each blank.

The blockade of the national highways leading to the Manipur valley, called by the United Naga Council (UNC), has been in place since 1 November. This has severely affected life in the State, with shortages and (1) \_\_\_\_\_ costs of essential supplies such as fuel and food, even as demonetisation has (2) \_\_\_\_\_ problems. Blockades like this are not new to Manipur. In 2011, there was initially a hundred-day- plus blockade enforced by Kuki-led groups, and countered later by Naga groups, which together had a (3) \_\_\_\_\_ effect on life in Manipur. This time the blockade is in place to oppose the creation of new districts by the Okramlbobi Singh government. On 9 December it issued a (4) \_\_\_\_\_ notification for the creation of seven new districts by bifurcating seven (of a total of nine) districts. This decision had as much to do with long-pending demands — in particular, for a new Kuki-majority district to be carved out of the larger Senapati hill district — as with easing administrative access to (5) \_\_\_\_\_ areas from the district headquarters.

**SubQuestion No : 19**

**Q.19** Select the most appropriate option to fill in blank number 4.

- Ans
- 1. detail
  - 2. lively
  - 3. gazette
  - 4. live

Question ID : 26433088624

Status : Not Answered

Chosen Option : --

**Comprehension:**

In the following passage, some words have been deleted. Read the passage carefully and select the most appropriate option to fill in each blank.

The blockade of the national highways leading to the Manipur valley, called by the United Naga Council (UNC), has been in place since 1 November. This has severely affected life in the State, with shortages and (1) \_\_\_\_\_ costs of essential supplies such as fuel and food, even as demonetisation has (2) \_\_\_\_\_ problems. Blockades like this are not new to Manipur. In 2011, there was initially a hundred-day- plus blockade enforced by Kuki-led groups, and countered later by Naga groups, which together had a (3) \_\_\_\_\_ effect on life in Manipur. This time the blockade is in place to oppose the creation of new districts by the Okramlbobi Singh government. On 9 December it issued a (4) \_\_\_\_\_ notification for the creation of seven new districts by bifurcating seven (of a total of nine) districts. This decision had as much to do with long-pending demands — in particular, for a new Kuki-majority district to be carved out of the larger Senapati hill district — as with easing administrative access to (5) \_\_\_\_\_ areas from the district headquarters.

**SubQuestion No : 20**

**Q.20** Select the most appropriate option to fill in blank number 5.

- Ans
- 1. far-flung
  - 2. offshore
  - 3. outskirts
  - 4. secluded

Question ID : 26433088625

Status : Not Answered

Chosen Option : --

Q.1 मैंने विद्यालय के प्रधानाचार्य से प्रार्थना की कि मुझे छात्रवृत्ति प्रदान करें।  
उपरोक्त वाक्य में प्रयुक्त 'प्रार्थना' शब्द का सही अर्थ है -

- Ans
- 1. अपनी बात मनवाने के लिए कहना
  - 2. आग्रह पूर्वक विनती करना
  - 3. विनय पूर्वक विनती करना
  - 4. तर्क से अपनी बात रखना

Question ID : 26433080914  
Status : Answered  
Chosen Option : 2

Q.2 निम्नलिखित वाक्य में त्रुटि पहचानें-  
मैंने हाथ जोड़ दिया।

- Ans
- 1. दीया
  - 2. हाथ
  - 3. मैंने
  - 4. जोड़

Question ID : 26433066821  
Status : Answered  
Chosen Option : 4

Q.3 रेखांकित शब्द-समूह के लिए सर्वाधिक उपयुक्त विकल्प चुनें।  
आकाश में इतने तारे हैं कि गिने न जा सकें।

- Ans
- 1. असंख्य
  - 2. गणनीय
  - 3. गिनती के
  - 4. अनगिनत

Question ID : 26433062281  
Status : Answered  
Chosen Option : 4

Q.4 वाक्यांश और उसके लिए एक शब्द का निम्न में से कौन सा युग्म अशुद्ध है?

- Ans
- 1. लाभ पाने की इच्छा-लिप्सा
  - 2. जो किसी से जीता न जा सके-अजेय
  - 3. सात दिन का समूह-सप्ताह
  - 4. नाप तौलकर खर्च करने वाला-मितभाषी

Question ID : 264330109529  
Status : Answered  
Chosen Option : 4

Q.5 अरे ! साँप कहाँ गया ?

इस वाक्य में प्रयुक्त क्रिया विशेषण 'कहाँ' किस प्रकार का क्रियाविशेषण है ?

- Ans
- 1. साधारण क्रिया विशेषण
  - 2. अनुबद्ध क्रिया विशेषण
  - 3. मूल क्रिया विशेषण
  - 4. यौगिक क्रिया विशेषण

Question ID : 26433079231  
Status : Answered  
Chosen Option : 4

Q.6 रिक्त स्थान की पूर्ति उचित कारक चिन्ह से करें-

श्याम मीरा \_\_\_\_\_ खिलौने लाया।

- Ans
- 1. में
  - 2. के लिए
  - 3. ने
  - 4. का

Question ID : 26433085031  
Status : Answered  
Chosen Option : 2

Q.7 निम्न वाक्य में अनुपयुक्त शब्द-प्रयोग सम्बन्धी अशुद्धि दूर करने के लिए, रेखांकित भाग को उचित विकल्प चुनकर प्रतिस्थापित करें-  
'हिन्दी-साहित्य में आचार्य रामचंद्र शुक्ल एक बड़े व्याख्याता माने जाते हैं।'

- Ans
- 1. बड़े अच्छे वक्ता
  - 2. एक उत्कृष्ट विश्लेषक
  - 3. एक अच्छे वर्चक
  - 4. एक बड़े साहित्यक

Question ID : 26433062805  
Status : Answered  
Chosen Option : 2

Q.8 निम्नलिखित मुहावरे के लिए उपयुक्त सार्थक शब्द है-  
जी अच्छा होना

- Ans
- 1. तबियत ठीक होना
  - 2. बहाना करना
  - 3. हिम्मत करना
  - 4. रंग विरंगी

Question ID : 26433065770  
Status : Answered  
Chosen Option : 1



Q.9 निम्न में से कौन सा 'जल' शब्द का पर्यायवाची है?

- Ans
- 1. अंबुधि
  - 2. नीरज
  - 3. नीर
  - 4. वारिज

Question ID : 26433092014  
Status : Answered  
Chosen Option : 2

Q.10 रितेश को जब कक्षा में प्रथम आने का समाचार मिला, तो उसकी \_\_\_\_\_ खिल गई।  
रिक्त स्थान की पूर्ति उचित शब्द द्वारा कीजिए।

- Ans
- 1. बाँछे
  - 2. आँखे
  - 3. मुस्कान
  - 4. चेहरा

Question ID : 26433062618  
Status : Answered  
Chosen Option : 2

Q.11 निम्नलिखित में से शुद्ध वाक्य है-

- Ans
- 1. बहुत लोग एक साथ दौड़ पड़े।
  - 2. बहुत लोग एक सथ दौड़ पड़े।
  - 3. बहुत लोग ईक साथ दौड़ पड़े।
  - 4. बहुत लोग एक साथ दौठ पड़े।

Question ID : 26433066842  
Status : Answered  
Chosen Option : 1

Q.12 दिए गए विकल्पों में से कौन सा शब्द निम्नलिखित वाक्य में रेखांकित शब्द का पर्यायवाची नहीं है?

रासबिहारी बोस दिल्ली 'षड्यन्त्र' के मुख्य अभियुक्त थे।

- Ans
- 1. साजिद
  - 2. दुरभिसंधि
  - 3. कुचक्र
  - 4. साजिश

Question ID : 26433091340  
Status : Answered  
Chosen Option : 1



Q.13 भगवान दिवाकर जीवनदायी हैं।

रेखांकित शब्द के उचित पर्यायवाची शब्द का चयन कीजिए।

- Ans  1. सूर्य  
 2. नयन  
 3. शशि  
 4. अब्ज

Question ID : 26433079620

Status : Answered

Chosen Option : 1

Q.14 निम्नलिखित वाक्य में रेखांकित खंड के स्थान पर प्रयुक्त होने वाले सबसे उपयुक्त विकल्प का चयन कीजिए-

वह अतिथि सेवा के तत्पर लिए है।

- Ans  1. के लिए तत्पर है  
 2. के लिए है तत्पर  
 3. तत्पर है के लिए  
 4. तत्पर के लिए है

Question ID : 26433070051

Status : Answered

Chosen Option : 1

Q.15 'अनुसंधान \_\_\_\_\_'

उपर्युक्त वाक्य में रिक्त स्थान के लिए उपयुक्त वाक्यांश का चयन विकल्पों में से कीजिए।

- Ans  1. की अर्थ में खोज होता है।  
 2. खोज का अनर्थ होता है।  
 3. द्वारा खोज का अर्थ होता है।  
 4. का अर्थ खोज होता है।

Question ID : 26433067035

Status : Answered

Chosen Option : 4

**Comprehension:**

निम्नलिखित गद्यांश में कुछ शब्दों को हटा दिया गया है। दिए गए विकल्पों की सहायता से रिक्त स्थानों की पूर्ति कीजिए। प्रत्येक संख्या के लिए सबसे उपयुक्त विकल्प का चयन करें।

आत्मनिर्भरता से तात्पर्य है- अपने ऊपर 1. \_\_\_\_\_ रहना। जब मनुष्य अपने कार्य 2. \_\_\_\_\_ करता है तो आत्मनिर्भर कहलाता है। बहुत से कार्य वह दूसरों के 3. \_\_\_\_\_ करता है। आत्मनिर्भरता का अर्थ यह है कि जब किसी कार्य को करने का मन करे, उसके लिए पूर्ण 4. \_\_\_\_\_ और लगन का परिचय दे। स्वयं अपने सहारे उसे सिद्ध करने का 5. \_\_\_\_\_ करें।

**SubQuestion No : 16****Q.16 रिक्त स्थान 1 की पूर्ति के लिए सबसे उपयुक्त विकल्प का चयन कीजिए।**

- Ans
- 1. प्रवृत्ति
  - 2. दुभर
  - 3. सहारा
  - 4. निर्भर

Question ID : 264330111077

Status : Answered

Chosen Option : 4

**Comprehension:**

निम्नलिखित गद्यांश में कुछ शब्दों को हटा दिया गया है। दिए गए विकल्पों की सहायता से रिक्त स्थानों की पूर्ति कीजिए। प्रत्येक संख्या के लिए सबसे उपयुक्त विकल्प का चयन करें।

आत्मनिर्भरता से तात्पर्य है- अपने ऊपर 1. \_\_\_\_\_ रहना। जब मनुष्य अपने कार्य 2. \_\_\_\_\_ करता है तो आत्मनिर्भर कहलाता है। बहुत से कार्य वह दूसरों के 3. \_\_\_\_\_ करता है। आत्मनिर्भरता का अर्थ यह है कि जब किसी कार्य को करने का मन करे, उसके लिए पूर्ण 4. \_\_\_\_\_ और लगन का परिचय दे। स्वयं अपने सहारे उसे सिद्ध करने का 5. \_\_\_\_\_ करें।

**SubQuestion No : 17****Q.17 रिक्त स्थान 2 की पूर्ति के लिए सबसे उपयुक्त विकल्प का चयन कीजिए।**

- Ans
- 1. नहीं
  - 2. स्वयं
  - 3. श्रेष्ठ
  - 4. कल

Question ID : 264330111078

Status : Answered

Chosen Option : 2

**Comprehension:**

निम्नलिखित गद्यांश में कुछ शब्दों को हटा दिया गया है। दिए गए विकल्पों की सहायता से रिक्त स्थानों की पूर्ति कीजिए। प्रत्येक संख्या के लिए सबसे उपयुक्त विकल्प का चयन करें।

आत्मनिर्भरता से तात्पर्य है- अपने ऊपर 1. \_\_\_\_\_ रहना। जब मनुष्य अपने कार्य 2. \_\_\_\_\_ करता है तो आत्मनिर्भर कहलाता है। बहुत से कार्य वह दूसरों के 3. \_\_\_\_\_ करता है। आत्मनिर्भरता का अर्थ यह है कि जब किसी कार्य को करने का मन करे, उसके लिए पूर्ण 4. \_\_\_\_\_ और लगन का परिचय दे। स्वयं अपने सहारे उसे सिद्ध करने का 5. \_\_\_\_\_ करें।

**SubQuestion No : 18**

Q.18 रिक्त स्थान 3 की पूर्ति के लिए सबसे उपयुक्त विकल्प का चयन कीजिए।

- Ans
- 1. स्थिति
  - 2. सहारे
  - 3. लक्ष्य
  - 4. प्रकार

Question ID : 264330111079

Status : Answered

Chosen Option : 2

**Comprehension:**

निम्नलिखित गद्यांश में कुछ शब्दों को हटा दिया गया है। दिए गए विकल्पों की सहायता से रिक्त स्थानों की पूर्ति कीजिए। प्रत्येक संख्या के लिए सबसे उपयुक्त विकल्प का चयन करें।

आत्मनिर्भरता से तात्पर्य है- अपने ऊपर 1. \_\_\_\_\_ रहना। जब मनुष्य अपने कार्य 2. \_\_\_\_\_ करता है तो आत्मनिर्भर कहलाता है। बहुत से कार्य वह दूसरों के 3. \_\_\_\_\_ करता है। आत्मनिर्भरता का अर्थ यह है कि जब किसी कार्य को करने का मन करे, उसके लिए पूर्ण 4. \_\_\_\_\_ और लगन का परिचय दे। स्वयं अपने सहारे उसे सिद्ध करने का 5. \_\_\_\_\_ करें।

**SubQuestion No : 19**

Q.19 रिक्त स्थान 4 की पूर्ति के लिए सबसे उपयुक्त विकल्प का चयन कीजिए।

- Ans
- 1. तत्परता
  - 2. सहायता
  - 3. विफलता
  - 4. अकर्मण्यता

Question ID : 264330111080

Status : Answered

Chosen Option : 1

**Comprehension:**

निम्नलिखित गद्यांश में कुछ शब्दों को हटा दिया गया है। दिए गए विकल्पों की सहायता से रिक्त स्थानों की पूर्ति कीजिए। प्रत्येक संख्या के लिए सबसे उपयुक्त विकल्प का चयन करें।

आत्मनिर्भरता से तात्पर्य है- अपने ऊपर 1. \_\_\_\_\_ रहना। जब मनुष्य अपने कार्य 2. \_\_\_\_\_ करता है तो आत्मनिर्भर कहलाता है। बहुत से कार्य वह दूसरों के 3. \_\_\_\_\_ करता है। आत्मनिर्भरता का अर्थ यह है कि जब किसी कार्य को करने का मन करे, उसके लिए पूर्ण 4. \_\_\_\_\_ और लगन का परिचय दे। स्वयं अपने सहारे उसे सिद्ध करने का 5. \_\_\_\_\_ करे।

**SubQuestion No : 20**

**Q.20** रिक्त स्थान 5 की पूर्ति के लिए सबसे उपयुक्त विकल्प का चयन कीजिए।

- Ans**
- 1. पाठ
  - 2. प्रयास
  - 3. विकास
  - 4. ध्यान

Question ID : 264330111081

Status : Answered

Chosen Option : 2



## Constable GD in CAPFs SSF Rifleman GD in Assam Rifles and Sepoy in NCB Examination 2022

Roll Number	
Candidate Name	
Venue Name	iON Digital Zone iDZ Kanti
Exam Date	11/01/2023
Exam Time	9:00 AM - 10:00 AM
Subject	Constable GD Examination 2022

### Section : Part-A-General Intelligence and Reasoning

**Q.1** Six people U, V, W, X, Y, and Z are sitting in a circle facing opposite to the centre. U is sitting third to the right of Y. W is sitting to the immediate left of U. W is sitting third to the left of V. Z is not sitting next to U. Who is sitting between W and Y?

- Ans
- 1. Z
  - 2. X
  - 3. U
  - 4. V

Question ID : 264330114206  
Status : Answered  
Chosen Option : 1

**Q.2** Which option represents the correct order of the given words as they would appear in the English dictionary?

- 1 kind
- 2 kite
- 3 knit
- 4 king
- 5 kindle

- Ans
- 1. 1,5,4,2,3
  - 2. 1,4,2,5,3
  - 3. 1,5,2,4,3
  - 4. 1,4,5,2,3

Question ID : 26433069300  
Status : Answered  
Chosen Option : 1

**Q.3** Which letter-cluster will replace the question mark (?) to complete the given series?  
XCMQ, YDNR, ?, AFPT, BGQU

- Ans
- 1. ZEOR
  - 2. ZEPS
  - 3. ZEUS
  - 4. ZEOS

Question ID : 26433067941  
Status : Answered  
Chosen Option : 4



**Q.4** Three Statements are given followed by Three conclusions numbered I, II and III. Assuming the statements to be true, even if they seem to be at variance with commonly known facts, decide which of the conclusions logically follow(s) from the statements.

Statements:

All bags are rubber.

Some rubber are chairs.

All chairs are tables.

Conclusions:

I. Some rubber are bags.

II. Some chairs are rubber.

III. Some chairs are tables.

- Ans
- 1. Both conclusions I and III follow.
  - 2. Both conclusions I and II follow.
  - 3. All conclusions follow.
  - 4. Both conclusions II and III follow.

Question ID : 26433074639  
Status : Answered  
Chosen Option : 3

**Q.5** Which of the mathematical signs should be interchanged in the below equation to make it mathematically correct?

$$144 - 12 + 18 \times 6 + 24 = 96$$

- Ans
- 1. - and +
  - 2. - and ×
  - 3. × and +
  - 4. - and +

Question ID : 264330117489  
Status : Answered  
Chosen Option : 1

**Q.6** 'A + B' means 'B is the brother of A'  
'A - B' means 'B is the sister of A'  
'A % B' means 'B is the daughter of A'  
'A & B' means 'B is the wife of A'

If A & B % C + D - E, then how is E related to A?

- Ans
- 1. Mother
  - 2. Wife
  - 3. Daughter
  - 4. Sister

Question ID : 26433068529  
Status : Answered  
Chosen Option : 3

**Q.7** Seven friends are sitting around a circular table facing the centre. T is an immediate neighbour of K and U. S is sitting immediate right of K. W is an immediate neighbour of U and M. Who is sitting third to the left of K?

- Ans
- 1. W
  - 2. M
  - 3. U
  - 4. T

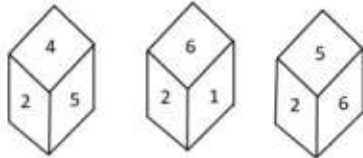
Question ID : 26433080433  
Status : Answered  
Chosen Option : 1

**Q.8** Which number will replace the question mark (?) in the following series?  
6, 24, 60, 120, ?

- Ans**
- 1. 150
  - 2. 180
  - 3. 135
  - 4. 210

Question ID : 26433067838  
Status : Answered  
Chosen Option : 4

**Q.9** Three different positions of the same dice are shown. Find the number on the face opposite the face showing '2'.

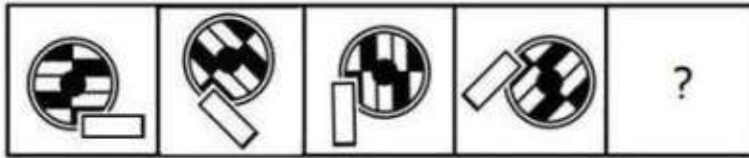


- Ans**
- 1. 5
  - 2. 1
  - 3. 4
  - 4. 3

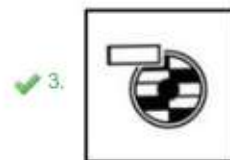
Question ID : 26433090067  
Status : Answered  
Chosen Option : 4

Adda247

Q.10 Select the figure that will come next in the following series.



Ans



Question ID : 26433078969  
Status : Answered  
Chosen Option : 3

Q.11 Select the option that is related to the third word in the same way as the second word is related to the first word. (The words must be considered as meaningful English words and must not be related to each other based on the number of letters/number of consonants/vowels in the word.)  
Kite : Claw :: Horse : ?

- Ans
- ✗ 1. Strong
  - ✗ 2. Fast
  - ✗ 3. Power
  - ✓ 4. Hoof

Question ID : 26433069578  
Status : Answered  
Chosen Option : 4

Q.12 In a certain code language, 'GHOST' is written as 'JCRNW' and 'FIRED' is written as 'IDUZG'. How will 'RIFLE' be written in the same code language?

- Ans
- ✓ 1. UDIGH
  - ✗ 2. VEJFH
  - ✗ 3. PDBGH
  - ✗ 4. UIDBH

Question ID : 26433068145  
Status : Answered  
Chosen Option : 1

Q.13 Select the option that is related to the fifth letter-cluster in the same way as the second letter-cluster is related to the first letter-cluster and the fourth letter-cluster is related to the third letter-cluster.

PAE : HCQ :: ESH: KUF :: FDN : ?

- Ans
- 1. QFG
  - 2. KFG
  - 3. KGP
  - 4. PFH

Question ID : 26433057713  
Status : Answered  
Chosen Option : 1

Q.14 Which letter-cluster will replace the question mark (?) to complete the given series?  
QJKE, SHIG, UFGI, ?, YBCM

- Ans
- 1. WCFM
  - 2. VEFL
  - 3. VDEN
  - 4. WDEK

Question ID : 26433068036  
Status : Answered  
Chosen Option : 4

Q.15 Select the correct mirror image of the given combination when the mirror is placed at 'PQ' as shown below.

G C P U W K



- Ans
- 1. K W U P C G
  - 2. G C P U W K
  - 3. K M U P C G
  - 4. K W U M G C

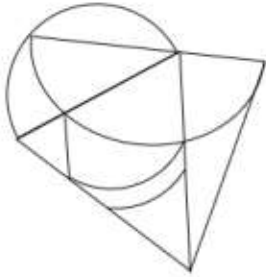
Question ID : 26433081696  
Status : Answered  
Chosen Option : 1

Q.16 In a certain code language, 'SLOWLY' is written as 'TMNXMZ' and 'FRIEND' is written as 'GSHDOE'. How will 'BORING' be written in that language?

- Ans
- 1. CPSNOH
  - 2. CNSHOH
  - 3. CNSJOH
  - 4. CNSHOF

Question ID : 26433081760  
Status : Answered  
Chosen Option : 2

Q.17 Select the option figure which is embedded in the given figure. (Rotation is NOT allowed)

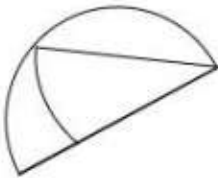


Ans

✗ 1.



✓ 2.



✗ 3.



✗ 4.



Question ID : 26433069331  
Status : Answered  
Chosen Option : 2

Q.18 Which of the following numbers will replace the question mark (?) in the given series?  
62498, 61874, ?, 60644, 60038, 59438

Ans ✓ 1. 61256

✗ 2. 61656

✗ 3. 60544

✗ 4. 60446

Question ID : 26433076751  
Status : Answered  
Chosen Option : 1



Q.19 Select the set in which the numbers are related in the same way as are the numbers of the following sets.

(NOTE : Operations should be performed on the whole numbers, without breaking down the numbers into its constituent digits. E.g. 13 – Operations on 13 such as adding/subtracting/multiplying etc. to 13 can be performed. Breaking down 13 into 1 and 3 and then performing mathematical operations on 1 and 3 is not allowed)  
(11, 78, 15)  
(12, 90, 18)

- Ans
- 1. (12, 89, 17)
  - 2. (11, 91, 19)
  - 3. (13, 96, 19)
  - 4. (10, 54, 17)

Question ID : 26433076541  
Status : Answered  
Chosen Option : 1

Q.20 Select the correct combination of mathematical signs to sequentially replace the \* signs and to balance the given equation.  
 $10 * 18 * 19 * 2 * 1 * 217$

- Ans
- 1.  $\times, +, \times, +, =$
  - 2.  $\times, +, \times, -, =$
  - 3.  $\times, +, -, -, =$
  - 4.  $+, +, \times, -, =$

Question ID : 26433082881  
Status : Answered  
Chosen Option : 2

Section : Part-B-General Knowledge and General awareness

Q.1 Government of India has approved a new Central Sector Scheme entitled "National Beekeeping & Honey Mission (NBHM)" which is associated to \_\_\_\_\_ revolution.

- Ans
- 1. savoury
  - 2. sweet
  - 3. honey
  - 4. golden

Question ID : 264330116185  
Status : Answered  
Chosen Option : 3

Q.2 \_\_\_\_\_ are a narrow belt of high altitude (above 12,000 m) westerly winds in the troposphere. Their speed varies from about 110 km/h in summer to about 184 km/h in winter.

- Ans
- 1. Jet Streams
  - 2. Whirlwind
  - 3. Derecho
  - 4. Hurricane

Question ID : 264330115978  
Status : Not Answered  
Chosen Option : --

Q.3 After independence, India launched its First five year plan in \_\_\_\_\_.

- Ans
- 1. 1952
  - 2. 1953
  - 3. 1950
  - 4. 1951

Question ID : 264330116134  
Status : Answered  
Chosen Option : 1

Q.4 Which Indian dancer among the following was the Youngest recipient of Padma Vibhushan in 2003?

- Ans
- 1. Uday Shankar
  - 2. Sonal Mansingh
  - 3. Pandit Birju Maharaj
  - 4. Kelucharan Mohapatra

Question ID : 264330115839  
Status : Not Answered  
Chosen Option : --

Q.5 What is the chemical formula of Calcium Carbonate?

- Ans
- 1.  $\text{CaSO}_4$
  - 2.  $\text{CaCO}_3$
  - 3.  $\text{CaCO}_2$
  - 4.  $\text{CaO}$

Question ID : 264330115166  
Status : Answered  
Chosen Option : 3

Q.6 Which vitamin is also known as Thiamin?

- Ans
- 1. Vitamin B2
  - 2. Vitamin B3
  - 3. Vitamin B1
  - 4. Vitamin B12

Question ID : 264330115222  
Status : Answered  
Chosen Option : 3

Q.7 Who took oath as the Governor of Meghalaya in October 2022?

- Ans
- 1. Banwarilal Purohit
  - 2. Tathagata Roy
  - 3. Satya Pal Malik
  - 4. B. D. Mishra

Question ID : 264330114979  
Status : Answered  
Chosen Option : 2

Q.8 Gandhi-Irwin pact was signed in which year?

- Ans  1. 1931  
 2. 1935  
 3. 1929  
 4. 1933

Question ID : 264330115685  
Status : Answered  
Chosen Option : 1

Q.9 एक बजट दस्तावेज, जो किसी विशेष वित्तीय वर्ष के लिए सरकार की राजस्व प्राप्तियों और राजस्व व्यय से संबंधित होता है, \_\_\_\_\_ कहलाता है।

- Ans  1. राजस्व बजट  
 2. शून्य बजट  
 3. दीर्घकालिक बजट  
 4. पूंजीगत बजट

Question ID : 264330115276  
Status : Not Attempted and Marked For Review  
Chosen Option : --

Q.10 The last article of the Constitution of India has been given the number \_\_\_\_\_. (as on May 2022).

- Ans  1. 380  
 2. 390  
 3. 395  
 4. 385

Question ID : 264330115611  
Status : Answered  
Chosen Option : 3

Q.11 As of November 2022, who is the Union Minister for Education in India?

- Ans  1. Dharmendra Pradhan  
 2. Mansukh Mandaviya  
 3. Anurag Thakur  
 4. Kiren Rijju

Question ID : 264330114931  
Status : Answered  
Chosen Option : 1

Q.12 Which union territory has the highest sex ratio as per the 2011 Census?

- Ans  1. Lakshwadeep  
 2. Puducherry  
 3. Daman & Diu  
 4. Chandigarh

Question ID : 264330116048  
Status : Answered  
Chosen Option : 1

Q.13 \_\_\_\_\_ is celebrated as Gujarati New Year in India.

- Ans  1. Bestu Varas  
 2. Vishu  
 3. Losar  
 4. Losoong

Question ID : 264330115107  
Status : Answered  
Chosen Option : 2

Q.14 Primary raw material for sugar industry is \_\_\_\_\_.

- Ans  1. chemical sweetners  
 2. sweet potato  
 3. apple  
 4. sugar cane

Question ID : 264330115395  
Status : Answered  
Chosen Option : 4

Q.15 Which among the following classical dance forms was introduced in the 16th century by Vaishnava saint Mahapurusha Sankaradeva?

- Ans  1. Kuchipudi  
 2. Satriya  
 3. Odissi  
 4. Manipuri

Question ID : 264330115062  
Status : Not Answered  
Chosen Option : --

Q.16 In which city is the Mohun Bagan Athletic club situated?

- Ans  1. Jaipur  
 2. Kolkata  
 3. Lucknow  
 4. Bulandshahr

Question ID : 26433092324  
Status : Not Answered  
Chosen Option : --

Q.17 Who hosted the FIFA World Cup 2022?

- Ans  1. Brazil  
 2. Qatar  
 3. Spain  
 4. Germany

Question ID : 264330115926  
Status : Answered  
Chosen Option : 2

Q.18 Removal of president of the country from the office is known as \_\_\_\_\_.

- Ans  1. Impeachment  
 2. Termination of Services  
 3. Resignation  
 4. Voluntary Retirement from services

Question ID : 264330115666  
Status : Answered  
Chosen Option : 1

Q.19 Who among the following Greek rulers sent Megasthenes to the court of Chandragupta Maurya?

- Ans  1. Seleucus Nicator  
 2. Amyntas II  
 3. Amyntas III  
 4. Phillip II

Question ID : 26433090574  
Status : Answered  
Chosen Option : 2

Q.20 विरासत का अधिकार (right of inheritance) किस ओर ले जाता है?

- Ans  1. अनुपजाऊ भूमि  
 2. भूमि प्रदूषण  
 3. भूमि का विभाजन  
 4. भूमि की कमी

Question ID : 264330115523  
Status : Answered  
Chosen Option : 3

Section : Part-C-Elementary Mathematics

Q.1 Manish bought an air conditioner for Rs.46,875, its value is depreciating at the rate of 8% yearly. What will be the price of the air conditioner after 3 years?

- Ans  1. Rs.33,786  
 2. Rs.32,245  
 3. Rs.36,501  
 4. Rs.35,602

Question ID : 26433080339  
Status : Answered  
Chosen Option : 4

Q.2 एक व्यक्ति पहले दिन पर 6 घंटे में 240 kms, दूसरे दिन पर 8 घंटे में 360 kms और तीसरे दिन पर 6 घंटे में 450 kms की दूरी पूरी करता है। 3 दिनों में उसके द्वारा पूरी की गई प्रति घंटे की औसत दूरी ज्ञात करें।

- Ans  1. 52.5 kms  
 2. 50.5 kms  
 3. 51 kms  
 4. 48 kms

Question ID : 264330116683  
Status : Answered  
Chosen Option : 3



**Q.3** An increase of 25 percent in the price of onions enables a woman to buy 5 kg less for Rs. 200. The increased price of onions per kg is:

- Ans
- 1. Rs. 5 per kg
  - 2. Rs. 8 per kg
  - 3. Rs. 10 per kg
  - 4. Rs. 15 per kg

Question ID : 264330116789  
Status : Answered  
Chosen Option : 3

**Q.4** A person travels in a car for 600 km at an average speed of 50 km/h and 100 km at 100 km/h, and finally reaches his destination by travelling 50 km at a speed of 25 km/h. Determine the average speed during the whole journey.

- Ans
- 1. 50 km/h
  - 2. 75 km/h
  - 3. 58.33 km/h
  - 4. 25 km/h

Question ID : 26433071334  
Status : Answered  
Chosen Option : 1

**Q.5** There are 90 female members and 60 male members in a club. If the average age of female members is 35 years, and the average age of male members is 45 years, then find the average age (in years) of the whole club?

- Ans
- 1. 39
  - 2. 36
  - 3. 40
  - 4. 47

Question ID : 26433082705  
Status : Answered  
Chosen Option : 1

**Q.6** The difference between the two numbers is 15% of their sum. Find the ratio of the smaller number to the larger number.

- Ans
- 1.  $\frac{13}{17}$
  - 2.  $\frac{17}{13}$
  - 3.  $\frac{17}{23}$
  - 4.  $\frac{23}{17}$

Question ID : 26433080366  
Status : Answered  
Chosen Option : 3

**Q.7** The radius of a cone is 5 cm and its slant height is 16 cm. It's total surface area (in  $\text{cm}^2$ ) will be:

- Ans  1. 330  
 2. 300  
 3. 310  
 4. 320

Question ID : 26433085772  
Status : Answered  
Chosen Option : 1

**Q.8** Ruby bought 20 buttons for Rs.1. How many buttons she must sell for Rs.1 in order to get a profit of 25%?

- Ans  1. 15  
 2. 17  
 3. 14  
 4. 16

Question ID : 26433080304  
Status : Answered  
Chosen Option : 4

**Q.9** In a proportion, the product of the 1<sup>st</sup> and 4<sup>th</sup> term is 79 and that of 2<sup>nd</sup> and 3<sup>rd</sup> term is  $3.5x$ . The value of  $x$  is:

- Ans  1. 21  
 2. 35  
 3. 2  
 4. 20

Question ID : 26433074931  
Status : Answered  
Chosen Option : 4

**Q.10** A and B together can do a piece of the work in 50 hours, B and C together can do the same work in 75 hours and A and C together can do the same in 25 hours. Find the time in which A, B, and C together will complete the task.

- Ans  1.  $400/11$  hours  
 2.  $150/11$  hours  
 3.  $131/11$  hours  
 4.  $300/11$  hours

Question ID : 264330116869  
Status : Answered  
Chosen Option : 4

**Q.11** Find the difference between the greatest and the smallest 4-digit numbers exactly divisible by 36 and 48.

- Ans  1. 8928  
 2. 8892  
 3. 8298  
 4. 8982

Question ID : 264330116648  
Status : Answered  
Chosen Option : 1

Q.12 If machine A and B can produce 1100 units in 9 h and 12 h respectively. In how many hours can machine A and B working together at these constant rates produce 1100 units?

- Ans
- 1.  $\frac{36}{7}$
  - 2.  $\frac{37}{7}$
  - 3.  $\frac{39}{7}$
  - 4.  $\frac{38}{7}$

Question ID : 26433074312  
Status : Answered  
Chosen Option : 1

Q.13 Robin travels one-fourth of the distance at 20 km/h, another one-fourth at 10 km/h, and the remaining distance at 80 km/h. Find Robin's average speed for the entire distance (correct to 2 decimal places)?

- Ans
- 1. 25 km/h
  - 2. 22.86 km/h
  - 3. 20 km/h
  - 4. 18.2 km/h

Question ID : 26433065292  
Status : Answered  
Chosen Option : 2

Q.14 The marked price of an item was Rs. 100000, but the shopkeeper offered a double discount of 20 percent and 10 percent. At what price did he finally sell the item?

- Ans
- 1. Rs. 72000
  - 2. Rs. 80000
  - 3. Rs. 70000
  - 4. Rs. 82000

Question ID : 264330116754  
Status : Answered  
Chosen Option : 1

Q.15 If  $2^{305} + 303$  is divided by 9, then the remainder is:

- Ans
- 1. 2
  - 2. 4
  - 3. 6
  - 4. 1

Question ID : 26433079904  
Status : Answered  
Chosen Option : 1

Q.16 A chair is bought for ₹800 and sold for ₹1,100. Find the gain percentage.

- Ans
- 1. 40%
  - 2. 30%
  - 3. 37.5%
  - 4. 32.3%

Question ID : 26433074276  
Status : Answered  
Chosen Option : 3

Q.17 The curved surface area of right circular cylinder of height 14 cm is  $110\text{ cm}^2$ . What is the base diameter of the cylinder?

(Use  $\pi = \frac{22}{7}$ )

- Ans
- 1. 2.7 cm
  - 2. 2.4 cm
  - 3. 2.5 cm
  - 4. 2.6 cm

Question ID : 26433079779  
Status : Answered  
Chosen Option : 3

Q.18 The marked price on an item was Rs 2000/- but the shopkeeper offered a discount of 20 percent. How much did he finally sell the item for?

- Ans
- 1. Rs.1400
  - 2. Rs. 1200
  - 3. Rs. 1500
  - 4. Rs. 1600

Question ID : 264330116715  
Status : Answered  
Chosen Option : 4

Q.19 In how many years will ₹800 amount to ₹926.10 at 10% per annum, compounded half-yearly?

- Ans
- 1. 3
  - 2. 2
  - 3. 2.5
  - 4. 1.5

Question ID : 26433082403  
Status : Answered  
Chosen Option : 1

Q.20 If  $a + b = 25$  and  $a - b = 7$ , then determine the mean proportion of a and b.

- Ans
- 1. 12
  - 2. 15
  - 3. 6
  - 4. 9

Question ID : 26433080114  
Status : Answered  
Chosen Option : 1

Q.1 Select the most appropriate ANTONYM of the given word.

Compassionate

- Ans  1. Likeable  
 2. Merciful  
 3. Cruel  
 4. Fashionable

Question ID : 26433072211  
Status : Answered  
Chosen Option : 3

Q.2 Select the most appropriate synonym for the underlined word in the given sentence.

An oxygen cylinder is used to deliver oxygen through the patient's nasal orifice.

- Ans  1. origin  
 2. orate  
 3. ordained  
 4. opening

Question ID : 26433073754  
Status : Answered  
Chosen Option : 2

Q.3 Select the most appropriate ANTONYM of the given word.

Feeble

- Ans  1. Anxious  
 2. Weak  
 3. Sturdy  
 4. Curious

Question ID : 26433073918  
Status : Answered  
Chosen Option : 3

Q.4 The sentence below is divided into four segments. Select the option that has an error of tense.

I has been / visiting my / family and relatives / during the winter vacation.

- Ans  1. during the winter vacation  
 2. family and relatives  
 3. visiting my  
 4. I has been

Question ID : 26433092945  
Status : Answered  
Chosen Option : 4



**Q.5** Select the most appropriate option that can substitute the underlined segment in the given sentence.

My uncle has an extremely large bungalow which has six bedrooms, five bathrooms and four living rooms.

- Ans
- 1. enormous
  - 2. meagre
  - 3. great
  - 4. oversize

Question ID : 26433086460  
Status : Answered  
Chosen Option : 1

**Q.6** Select the most appropriate meaning of the underlined idiom in the given sentence.

Siraj-ud Daula's defeat can be attributed to a snake in the grass.

- Ans
- 1. A devoted attendant
  - 2. A disloyal soldier
  - 3. A deceitful person
  - 4. A coiled serpent

Question ID : 26433071996  
Status : Answered  
Chosen Option : 3

**Q.7** Select the most appropriate option to fill in the blank.

He is an absolutely \_\_\_\_\_ man.

- Ans
- 1. chased
  - 2. chaste
  - 3. chest
  - 4. crazed

Question ID : 26433090388  
Status : Answered  
Chosen Option : 2

**Q.8** Select the most appropriate ANTONYM of the bracketed word to fill in the blank.

The medicine was so \_\_\_\_\_ (sweet) that a man had to choose sugar along with it.

- Ans
- 1. rancid
  - 2. sour
  - 3. stale
  - 4. fetid

Question ID : 26433060720  
Status : Answered  
Chosen Option : 4

**Q.9** Select the option in which all the words are spelt correctly.

- Ans
- 1. The sage preached that we are accountable to God in this life.
  - 2. The sage preached that we are akountable to God in this life.
  - 3. The sage preached that we are accuountable to God in this life.
  - 4. The sage preached that we are accountable to God in this life.

Question ID : 26433072287  
Status : Answered  
Chosen Option : 1

Q.10 Select the most appropriate option to fill in the blank.

He indeed is intelligent who \_\_\_\_\_ this and succeeds in making all work truly great.

- Ans
- 1. was noticed
  - 2. noticed
  - 3. notices
  - 4. noticing

Question ID : 26433088957  
Status : Answered  
Chosen Option : 3

Q.11 Select the INCORRECTLY spelt word.

- Ans
- 1. Skulptor
  - 2. Miraculous
  - 3. Vision
  - 4. Succeed

Question ID : 26433073733  
Status : Answered  
Chosen Option : 1

Q.12 Select the most appropriate synonym of the given word.

Ideal

- Ans
- 1. Excellent
  - 2. Hefty
  - 3. Bad
  - 4. Intact

Question ID : 26433088925  
Status : Answered  
Chosen Option : 4

Q.13 Select the most appropriate option that can substitute the underlined segment in the given sentence. If there is no need to substitute it, select 'No substitution'.

I visited the hospital to enquire about eyes surgery.

- Ans
- 1. enquire about eye surgery
  - 2. enquire for eyes surgery
  - 3. enquired about eye surgery
  - 4. No substitution

Question ID : 26433093072  
Status : Answered  
Chosen Option : 2

Q.14 Select the most appropriate meaning of the given idiom.

To call in question

- Ans
- 1. Show indifference
  - 2. Take a resolute stand
  - 3. Challenge
  - 4. Dislike the arrangement

Question ID : 26433073874  
Status : Not Answered  
Chosen Option : --

**Q.15 Complete the sentence using correct pair of words from the options given.**

**My brother \_\_\_\_\_ apples during his fast.**

- Ans**  1. ate; eight  
 2. eight; eight  
 3. ate; ate  
 4. eight; ate

Question ID : 26433088870  
Status : **Answered**  
Chosen Option : 1

**Comprehension:**

In the following passage, some words have been deleted. Read the passage carefully and select the most appropriate option to fill in each blank.

One certain benefit of online communication either through email or even communicating through WhatsApp nowadays is that there is a (1) \_\_\_\_\_ dependence on paper. It is said that to make a ton of paper 17 trees have to be cut down. With the already existing demand for paper to meet (2) \_\_\_\_\_ needs, it would be horrendous to keep (3) \_\_\_\_\_ the demand for paper worldwide. Online communication is a boon as many documents are now sent by mail through PDF, Microsoft Word or the JPEG format. This means that there is certainly a (4) \_\_\_\_\_ in the use of paper due to online communication. Many people read online newspapers nowadays, which means there is a decline in the number of people buying offline versions of (5) \_\_\_\_\_.

**SubQuestion No : 16**

**Q.16 Select the most appropriate option to fill in blank number 1.**

- Ans**  1. restless  
 2. crest  
 3. less  
 4. dress

Question ID : 26433088749  
Status : **Answered**  
Chosen Option : 3

**Comprehension:**

In the following passage, some words have been deleted. Read the passage carefully and select the most appropriate option to fill in each blank.

One certain benefit of online communication either through email or even communicating through WhatsApp nowadays is that there is a (1) \_\_\_\_\_ dependence on paper. It is said that to make a ton of paper 17 trees have to be cut down. With the already existing demand for paper to meet (2) \_\_\_\_\_ needs, it would be horrendous to keep (3) \_\_\_\_\_ the demand for paper worldwide. Online communication is a boon as many documents are now sent by mail through PDF, Microsoft Word or the JPEG format. This means that there is certainly a (4) \_\_\_\_\_ in the use of paper due to online communication. Many people read online newspapers nowadays, which means there is a decline in the number of people buying offline versions of (5) \_\_\_\_\_.

**SubQuestion No : 17**

**Q.17 Select the most appropriate option to fill in blank number 2.**

- Ans**  1. controversial  
 2. various  
 3. rare  
 4. handle

Question ID : 26433088750  
Status : **Answered**  
Chosen Option : 2

**Comprehension:**

In the following passage, some words have been deleted. Read the passage carefully and select the most appropriate option to fill in each blank.

One certain benefit of online communication either through email or even communicating through WhatsApp nowadays is that there is a (1) \_\_\_\_\_ dependence on paper. It is said that to make a ton of paper 17 trees have to be cut down. With the already existing demand for paper to meet (2) \_\_\_\_\_ needs, it would be horrendous to keep (3) \_\_\_\_\_ the demand for paper worldwide. Online communication is a boon as many documents are now sent by mail through PDF, Microsoft Word or the JPEG format. This means that there is certainly a (4) \_\_\_\_\_ in the use of paper due to online communication. Many people read online newspapers nowadays, which means there is a decline in the number of people buying offline versions of (5) \_\_\_\_\_.

**SubQuestion No : 18**

**Q.18 Select the most appropriate option to fill in blank number 3.**

- Ans**  1. planning  
 2. increasing  
 3. contriving  
 4. depriving

Question ID : 26433088751  
Status : Answered  
Chosen Option : 4

**Comprehension:**

In the following passage, some words have been deleted. Read the passage carefully and select the most appropriate option to fill in each blank.

One certain benefit of online communication either through email or even communicating through WhatsApp nowadays is that there is a (1) \_\_\_\_\_ dependence on paper. It is said that to make a ton of paper 17 trees have to be cut down. With the already existing demand for paper to meet (2) \_\_\_\_\_ needs, it would be horrendous to keep (3) \_\_\_\_\_ the demand for paper worldwide. Online communication is a boon as many documents are now sent by mail through PDF, Microsoft Word or the JPEG format. This means that there is certainly a (4) \_\_\_\_\_ in the use of paper due to online communication. Many people read online newspapers nowadays, which means there is a decline in the number of people buying offline versions of (5) \_\_\_\_\_.

**SubQuestion No : 19**

**Q.19 Select the most appropriate option to fill in blank number 4.**

- Ans**  1. traction  
 2. reduction  
 3. induction  
 4. gumption

Question ID : 26433088752  
Status : Answered  
Chosen Option : 2



**Comprehension:**

In the following passage, some words have been deleted. Read the passage carefully and select the most appropriate option to fill in each blank.

One certain benefit of online communication either through email or even communicating through WhatsApp nowadays is that there is a (1) \_\_\_\_\_ dependence on paper. It is said that to make a ton of paper 17 trees have to be cut down. With the already existing demand for paper to meet (2) \_\_\_\_\_ needs, it would be horrendous to keep (3) \_\_\_\_\_ the demand for paper worldwide. Online communication is a boon as many documents are now sent by mail through PDF, Microsoft Word or the JPEG format. This means that there is certainly a (4) \_\_\_\_\_ in the use of paper due to online communication. Many people read online newspapers nowadays, which means there is a decline in the number of people buying offline versions of (5) \_\_\_\_\_.

**SubQuestion No : 20**

**Q.20** Select the most appropriate option to fill in blank number 5.

- Ans  1. fliers  
 2. magazines  
 3. newspapers  
 4. canvas

Question ID : 26433088753  
Status : Answered  
Chosen Option : 3

**Section : Part-D-Hindi**

**Q.1** विकल्पों में से निम्नलिखित वाक्यांश के लिए उपयुक्त शब्द चुनें।  
जो इंद्रियों से परे हो

- Ans  1. अतींद्रिय  
 2. ज्ञानेंद्रिय  
 3. जितेंद्रिय  
 4. कर्मेंद्रिय

Question ID : 26433069992  
Status : Not Answered  
Chosen Option : --

**Q.2** निम्नलिखित वाक्य के रेखांकित अंश के स्थान पर विकल्पों में सबसे उपयुक्त शब्द का चयन कीजिए।  
शोक है कि मैं आपके पत्र का उत्तर नहीं दे सका।

- Ans  1. पता  
 2. खुशी  
 3. कष्ट  
 4. खेद

Question ID : 26433066868  
Status : Not Answered  
Chosen Option : --

**Q.3** 'गंगा नदी भारत देश में हजारों लोगों की जीवनदायिनी है।' निम्नलिखित में से कौन सा शब्द 'गंगा' का पर्यायवाची शब्द नहीं है।

- Ans  1. हंसजा  
 2. देवपगा  
 3. विष्णुपदी  
 4. सुरसरिता

Question ID : 26433069737  
Status : Not Answered  
Chosen Option : --



Q.4 सिंह की सवारी सबके बस की बात नहीं है।  
उस विकल्प का चयन कीजिए जो उपरोक्त वाक्य में रेखांकित शब्द का पर्यायवाची शब्द नहीं है।

- Ans
- 1. सिंह
  - 2. केसरी
  - 3. मणि
  - 4. वनराज

Question ID : 26433091341  
Status : Not Answered  
Chosen Option : --

Q.5 'सारे शरीर की हड्डियों का ढांचा' वाक्यांश के लिए सार्थक शब्द है-

- Ans
- 1. शरीर की हड्डियां
  - 2. कंकाल
  - 3. हड्डी का ढांचा
  - 4. मांसपेशी

Question ID : 26433062224  
Status : Not Answered  
Chosen Option : --

Q.6 'जो कहा गया है' वाक्यांश के लिए सार्थक शब्द है-

- Ans
- 1. अकथ्य
  - 2. कल्पित
  - 3. कथित
  - 4. वचनातीत

Question ID : 26433065864  
Status : Not Answered  
Chosen Option : --

Q.7 निम्नलिखित में से अशुद्ध वाक्य कौन-सा है?

- Ans
- 1. कोयल पेड़ में बैठी है।
  - 2. अंजना ने नई साड़ी खरीदी।
  - 3. वसुंधरा बहुत सुरीला गाती है।
  - 4. सुमेध आज छुट्टी पर है।

Question ID : 26433066989  
Status : Not Answered  
Chosen Option : --

Q.8 'आफिसर ने कर्मचारी को फ़ाइल लाने का आदेश दिया।' इस वाक्य में प्रयुक्त 'आदेश' शब्द का अर्थ क्या है?

- Ans
- 1. छोटों को बहकाना
  - 2. आज्ञा पालन के लिए कहना
  - 3. अपने कर्मचारियों की अवज्ञा करना
  - 4. अपने से छोटों को डांटना

Question ID : 26433080915  
Status : Not Answered  
Chosen Option : --

Q.9 निम्न विकल्पों में से अशुद्ध वाक्य छाँटिए।

- Ans
- 1. लड़की पुस्तक पढ़ती है।
  - 2. लड़के ने घर जाना है।
  - 3. मुझे उस पर दया आती है।
  - 4. शीला को नाटक अच्छा लगा।

Question ID : 26433063035  
Status : Not Answered  
Chosen Option : --

Q.10 'निरक्षर' शब्द का विलोम क्या होगा?

- Ans
- 1. अपढ़
  - 2. महान
  - 3. अनपढ़
  - 4. साक्षर

Question ID : 26433067090  
Status : Not Answered  
Chosen Option : --

Q.11 निम्नलिखित वाक्य के किस भाग में वर्तनी सम्बन्धी त्रुटि है?  
'आजकल दिल्ली के प्रगति मैदान में हस्तशिल्प प्रदर्शिनी चल रही है।'

- Ans
- 1. प्रगति मैदान में
  - 2. आजकल दिल्ली के
  - 3. हस्तशिल्प प्रदर्शिनी
  - 4. चल रही है।

Question ID : 26433063025  
Status : Not Answered  
Chosen Option : --

Q.12 मुहावरों और उनके अर्थ का निम्नलिखित में से कौन सा युग्म सही है?

- Ans
- 1. दाल न गलना-पूरा बस चलना
  - 2. दिन का फेर होना-दिनभर भटकते रहना
  - 3. त्रिशंकु होना-अधर में लटकते रहना
  - 4. दो दिन का मेहमान-लम्बे समय तक जीना

Question ID : 26433062559  
Status : Not Answered  
Chosen Option : --

Q.13 तब की बात कुछ और थी। फिर ऐसा नहीं होगा।  
उपरोक्त वाक्य में प्रयुक्त 'तब', 'फिर' समानार्थक क्रिया-विशेषणों के सही अर्थ क्या हैं?

- Ans
- 1. 'तब' का अर्थ बाद में और 'फिर' का अर्थ बार - बार
  - 2. 'तब' का अर्थ उस समय और 'फिर' का अर्थ दुबारा
  - 3. 'तब' का अर्थ उस समय और 'फिर' का अर्थ अलग
  - 4. 'तब' का अर्थ कहाँ और 'फिर' का अर्थ वर्तमान

Question ID : 26433079232  
Status : Not Answered  
Chosen Option : --

Q.14 निम्नलिखित वाक्य के किस भाग में शब्द-चयन सम्बन्धी अशुद्धि है?  
'हिन्दी के प्रचार में बहुत बड़े-बड़े संकट हैं।'

- Ans  1. बड़े-बड़े संकट हैं।  
 2. बहुत  
 3. प्रचार में  
 4. हिन्दी के

Question ID : 26433062806  
Status : Not Answered  
Chosen Option : --

Q.15 निम्नलिखित मुहावरे के लिए उपयुक्त सार्थक शब्द है-  
टका-सा जवाब देना

- Ans  1. साफ इंकार करना  
 2. हिचकना  
 3. बहाना करना  
 4. लालच देना

Question ID : 26433065771  
Status : Not Answered  
Chosen Option : --

**Comprehension:**

निम्नलिखित गद्यांश में कुछ शब्दों को हटा दिया गया है। दिए गए विकल्पों की सहायता से रिक्त स्थानों की पूर्ति कीजिए। प्रत्येक संख्या के लिए सबसे उपयुक्त विकल्प का चयन करें।

वैसे तो सभी आयु-वर्ग के लोग अपने-अपने जन्मदिन 1. \_\_\_\_\_ मनाते हैं, पर बच्चों में इस दिन को मनाने की उत्सुकता कुछ 2. \_\_\_\_\_ ही होती है। पूरे वर्ष वे इस दिन की 3. \_\_\_\_\_ करते रहते हैं। जब भी किसी के जन्मदिन में 4. \_\_\_\_\_ होते हैं लौटकर ज़रूर पूछते हैं कि हमारा जन्मदिन कब मनाया जाएगा। जन्मदिन पर घर को सजाया जाता है। इस दिन सभी मित्र 5. \_\_\_\_\_ होते हैं।

SubQuestion No : 16

Q.16 रिक्त स्थान 1 की पूर्ति के लिए सबसे उपयुक्त विकल्प का चयन कीजिए।

- Ans  1. उत्सुकता  
 2. प्रसन्नतापूर्वक  
 3. स्वाभाविक  
 4. रोज़

Question ID : 264330111083  
Status : Not Answered  
Chosen Option : --

**Comprehension:**

निम्नलिखित गद्यांश में कुछ शब्दों को हटा दिया गया है। दिए गए विकल्पों की सहायता से रिक्त स्थानों की पूर्ति कीजिए। प्रत्येक संख्या के लिए सबसे उपयुक्त विकल्प का चयन करें।

वैसे तो सभी आयु-वर्ग के लोग अपने-अपने जन्मदिन 1. \_\_\_\_\_ मनाते हैं, पर बच्चों में इस दिन को मनाने की उत्सुकता कुछ 2. \_\_\_\_\_ ही होती है। पूरे वर्ष वे इस दिन की 3. \_\_\_\_\_ करते रहते हैं। जब भी किसी के जन्मदिन में 4. \_\_\_\_\_ होते हैं लौटकर ज़रूर पूछते हैं कि हमारा जन्मदिन कब मनाया जाएगा। जन्मदिन पर घर को सजाया जाता है। इस दिन सभी मित्र 5. \_\_\_\_\_ होते हैं।

**SubQuestion No : 17**

Q.17 रिक्त स्थान 2 की पूर्ति के लिए सबसे उपयुक्त विकल्प का चयन कीजिए।

- Ans
- 1. अधिक
  - 2. प्रायः
  - 3. हमेशा
  - 4. कम

Question ID : 264330111084  
Status : Not Answered  
Chosen Option : --

**Comprehension:**

निम्नलिखित गद्यांश में कुछ शब्दों को हटा दिया गया है। दिए गए विकल्पों की सहायता से रिक्त स्थानों की पूर्ति कीजिए। प्रत्येक संख्या के लिए सबसे उपयुक्त विकल्प का चयन करें।

वैसे तो सभी आयु-वर्ग के लोग अपने-अपने जन्मदिन 1. \_\_\_\_\_ मनाते हैं, पर बच्चों में इस दिन को मनाने की उत्सुकता कुछ 2. \_\_\_\_\_ ही होती है। पूरे वर्ष वे इस दिन की 3. \_\_\_\_\_ करते रहते हैं। जब भी किसी के जन्मदिन में 4. \_\_\_\_\_ होते हैं लौटकर ज़रूर पूछते हैं कि हमारा जन्मदिन कब मनाया जाएगा। जन्मदिन पर घर को सजाया जाता है। इस दिन सभी मित्र 5. \_\_\_\_\_ होते हैं।

**SubQuestion No : 18**

Q.18 रिक्त स्थान 3 की पूर्ति के लिए सबसे उपयुक्त विकल्प का चयन कीजिए।

- Ans
- 1. प्रतीक्षा
  - 2. सहायता
  - 3. विकसित
  - 4. सार्थकता

Question ID : 264330111085  
Status : Not Answered  
Chosen Option : --

**Comprehension:**

निम्नलिखित गद्यांश में कुछ शब्दों को हटा दिया गया है। दिए गए विकल्पों की सहायता से रिक्त स्थानों की पूर्ति कीजिए। प्रत्येक संख्या के लिए सबसे उपयुक्त विकल्प का चयन करें।

वैसे तो सभी आयु-वर्ग के लोग अपने-अपने जन्मदिन 1. \_\_\_\_\_ मनाते हैं, पर बच्चों में इस दिन को मनाने की उत्सुकता कुछ 2. \_\_\_\_\_ ही होती है। पूरे वर्ष वे इस दिन की 3. \_\_\_\_\_ करते रहते हैं। जब भी किसी के जन्मदिन में 4. \_\_\_\_\_ होते हैं लौटकर ज़रूर पूछते हैं कि हमारा जन्मदिन कब मनाया जाएगा। जन्मदिन पर घर को सजाया जाता है। इस दिन सभी मित्र 5. \_\_\_\_\_ होते हैं।

**SubQuestion No : 19**

Q.19 रिक्त स्थान 4 की पूर्ति के लिए सबसे उपयुक्त विकल्प का चयन कीजिए।

- Ans
- 1. सामाजिक
  - 2. अभिव्यक्त
  - 3. विचलित
  - 4. सम्मिलित

Question ID : 264330111086  
Status : Not Answered  
Chosen Option : --

**Comprehension:**

निम्नलिखित गद्यांश में कुछ शब्दों को हटा दिया गया है। दिए गए विकल्पों की सहायता से रिक्त स्थानों की पूर्ति कीजिए। प्रत्येक संख्या के लिए सबसे उपयुक्त विकल्प का चयन करें।

वैसे तो सभी आयु-वर्ग के लोग अपने-अपने जन्मदिन 1. \_\_\_\_\_ मनाते हैं, पर बच्चों में इस दिन को मनाने की उत्सुकता कुछ 2. \_\_\_\_\_ ही होती है। पूरे वर्ष वे इस दिन की 3. \_\_\_\_\_ करते रहते हैं। जब भी किसी के जन्मदिन में 4. \_\_\_\_\_ होते हैं लौटकर ज़रूर पूछते हैं कि हमारा जन्मदिन कब मनाया जाएगा। जन्मदिन पर घर को सजाया जाता है। इस दिन सभी मित्र 5. \_\_\_\_\_ होते हैं।

**SubQuestion No : 20**

**Q.20** रिक्त स्थान 5 की पूर्ति के लिए सबसे उपयुक्त विकल्प का चयन कीजिए।

- Ans**
- 1. प्रेरणा
  - 2. संबंधित
  - 3. एकत्रित
  - 4. प्रसिद्धि

Question ID : 264330111087  
Status : Not Answered  
Chosen Option : --

